


Twenty Questions!

Download Edition

www.professorchess.com



**Guided practice
for analyzing
opening positions.**

**Look at opening positions
under a magnifying glass!**


*Copyright © 1998-2003
Prof. Chester Nuhmentz*

In the traditional parlor game of *Twenty Questions*, players can ask all kinds of nosy questions to learn about another person. The players take turn asking questions to see what secrets they can discover about somebody.

In this less embarrassing version, players use 20 questions to uncover revealing information which may be hidden in the early positions of a chess game.

Say, Ralphie, it looks like your bishop is being attacked **twice!**

Ya -- but it's only being **defended once!**



Drats!
My plans for a **quick checkmate** will be **ruined** if these pesky kids keep meddling around!

This booklet has 100 pages of chess problems. Each has a diagram of a chess position and 20 questions for you to answer. *These questions will help you to find strong opening moves in your games.* Of course, when you're actually playing a game of chess, you aren't going to be asking yourself 20 questions before each move. That would be crazy, and a waste of good old human intuition!

But do make it a habit in the early part of a game to always:

- ◇ **Work to control the center of the board**
- ◇ **Study each king's protection and plan to castle early**
- ◇ **Watch for captures**
- ◇ **Activate your knights and bishops quickly**
- ◇ **Keep a strong pawn formation**
- ◇ **Be very careful with early use of your queen and rooks**

When you find yourself in the battle of a real live chess game, think about these guiding principles! Your heart may be pounding, your throat may be dry, your knees may be knocking. You won't be carefully going through 20 questions. If you've trained with these questions, though, you'll bring good opening ideas to whatever you run into on the battlefield!

By working at the exercises in this book, you'll improve your opening play by developing an automatic habit of reading the chessboard for important information. You'll develop your skills for seeing important information about captures, king safety, control of the center and development of pieces.

In the first part of the book, you'll solve each set of questions by working directly from the diagram on that page. Later in the book, you'll have to use your imagination to move some of the chessmen before you answer the questions. The 100 pages of problems are divided this way:

- Problems 1-40:** You'll answer the 20 questions based on the position shown on the diagram on that page.
- Problems 41-70:** On these, more concentration is needed! You'll need to imagine what the board would look like **one move ahead** before answering the questions!
- Problems 71-90:** Turn off the TV before attempting to answer these! You'll need to **look 2 moves into the future** before answering.
- Problems 91-100:** The author assumes no responsibility for readers who may pull out their hair or say naughty words while attempting these! You'll have to **visualize the board 3 moves after the starting position**. *Please do not attempt to drive a motor vehicle, perform surgery, or operate dangerous equipment while completing this last section.*

If you haven't yet looked at the problem pages, please do so now.


The next several pages give directions for how to answer the Twenty Questions.

The trickiest part of these instructions has to do with x-ray attacks and possible moves by pinned chessmen. (If you understand the answers to the two questions below, you probably can skim over the instruction pages.)

Answer both questions, then go to the next page.

On the diagram to the right,

- ***Which white chessmen are attacking d5?***
- ***Which black chessmen are defending d5?***




Q: Which white chessmen are attacking d5?

A: White could make 3 captures in a row on d5, by using his ♘, ♙, and then his ♔.
The attack by the ♔ is important to note. This is an X-ray attack -- the ♔ is attacking d5 through another chessman.

Q: Which black chessmen are defending d5?

A: Black has 2 men who are able to defend d5 right now: the ♘ on f6 and the ♙. It's very important to note here that Black's ♙ is NOT defending d5! The ♙ has been pinned and isn't allowed to move!




Please study the next two sections extra well if you feel unclear about X-ray attacks and pins.

In the diagram on the right, the ♙ is making an **X-ray attack** on e4. Black could make captures on e4 with 2 moves in a row: with the ♙ and then with the ♙.

Notice that Black is not attacking d4 at all. Black's ♔ is NOT making an X-ray attack on d4. White could safely put a chessman on that square in this pretend situation.


Bishops, rooks, and queens can make X-ray attacks through a teammate if **both men are attacking in the same direction**.

In this example, the ♙ is attacking in the same direction as the ♙, but the ♔ is not.



Include X-Ray Attacks when you count attacks on the center for Items 1-4!

When working on this book, you'll have to look for possible captures on every problem. **COUNT ALL LEGAL CAPTURES** -- WHETHER THEY WOULD BE GOOD MOVES OR NOT!



In the diagram on the left, both rooks are **pinned**. White's ♖ is pinned against the ♑, Black's ♜ against the ♔.

Question: How many captures could each ♖ make?

Answer: White's ♖ may make 1 capture -- Rxd3.
 Black's ♜ has 2 ways to make a capture -- Rxe3+ (which would be smart) and Rxd6 (which'd be something other than smart).

So when using this book, we'd say that White may make 1 capture here, while Black could make 2.


Well that's simple enough! **When counting possible captures, consider all legal possibilities.**

Moves which include a capture can't be ignored. So consider yourself warned and be prepared to practice scanning the board for all possible captures -- even those which seem preposterous (such as Rxd6 above). Remember that in actual games, strong players may sacrifice material to gain advantages which aren't immediately obvious. So "silly" captures can't be routinely discounted as unplayable, especially if the move also gives check.

When counting **attacks on the center** and **defenders**, though, we will NOT include moves by men who are pinned against their **queen**.

For an example, take a look at the pinned ♘ shown over on the right. If White chooses to play cxd5, the ♘ is not free to make an automatic re-capture -- Black can't count on his pinned ♘ to defend against aggression started by White.

But when adding up possible captures -- potential aggression by Black -- we'd count Nxc4+. Who knows, if Black initiates a move by that knight, it could be because he's found a sneaky combination of moves to play!



Specific Instructions and Tips For Answering The 20 Questions

Questions 1-4 (Attacks on Center Squares)

- ☞ Include all the moves to each center square that each player could make on his or her next turn. In other words, all possible captures in the center and moves to empty center squares.
- ☞ Include pawn threats to empty center squares--even though the move can't be made until an enemy is there to be captured.
- ☞ Include the ways chessmen on center squares have back-up support from teammates.
- ☞ Include X-ray attacks on the center squares, as discussed earlier in this section.
- ☞ DO NOT include moves by chessmen who are pinned against their king or queen.

Question 5 (Castling Status)

- ☞ Mark a **P** (for "prepared to castle") if a player has a legal right to castle on his next move -- even if it would be unwise to do so.

Questions 6-7 (Possible Next-Move Captures and Checks)

- ☞ If it's a legal move, count it: the good ones, the bad ones, and yes, the ugly ones!

Question 8 (Underprotected Chessmen)

- ☞ Any chessman who can legally make a capture on the next move should be counted as an attacker.
- ☞ For chessmen who could be captured on the next move -- see how many chessmen could make an immediate recapture on that same square. These are defenders. Chessmen who are pinned against their queen should NOT be counted on to defend other teammates who might be captured.
- ☞ Write how many chessmen, if any, have more attackers than defenders on the board.

Question 9 (Comparison of Material)

- ☞ If captures have been made in the game, one side may have more material than the other. Mark whether White has more material, Black does, or whether the sides are even. Use the rule-of-thumb values for comparing chessmen: Pawn = 1 point, Knight = 3 points, Bishop = 3 points, Rook = 5 points, Queen = 9 points.

(When trading chessmen in a game, it's most unwise, of course, to measure the value of a chessman without considering how it fits into the whole pattern on the board.)

Questions 10-13 (Development of Minor Pieces)

- ☞ Mark a **D** (for "developed") if the piece is off its home square and is not pinned -- even if it's poorly placed. If you can't determine if a ♘ originated on the king-side or the queen-side, you can trace the moves using the lists at the beginning of each section.

Questions 14-15 (Isolated and Doubled Pawns)

- ☞ An isolated is one which no longer has other pawns from the same team on one of the files next to it. An isolated pawn can't be defended by a one of its teammate pawns. Doubled pawns are pawns from the same team which are on the same file. They also can be difficult to defend.

Questions 16-17 (Rooks on Opened or Central Files)

- ☞ Consider a file as opened for a side if it has no pawns from that side. (That is, a file which has no white pawns on it is open for White.)

Questions 18-20 (Finding Candidate Moves)

- ☞ Finding some good possible moves -- that's what this is all about! Did you spot chessmen who are vulnerable to an attack? Does each side have a stronghold in the center? What threats are on the battlefield? Are the kings safe? Look for the best next move. Write down 1, 2, or even more possibilities. Write the best reply move.

Twenty Questions


Problem 1

NAME: _____

DATE: _____

Copyright © 1998-2003

Photocopying this form for instructional use is permitted.



POSITION 1

(White just played Bd2)

	White	Black
How many times is each side attacking the four central squares: d4, d5, e4, and e5? **	attacks on d4: <input type="checkbox"/>	<input type="checkbox"/>
	attacks on d5: <input type="checkbox"/>	<input type="checkbox"/>
	attacks on e4: <input type="checkbox"/>	<input type="checkbox"/>
	attacks on e5: <input type="checkbox"/>	<input type="checkbox"/>
Has either side castled ?	<input type="checkbox"/>	<input type="checkbox"/>
Write: C if already castled P if prepared to castle on next move T if temporarily unable to castle X if permanently not allowed to castle		
In how many ways could each side make a capture on its next move?	<input type="checkbox"/>	<input type="checkbox"/>

** NOTE: See the instructions about pinned men and x-ray attacks.

	White	Black
8 In how many ways could each side give check on its next move?	<input type="checkbox"/>	<input type="checkbox"/>
7 How many men from each side have more attackers than they have defenders ? **	<input type="checkbox"/>	<input type="checkbox"/>
6 Who has more material on the board?	<input type="checkbox"/>	<input type="checkbox"/>
5 Write: + if the side is ahead in material - if the side is behind in material = if the side is equal in material		
4 How active are the minor pieces of each side?	<input type="checkbox"/>	<input type="checkbox"/>
3 Write: H if still on Home Square C if Captured P if Pinned D if Developed		
2 King-side	<input type="checkbox"/>	<input type="checkbox"/>
1 Queen-side	<input type="checkbox"/>	<input type="checkbox"/>
8 Queen-side	<input type="checkbox"/>	<input type="checkbox"/>
7 Queen-side	<input type="checkbox"/>	<input type="checkbox"/>
6	<input type="checkbox"/>	<input type="checkbox"/>
5	<input type="checkbox"/>	<input type="checkbox"/>
4	<input type="checkbox"/>	<input type="checkbox"/>
3	<input type="checkbox"/>	<input type="checkbox"/>
2	<input type="checkbox"/>	<input type="checkbox"/>
1	<input type="checkbox"/>	<input type="checkbox"/>

14 Does either side have any pawns which are isolated ? (Y or N)	<input type="checkbox"/>	<input type="checkbox"/>
15 Does either side have any pawns which are doubled ? (Y or N)	<input type="checkbox"/>	<input type="checkbox"/>
16 Does either side have a rook positioned on an opened file ? (Y or N)	<input type="checkbox"/>	<input type="checkbox"/>
17 Does either side have a rook on file d or file e ? (Y or N)	<input type="checkbox"/>	<input type="checkbox"/>
18 What moves would you recommend for BLACK from this position?	_____	
19 (List 1 or 2 possible moves.)	_____	
20 For Question 20, write the best reply you see for the move you listed on line 18.	_____	

Twenty Questions


Problem 2

NAME: _____

DATE: _____

Copyright © 1998-2003

Photocopying this form for instructional use is permitted.



POSITION 2
 (Black just played Qd5)

	White	Black	
How many times is each side attacking the four central squares : d4, d5, e4, and e5? **	attacks on d4 : <input type="checkbox"/>	<input type="checkbox"/>	1
	attacks on d5 : <input type="checkbox"/>	<input type="checkbox"/>	2
	attacks on e4 : <input type="checkbox"/>	<input type="checkbox"/>	3
	attacks on e5 : <input type="checkbox"/>	<input type="checkbox"/>	4
Has either side castled ? Write: C if already castled P if prepared to castle on next move T if temporarily unable to castle X if permanently not allowed to castle	<input type="checkbox"/>	<input type="checkbox"/>	5
In how many ways could each side make a capture on its next move?	<input type="checkbox"/>	<input type="checkbox"/>	6

** NOTE: See the instructions about pinned men and x-ray attacks.

	White	Black	
In how many ways could each side give check on its next move?	<input type="checkbox"/>	<input type="checkbox"/>	7
How many men from each side have more attackers than they have defenders ? **	<input type="checkbox"/>	<input type="checkbox"/>	8
Who has more material on the board? Write: + if the side is ahead in material - if the side is behind in material = if the side is equal in material	<input type="checkbox"/>	<input type="checkbox"/>	9
How active are the minor pieces of each side? Write: H if still on Home Square C if Captured P if Pinned D if Developed	King-side <input type="checkbox"/>	<input type="checkbox"/>	10
	Queen-side <input type="checkbox"/>	<input type="checkbox"/>	11
	King-side <input type="checkbox"/>	<input type="checkbox"/>	12
	Queen-side <input type="checkbox"/>	<input type="checkbox"/>	13

Does either side have any pawns which are isolated ? (Y or N)	<input type="checkbox"/>	<input type="checkbox"/>	14
Does either side have any pawns which are doubled ? (Y or N)	<input type="checkbox"/>	<input type="checkbox"/>	15
Does either side have a rook positioned on an opened file ? (Y or N)	<input type="checkbox"/>	<input type="checkbox"/>	16
Does either side have a rook on file d or file e ? (Y or N)	<input type="checkbox"/>	<input type="checkbox"/>	17
What moves would you recommend for WHITE from this position? (List 1 or 2 possible moves.) For Question 20, write the best reply you see for the move you listed on line 18.	_____		18
	_____		19
	_____		20

Twenty Questions


Problem 3

NAME: _____

DATE: _____

Copyright © 1998-2003

Photocopying this form for instructional use is permitted.



POSITION 3

(Black just played Bxb4)

	White	Black
How many times is each side attacking the four central squares: d4, d5, e4, and e5? **	attacks on d4: <input type="checkbox"/>	<input type="checkbox"/>
	attacks on d5: <input type="checkbox"/>	<input type="checkbox"/>
	attacks on e4: <input type="checkbox"/>	<input type="checkbox"/>
	attacks on e5: <input type="checkbox"/>	<input type="checkbox"/>
Has either side castled ? Write: C if already castled P if prepared to castle on next move T if temporarily unable to castle X if permanently not allowed to castle	<input type="checkbox"/>	<input type="checkbox"/>
In how many ways could each side make a capture on its next move?	<input type="checkbox"/>	<input type="checkbox"/>

** NOTE: See the instructions about pinned men and x-ray attacks.

8
7
6
5
4
3
2
1

In how many ways could each side **give check** on its next move?

How many men from each side have **more attackers than they have defenders**? **

Who has more material on the board?

Write: + if the side is ahead in material
- if the side is behind in material
= if the side is equal in material

How active are the minor pieces of each side?

Write: **H** if still on Home Square
C if Captured
P if Pinned
D if Developed

White **Black**

 7

 8

 9

King-side 10

King-side 11

Queen-side 12

Queen-side 13

Does either side have any pawns which are **isolated**? (Y or N)

 14

Does either side have any pawns which are **doubled**? (Y or N)

 15

Does either side have a **rook positioned on an opened file**? (Y or N)

 16

Does either side have a **rook on file d or file e**? (Y or N)

 17

What **moves would you recommend for WHITE** from this position?

_____ 18

(List 1 or 2 possible moves.)
For Question 20, write the best reply you see for the move you listed on line 18.

_____ 19

_____ 20

Twenty Questions


Problem 4

NAME: _____

DATE: _____

Copyright © 1998-2003

Photocopying this form for instructional use is permitted.



POSITION 4
 (Black just played h5)

	White	Black	
How many times is each side attacking the four central squares : d4, d5, e4, and e5? **	attacks on d4 : <input type="checkbox"/>	<input type="checkbox"/>	1
	attacks on d5 : <input type="checkbox"/>	<input type="checkbox"/>	2
	attacks on e4 : <input type="checkbox"/>	<input type="checkbox"/>	3
	attacks on e5 : <input type="checkbox"/>	<input type="checkbox"/>	4
Has either side castled ? Write: C if already castled P if prepared to castle on next move T if temporarily unable to castle X if permanently not allowed to castle	<input type="checkbox"/>	<input type="checkbox"/>	5
In how many ways could each side make a capture on its next move?	<input type="checkbox"/>	<input type="checkbox"/>	6

** NOTE: See the instructions about pinned men and x-ray attacks.

	White	Black	
In how many ways could each side give check on its next move?	<input type="checkbox"/>	<input type="checkbox"/>	7
How many men from each side have more attackers than they have defenders ? **	<input type="checkbox"/>	<input type="checkbox"/>	8
Who has more material on the board? Write: + if the side is ahead in material - if the side is behind in material = if the side is equal in material	<input type="checkbox"/>	<input type="checkbox"/>	9
How active are the minor pieces of each side? Write: H if still on Home Square C if Captured P if Pinned D if Developed	King-side <input type="checkbox"/>	<input type="checkbox"/>	10
	Queen-side <input type="checkbox"/>	<input type="checkbox"/>	11
	King-side <input type="checkbox"/>	<input type="checkbox"/>	12
	Queen-side <input type="checkbox"/>	<input type="checkbox"/>	13
Does either side have any pawns which are isolated ? (Y or N)	<input type="checkbox"/>	<input type="checkbox"/>	14
Does either side have any pawns which are doubled ? (Y or N)	<input type="checkbox"/>	<input type="checkbox"/>	15
Does either side have a rook positioned on an opened file ? (Y or N)	<input type="checkbox"/>	<input type="checkbox"/>	16
Does either side have a rook on file d or file e ? (Y or N)	<input type="checkbox"/>	<input type="checkbox"/>	17
What moves would you recommend for WHITE from this position? <i>(List 1 or 2 possible moves.)</i> <i>For Question 20, write the best reply you see for the move you listed on line 18.</i>	_____		18
	_____		19
	_____		20

Twenty Questions


Problem 5

NAME: _____

DATE: _____

Copyright © 1998-2003

Photocopying this form for instructional use is permitted.



POSITION 5

(Black just played Bd7)

	White	Black
How many times is each side attacking the four central squares: d4, d5, e4, and e5? **	attacks on d4: <input type="checkbox"/>	<input type="checkbox"/>
	attacks on d5: <input type="checkbox"/>	<input type="checkbox"/>
	attacks on e4: <input type="checkbox"/>	<input type="checkbox"/>
	attacks on e5: <input type="checkbox"/>	<input type="checkbox"/>
Has either side castled ?	<input type="checkbox"/>	<input type="checkbox"/>
Write: C if already castled P if prepared to castle on next move T if temporarily unable to castle X if permanently not allowed to castle		
In how many ways could each side make a capture on its next move?	<input type="checkbox"/>	<input type="checkbox"/>

** NOTE: See the instructions about pinned men and x-ray attacks.

8
7
6
5
4
3
2
1

In how many ways could each side **give check** on its next move?

How many men from each side have **more attackers than they have defenders**? **

Who has more material on the board?

Write: + if the side is ahead in material
- if the side is behind in material
= if the side is equal in material

How active are the minor pieces of each side?

Write: **H** if still on Home Square
C if Captured
P if Pinned
D if Developed

White **Black**

7

8

9

King-side 10

King-side 11

Queen-side 12

Queen-side 13

Does either side have any pawns which are **isolated**? (Y or N)

14

Does either side have any pawns which are **doubled**? (Y or N)

15

Does either side have a **rook positioned on an opened file**? (Y or N)

16

Does either side have a **rook on file d or file e**? (Y or N)

17

What **moves would you recommend for WHITE** from this position?


_____ 18

(List 1 or 2 possible moves.)
For Question 20, write the best reply you see for the move you listed on line 18.

_____ 19
 _____ 20

Twenty Questions

Problem 6



POSITION 6
 (White just played e4)

	White	Black	
How many times is each side attacking the four central squares : d4, d5, e4, and e5? **	attacks on d4 : <input type="checkbox"/>	<input type="checkbox"/>	1
	attacks on d5 : <input type="checkbox"/>	<input type="checkbox"/>	2
	attacks on e4 : <input type="checkbox"/>	<input type="checkbox"/>	3
	attacks on e5 : <input type="checkbox"/>	<input type="checkbox"/>	4
Has either side castled ? Write: C if already castled P if prepared to castle on next move T if temporarily unable to castle X if permanently not allowed to castle	<input type="checkbox"/>	<input type="checkbox"/>	5
In how many ways could each side make a capture on its next move?	<input type="checkbox"/>	<input type="checkbox"/>	6

NAME: _____

DATE: _____

Copyright © 1998-2003

Photocopying this form for instructional use is permitted.

	White	Black	
In how many ways could each side give check on its next move?	<input type="checkbox"/>	<input type="checkbox"/>	7
How many men from each side have more attackers than they have defenders ? **	<input type="checkbox"/>	<input type="checkbox"/>	8
Who has more material on the board? Write: + if the side is ahead in material - if the side is behind in material = if the side is equal in material	<input type="checkbox"/>	<input type="checkbox"/>	9
How active are the minor pieces of each side? Write: H if still on <i>Home Square</i> C if <i>Captured</i> P if <i>Pinned</i> D if <i>Developed</i>	King-side <input type="checkbox"/>	King-side <input type="checkbox"/>	10
	Queen-side <input type="checkbox"/>	Queen-side <input type="checkbox"/>	11
	King-side <input type="checkbox"/>	King-side <input type="checkbox"/>	12
	Queen-side <input type="checkbox"/>	Queen-side <input type="checkbox"/>	13
Does either side have any pawns which are isolated ? (Y or N)	<input type="checkbox"/>	<input type="checkbox"/>	14
Does either side have any pawns which are doubled ? (Y or N)	<input type="checkbox"/>	<input type="checkbox"/>	15
Does either side have a rook positioned on an opened file ? (Y or N)	<input type="checkbox"/>	<input type="checkbox"/>	16
Does either side have a rook on file d or file e ? (Y or N)	<input type="checkbox"/>	<input type="checkbox"/>	17
What moves would you recommend for BLACK from this position? <i>(List 1 or 2 possible moves.)</i> <i>For Question 20, write the best reply you see for the move you listed on line 18.</i>	_____	_____	18
	_____	_____	19
	_____	_____	20

Twenty Questions


Problem 7

NAME: _____

DATE: _____

Copyright © 1998-2003

Photocopying this form for instructional use is permitted.



POSITION 7

(Black just played d6)

	White	Black
How many times is each side attacking the four central squares: d4, d5, e4, and e5? **	attacks on d4: <input type="checkbox"/>	<input type="checkbox"/>
	attacks on d5: <input type="checkbox"/>	<input type="checkbox"/>
	attacks on e4: <input type="checkbox"/>	<input type="checkbox"/>
	attacks on e5: <input type="checkbox"/>	<input type="checkbox"/>
Has either side castled ?	<input type="checkbox"/>	<input type="checkbox"/>
Write: C if already castled P if prepared to castle on next move T if temporarily unable to castle X if permanently not allowed to castle		
In how many ways could each side make a capture on its next move?	<input type="checkbox"/>	<input type="checkbox"/>

** NOTE: See the instructions about pinned men and x-ray attacks.

	White	Black	
8 In how many ways could each side give check on its next move?	<input type="checkbox"/>	<input type="checkbox"/>	7
7 How many men from each side have more attackers than they have defenders ? **	<input type="checkbox"/>	<input type="checkbox"/>	8
6 Who has more material on the board?	<input type="checkbox"/>	<input type="checkbox"/>	9
5 Write: + if the side is ahead in material - if the side is behind in material = if the side is equal in material			
4 How active are the minor pieces of each side?	King-side <input type="checkbox"/>	<input type="checkbox"/>	10
3 Write: H if still on Home Square C if Captured P if Pinned D if Developed	King-side <input type="checkbox"/>	<input type="checkbox"/>	11
2	Queen-side <input type="checkbox"/>	<input type="checkbox"/>	12
1	Queen-side <input type="checkbox"/>	<input type="checkbox"/>	13
Does either side have any pawns which are isolated ? (Y or N)	<input type="checkbox"/>	<input type="checkbox"/>	14
Does either side have any pawns which are doubled ? (Y or N)	<input type="checkbox"/>	<input type="checkbox"/>	15
Does either side have a rook positioned on an opened file ? (Y or N)	<input type="checkbox"/>	<input type="checkbox"/>	16
Does either side have a rook on file d or file e ? (Y or N)	<input type="checkbox"/>	<input type="checkbox"/>	17
What moves would you recommend for WHITE from this position?	_____		18
(List 1 or 2 possible moves.)	_____		19
For Question 20, write the best reply you see for the move you listed on line 18.	_____		20

Twenty Questions


Problem 8

NAME: _____

DATE: _____

Copyright © 1998-2003

Photocopying this form for instructional use is permitted.



POSITION 8
 (White just played c4)

	White	Black	
How many times is each side attacking the four central squares : d4, d5, e4, and e5? **	attacks on d4 : <input type="checkbox"/>	<input type="checkbox"/>	1
	attacks on d5 : <input type="checkbox"/>	<input type="checkbox"/>	2
	attacks on e4 : <input type="checkbox"/>	<input type="checkbox"/>	3
	attacks on e5 : <input type="checkbox"/>	<input type="checkbox"/>	4
Has either side castled ? Write: C if already castled P if prepared to castle on next move T if temporarily unable to castle X if permanently not allowed to castle	<input type="checkbox"/>	<input type="checkbox"/>	5
In how many ways could each side make a capture on its next move?	<input type="checkbox"/>	<input type="checkbox"/>	6

	White	Black	
In how many ways could each side give check on its next move?	<input type="checkbox"/>	<input type="checkbox"/>	7
How many men from each side have more attackers than they have defenders ? **	<input type="checkbox"/>	<input type="checkbox"/>	8
Who has more material on the board? Write: + if the side is ahead in material - if the side is behind in material = if the side is equal in material	<input type="checkbox"/>	<input type="checkbox"/>	9
How active are the minor pieces of each side? Write: H if still on <i>Home Square</i> C if <i>Captured</i> P if <i>Pinned</i> D if <i>Developed</i>	King-side <input type="checkbox"/>	<input type="checkbox"/>	10
	King-side <input type="checkbox"/>	<input type="checkbox"/>	11
	Queen-side <input type="checkbox"/>	<input type="checkbox"/>	12
	Queen-side <input type="checkbox"/>	<input type="checkbox"/>	13
Does either side have any pawns which are isolated ? (Y or N)	<input type="checkbox"/>	<input type="checkbox"/>	14
Does either side have any pawns which are doubled ? (Y or N)	<input type="checkbox"/>	<input type="checkbox"/>	15
Does either side have a rook positioned on an opened file ? (Y or N)	<input type="checkbox"/>	<input type="checkbox"/>	16
Does either side have a rook on file d or file e ? (Y or N)	<input type="checkbox"/>	<input type="checkbox"/>	17
What moves would you recommend for BLACK from this position? <i>(List 1 or 2 possible moves.)</i> <i>For Question 20, write the best reply you see for the move you listed on line 18.</i>	_____		18
	_____		19
	_____		20

Twenty Questions


Problem 9

NAME: _____

DATE: _____

Copyright © 1998-2003

Photocopying this form for instructional use is permitted.



POSITION 9

(White just played exd5)

	White	Black
How many times is each side attacking the four central squares: d4, d5, e4, and e5? **	attacks on d4: <input type="checkbox"/>	<input type="checkbox"/>
	attacks on d5: <input type="checkbox"/>	<input type="checkbox"/>
	attacks on e4: <input type="checkbox"/>	<input type="checkbox"/>
	attacks on e5: <input type="checkbox"/>	<input type="checkbox"/>
Has either side castled ?	<input type="checkbox"/>	<input type="checkbox"/>
Write: C if already castled P if prepared to castle on next move T if temporarily unable to castle X if permanently not allowed to castle		
In how many ways could each side make a capture on its next move?	<input type="checkbox"/>	<input type="checkbox"/>

** NOTE: See the instructions about pinned men and x-ray attacks.

	White	Black	
8 In how many ways could each side give check on its next move?	<input type="checkbox"/>	<input type="checkbox"/>	7
7 How many men from each side have more attackers than they have defenders ? **	<input type="checkbox"/>	<input type="checkbox"/>	8
6 Who has more material on the board?	<input type="checkbox"/>	<input type="checkbox"/>	9
5 Write: + if the side is ahead in material - if the side is behind in material = if the side is equal in material			
4 How active are the minor pieces of each side?	King-side <input type="checkbox"/>	<input type="checkbox"/>	10
3 Write: H if still on Home Square C if Captured P if Pinned D if Developed	King-side <input type="checkbox"/>	<input type="checkbox"/>	11
2	Queen-side <input type="checkbox"/>	<input type="checkbox"/>	12
1	Queen-side <input type="checkbox"/>	<input type="checkbox"/>	13
Does either side have any pawns which are isolated ? (Y or N)	<input type="checkbox"/>	<input type="checkbox"/>	14
Does either side have any pawns which are doubled ? (Y or N)	<input type="checkbox"/>	<input type="checkbox"/>	15
Does either side have a rook positioned on an opened file ? (Y or N)	<input type="checkbox"/>	<input type="checkbox"/>	16
Does either side have a rook on file d or file e ? (Y or N)	<input type="checkbox"/>	<input type="checkbox"/>	17
What moves would you recommend for BLACK from this position?	_____		18
(List 1 or 2 possible moves.)	_____		19
For Question 20, write the best reply you see for the move you listed on line 18.	_____		20

Twenty Questions


Problem 10

NAME: _____

DATE: _____

Copyright © 1998-2003

Photocopying this form for instructional use is permitted.



POSITION 10

(White just played d4)

	White	Black	
How many times is each side attacking the four central squares : d4, d5, e4, and e5? **	attacks on d4 : <input type="checkbox"/>	<input type="checkbox"/>	1
	attacks on d5 : <input type="checkbox"/>	<input type="checkbox"/>	2
	attacks on e4 : <input type="checkbox"/>	<input type="checkbox"/>	3
	attacks on e5 : <input type="checkbox"/>	<input type="checkbox"/>	4
Has either side castled ? Write: C if already castled P if prepared to castle on next move T if temporarily unable to castle X if permanently not allowed to castle	<input type="checkbox"/>	<input type="checkbox"/>	5
In how many ways could each side make a capture on its next move?	<input type="checkbox"/>	<input type="checkbox"/>	6

** NOTE: See the instructions about pinned men and x-ray attacks.

	White	Black	
In how many ways could each side give check on its next move?	<input type="checkbox"/>	<input type="checkbox"/>	7
How many men from each side have more attackers than they have defenders ? **	<input type="checkbox"/>	<input type="checkbox"/>	8
Who has more material on the board? Write: + if the side is ahead in material - if the side is behind in material = if the side is equal in material	<input type="checkbox"/>	<input type="checkbox"/>	9
How active are the minor pieces of each side? Write: H if still on Home Square C if Captured P if Pinned D if Developed	King-side <input type="checkbox"/>	<input type="checkbox"/>	10
	Queen-side <input type="checkbox"/>	<input type="checkbox"/>	11
	King-side <input type="checkbox"/>	<input type="checkbox"/>	12
	Queen-side <input type="checkbox"/>	<input type="checkbox"/>	13

Does either side have any pawns which are isolated ? (Y or N)	<input type="checkbox"/>	<input type="checkbox"/>	14
Does either side have any pawns which are doubled ? (Y or N)	<input type="checkbox"/>	<input type="checkbox"/>	15
Does either side have a rook positioned on an opened file ? (Y or N)	<input type="checkbox"/>	<input type="checkbox"/>	16
Does either side have a rook on file d or file e ? (Y or N)	<input type="checkbox"/>	<input type="checkbox"/>	17
What moves would you recommend for BLACK from this position? (List 1 or 2 possible moves.) For Question 20, write the best reply you see for the move you listed on line 18.	_____		18
	_____		19
	_____		20

Twenty Questions


Problem 11

NAME: _____

DATE: _____

Copyright © 1998-2003

Photocopying this form for instructional use is permitted.



POSITION 11

(Black just played dxe5)

	White	Black
How many times is each side attacking the four central squares: d4, d5, e4, and e5? **	attacks on d4: <input type="text"/>	<input type="text"/>
	attacks on d5: <input type="text"/>	<input type="text"/>
	attacks on e4: <input type="text"/>	<input type="text"/>
	attacks on e5: <input type="text"/>	<input type="text"/>
Has either side castled ? Write: C if already castled P if prepared to castle on next move T if temporarily unable to castle X if permanently not allowed to castle	<input type="text"/>	<input type="text"/>
In how many ways could each side make a capture on its next move?	<input type="text"/>	<input type="text"/>

** NOTE: See the instructions about pinned men and x-ray attacks.

	White	Black	
8 In how many ways could each side give check on its next move?	<input type="text"/>	<input type="text"/>	7
7 How many men from each side have more attackers than they have defenders ? **	<input type="text"/>	<input type="text"/>	8
6 Who has more material on the board? Write: + if the side is ahead in material - if the side is behind in material = if the side is equal in material	<input type="text"/>	<input type="text"/>	9
5 How active are the minor pieces of each side? Write: H if still on Home Square C if Captured P if Pinned D if Developed	King-side <input type="text"/>	King-side <input type="text"/>	10
	Queen-side <input type="text"/>	Queen-side <input type="text"/>	11
	Queen-side <input type="text"/>	Queen-side <input type="text"/>	12
	Queen-side <input type="text"/>	Queen-side <input type="text"/>	13
4 Does either side have any pawns which are isolated ? (Y or N)	<input type="text"/>	<input type="text"/>	14
3 Does either side have any pawns which are doubled ? (Y or N)	<input type="text"/>	<input type="text"/>	15
2 Does either side have a rook positioned on an opened file ? (Y or N)	<input type="text"/>	<input type="text"/>	16
1 Does either side have a rook on file d or file e ? (Y or N)	<input type="text"/>	<input type="text"/>	17
What moves would you recommend for WHITE from this position? (List 1 or 2 possible moves.) For Question 20, write the best reply you see for the move you listed on line 18.	_____	_____	18
	_____	_____	19
	_____	_____	20

Twenty Questions


Problem 12

NAME: _____

DATE: _____

Copyright © 1998-2003

Photocopying this form for instructional use is permitted.



POSITION 12
 (Black just played a6)

	White	Black	
How many times is each side attacking the four central squares : d4, d5, e4, and e5? **	attacks on d4 : <input type="checkbox"/>	<input type="checkbox"/>	1
	attacks on d5 : <input type="checkbox"/>	<input type="checkbox"/>	2
	attacks on e4 : <input type="checkbox"/>	<input type="checkbox"/>	3
	attacks on e5 : <input type="checkbox"/>	<input type="checkbox"/>	4
Has either side castled ? Write: C if already castled P if prepared to castle on next move T if temporarily unable to castle X if permanently not allowed to castle	<input type="checkbox"/>	<input type="checkbox"/>	5
In how many ways could each side make a capture on its next move?	<input type="checkbox"/>	<input type="checkbox"/>	6

	White	Black	
In how many ways could each side give check on its next move?	<input type="checkbox"/>	<input type="checkbox"/>	7
How many men from each side have more attackers than they have defenders ? **	<input type="checkbox"/>	<input type="checkbox"/>	8
Who has more material on the board? Write: + if the side is ahead in material - if the side is behind in material = if the side is equal in material	<input type="checkbox"/>	<input type="checkbox"/>	9
How active are the minor pieces of each side? Write: H if still on Home Square C if Captured P if Pinned D if Developed	King-side <input type="checkbox"/>	<input type="checkbox"/>	10
	Queen-side <input type="checkbox"/>	<input type="checkbox"/>	11
	King-side <input type="checkbox"/>	<input type="checkbox"/>	12
	Queen-side <input type="checkbox"/>	<input type="checkbox"/>	13
Does either side have any pawns which are isolated ? (Y or N)	<input type="checkbox"/>	<input type="checkbox"/>	14
Does either side have any pawns which are doubled ? (Y or N)	<input type="checkbox"/>	<input type="checkbox"/>	15
Does either side have a rook positioned on an opened file ? (Y or N)	<input type="checkbox"/>	<input type="checkbox"/>	16
Does either side have a rook on file d or file e ? (Y or N)	<input type="checkbox"/>	<input type="checkbox"/>	17
What moves would you recommend for WHITE from this position? <i>(List 1 or 2 possible moves.)</i> <i>For Question 20, write the best reply you see for the move you listed on line 18.</i>	_____		18
	_____		19
	_____		20

Twenty Questions


Problem 13

NAME: _____

DATE: _____

Copyright © 1998-2003

Photocopying this form for instructional use is permitted.



POSITION 13

(Black just played Nf6)

	White	Black
How many times is each side attacking the four central squares: d4, d5, e4, and e5? **	attacks on d4: <input type="checkbox"/>	<input type="checkbox"/>
	attacks on d5: <input type="checkbox"/>	<input type="checkbox"/>
	attacks on e4: <input type="checkbox"/>	<input type="checkbox"/>
	attacks on e5: <input type="checkbox"/>	<input type="checkbox"/>
Has either side castled ?	<input type="checkbox"/>	<input type="checkbox"/>
Write: C if already castled P if prepared to castle on next move T if temporarily unable to castle X if permanently not allowed to castle		
In how many ways could each side make a capture on its next move?	<input type="checkbox"/>	<input type="checkbox"/>

** NOTE: See the instructions about pinned men and x-ray attacks.

	White	Black
In how many ways could each side give check on its next move?	<input type="checkbox"/>	<input type="checkbox"/>
How many men from each side have more attackers than they have defenders ? **	<input type="checkbox"/>	<input type="checkbox"/>
Who has more material on the board?	<input type="checkbox"/>	<input type="checkbox"/>
Write: + if the side is ahead in material - if the side is behind in material = if the side is equal in material		
How active are the minor pieces of each side?	King-side <input type="checkbox"/>	<input type="checkbox"/>
Write: H if still on Home Square C if Captured P if Pinned D if Developed	King-side <input type="checkbox"/>	<input type="checkbox"/>
	Queen-side <input type="checkbox"/>	<input type="checkbox"/>
	Queen-side <input type="checkbox"/>	<input type="checkbox"/>

Does either side have any pawns which are isolated ? (Y or N)	<input type="checkbox"/>	<input type="checkbox"/>
Does either side have any pawns which are doubled ? (Y or N)	<input type="checkbox"/>	<input type="checkbox"/>
Does either side have a rook positioned on an opened file ? (Y or N)	<input type="checkbox"/>	<input type="checkbox"/>
Does either side have a rook on file d or file e ? (Y or N)	<input type="checkbox"/>	<input type="checkbox"/>
What moves would you recommend for WHITE from this position?	_____	_____
(List 1 or 2 possible moves.)	_____	_____
For Question 20, write the best reply you see for the move you listed on line 18.	_____	_____

Twenty Questions


Problem 14

NAME: _____

DATE: _____

Copyright © 1998-2003

Photocopying this form for instructional use is permitted.



POSITION 14

(White just played Bxg5)

	White	Black	
How many times is each side attacking the four central squares : d4, d5, e4, and e5? **	attacks on d4 : <input type="checkbox"/>	<input type="checkbox"/>	1
	attacks on d5 : <input type="checkbox"/>	<input type="checkbox"/>	2
	attacks on e4 : <input type="checkbox"/>	<input type="checkbox"/>	3
	attacks on e5 : <input type="checkbox"/>	<input type="checkbox"/>	4
Has either side castled ? Write: C if already castled P if prepared to castle on next move T if temporarily unable to castle X if permanently not allowed to castle	<input type="checkbox"/>	<input type="checkbox"/>	5
In how many ways could each side make a capture on its next move?	<input type="checkbox"/>	<input type="checkbox"/>	6

** NOTE: See the instructions about pinned men and x-ray attacks.

	White	Black	
In how many ways could each side give check on its next move?	<input type="checkbox"/>	<input type="checkbox"/>	7
How many men from each side have more attackers than they have defenders ? **	<input type="checkbox"/>	<input type="checkbox"/>	8
Who has more material on the board? Write: + if the side is ahead in material - if the side is behind in material = if the side is equal in material	<input type="checkbox"/>	<input type="checkbox"/>	9
How active are the minor pieces of each side? Write: H if still on Home Square C if Captured P if Pinned D if Developed	King-side <input type="checkbox"/>	King-side <input type="checkbox"/>	10
	Queen-side <input type="checkbox"/>	Queen-side <input type="checkbox"/>	11
	King-side <input type="checkbox"/>	King-side <input type="checkbox"/>	12
	Queen-side <input type="checkbox"/>	Queen-side <input type="checkbox"/>	13

Does either side have any pawns which are isolated ? (Y or N)	<input type="checkbox"/>	<input type="checkbox"/>	14
Does either side have any pawns which are doubled ? (Y or N)	<input type="checkbox"/>	<input type="checkbox"/>	15
Does either side have a rook positioned on an opened file ? (Y or N)	<input type="checkbox"/>	<input type="checkbox"/>	16
Does either side have a rook on file d or file e ? (Y or N)	<input type="checkbox"/>	<input type="checkbox"/>	17
What moves would you recommend for BLACK from this position? (List 1 or 2 possible moves.) For Question 20, write the best reply you see for the move you listed on line 18.	_____	_____	18
	_____	_____	19
	_____	_____	20

Twenty Questions


Problem 15

NAME: _____

DATE: _____

Copyright © 1998-2003

Photocopying this form for instructional use is permitted.



POSITION 15
 (White just played f3)

	White	Black
How many times is each side attacking the four central squares: d4, d5, e4, and e5? **	attacks on d4: <input type="checkbox"/>	<input type="checkbox"/>
	attacks on d5: <input type="checkbox"/>	<input type="checkbox"/>
	attacks on e4: <input type="checkbox"/>	<input type="checkbox"/>
	attacks on e5: <input type="checkbox"/>	<input type="checkbox"/>
Has either side castled ? Write: C if already castled P if prepared to castle on next move T if temporarily unable to castle X if permanently not allowed to castle	<input type="checkbox"/>	<input type="checkbox"/>
In how many ways could each side make a capture on its next move?	<input type="checkbox"/>	<input type="checkbox"/>

** NOTE: See the instructions about pinned men and x-ray attacks.

8
7
6
5
4
3
2
1

In how many ways could each side **give check** on its next move?

How many men from each side have **more attackers than they have defenders**? **

Who has more material on the board?

Write: + if the side is ahead in material
 - if the side is behind in material
 = if the side is equal in material

How active are the minor pieces of each side?

Write: **H** if still on Home Square
C if Captured
P if Pinned
D if Developed

White **Black**

 7

 8

 9

King-side 10

King-side 11

Queen-side 12

Queen-side 13

Does either side have any pawns which are **isolated**? (Y or N)

 14

Does either side have any pawns which are **doubled**? (Y or N)

 15

Does either side have a **rook positioned on an opened file**? (Y or N)

 16

Does either side have a **rook on file d or file e**? (Y or N)

 17

What **moves would you recommend for BLACK** from this position?

_____ 18

(List 1 or 2 possible moves.)
 For Question 20, write the best reply you see for the move you listed on line 18.

_____ 19
 _____ 20

Twenty Questions


Problem 16

NAME: _____

DATE: _____

Copyright © 1998-2003

Photocopying this form for instructional use is permitted.



POSITION 16
 (Black just played Be7)

	White	Black	
How many times is each side attacking the four central squares : d4, d5, e4, and e5? **	attacks on d4 : <input type="checkbox"/>	<input type="checkbox"/>	1
	attacks on d5 : <input type="checkbox"/>	<input type="checkbox"/>	2
	attacks on e4 : <input type="checkbox"/>	<input type="checkbox"/>	3
	attacks on e5 : <input type="checkbox"/>	<input type="checkbox"/>	4
Has either side castled ? Write: C if already castled P if prepared to castle on next move T if temporarily unable to castle X if permanently not allowed to castle	<input type="checkbox"/>	<input type="checkbox"/>	5
In how many ways could each side make a capture on its next move?	<input type="checkbox"/>	<input type="checkbox"/>	6

** NOTE: See the instructions about pinned men and x-ray attacks.

	White	Black	
In how many ways could each side give check on its next move?	<input type="checkbox"/>	<input type="checkbox"/>	7
How many men from each side have more attackers than they have defenders ? **	<input type="checkbox"/>	<input type="checkbox"/>	8
Who has more material on the board? Write: + if the side is ahead in material - if the side is behind in material = if the side is equal in material	<input type="checkbox"/>	<input type="checkbox"/>	9
How active are the minor pieces of each side? Write: H if still on Home Square C if Captured P if Pinned D if Developed	King-side <input type="checkbox"/>	<input type="checkbox"/>	10
	King-side <input type="checkbox"/>	<input type="checkbox"/>	11
	Queen-side <input type="checkbox"/>	<input type="checkbox"/>	12
	Queen-side <input type="checkbox"/>	<input type="checkbox"/>	13
Does either side have any pawns which are isolated ? (Y or N)	<input type="checkbox"/>	<input type="checkbox"/>	14
Does either side have any pawns which are doubled ? (Y or N)	<input type="checkbox"/>	<input type="checkbox"/>	15
Does either side have a rook positioned on an opened file ? (Y or N)	<input type="checkbox"/>	<input type="checkbox"/>	16
Does either side have a rook on file d or file e ? (Y or N)	<input type="checkbox"/>	<input type="checkbox"/>	17
What moves would you recommend for WHITE from this position? <i>(List 1 or 2 possible moves.)</i> <i>For Question 20, write the best reply you see for the move you listed on line 18.</i>	_____		18
	_____		19
	_____		20

Twenty Questions


Problem 17

NAME: _____

DATE: _____

Copyright © 1998-2003

Photocopying this form for instructional use is permitted.



POSITION 17

(White just played c3)

	White	Black
How many times is each side attacking the four central squares: d4, d5, e4, and e5? **	attacks on d4: <input type="checkbox"/>	<input type="checkbox"/>
	attacks on d5: <input type="checkbox"/>	<input type="checkbox"/>
	attacks on e4: <input type="checkbox"/>	<input type="checkbox"/>
	attacks on e5: <input type="checkbox"/>	<input type="checkbox"/>
Has either side castled ? Write: C if already castled P if prepared to castle on next move T if temporarily unable to castle X if permanently not allowed to castle	<input type="checkbox"/>	<input type="checkbox"/>
In how many ways could each side make a capture on its next move?	<input type="checkbox"/>	<input type="checkbox"/>

** NOTE: See the instructions about pinned men and x-ray attacks.

8
7
6
5
4
3
2
1

In how many ways could each side **give check** on its next move?

How many men from each side have **more attackers than they have defenders**? **

Who has more material on the board?

Write: + if the side is ahead in material
- if the side is behind in material
= if the side is equal in material

How active are the minor pieces of each side?

Write: **H** if still on Home Square
C if Captured
P if Pinned
D if Developed

White **Black**

 7

 8

 9

King-side 10

King-side 11

Queen-side 12

Queen-side 13

Does either side have any pawns which are **isolated**? (Y or N)

 14

Does either side have any pawns which are **doubled**? (Y or N)

 15

Does either side have a **rook positioned on an opened file**? (Y or N)

 16

Does either side have a **rook on file d or file e**? (Y or N)

 17

What **moves would you recommend for BLACK** from this position?

_____ 18

(List 1 or 2 possible moves.)
For Question 20, write the best reply you see for the move you listed on line 18.

_____ 19
 _____ 20

Twenty Questions


Problem 18

NAME: _____

DATE: _____

Copyright © 1998-2003

Photocopying this form for instructional use is permitted.



POSITION 18

(Black just played dxc4)

How many times is each side **attacking the four central squares**: d4, d5, e4, and e5? **

** NOTE: See the instructions about pinned men and x-ray attacks.

Has either side **castled**?

Write: **C** if already castled
P if prepared to castle on next move
T if temporarily unable to castle
X if permanently not allowed to castle

In how many ways could each side **make a capture** on its next move?

	White	Black	
attacks on d4 :	<input type="checkbox"/>	<input type="checkbox"/>	1
attacks on d5 :	<input type="checkbox"/>	<input type="checkbox"/>	2
attacks on e4 :	<input type="checkbox"/>	<input type="checkbox"/>	3
attacks on e5 :	<input type="checkbox"/>	<input type="checkbox"/>	4
	<input type="checkbox"/>	<input type="checkbox"/>	5
	<input type="checkbox"/>	<input type="checkbox"/>	6

White Black

In how many ways could each side **give check** on its next move?

<input type="checkbox"/>	<input type="checkbox"/>	7
--------------------------	--------------------------	---

How many men from each side have **more attackers than they have defenders**? **

<input type="checkbox"/>	<input type="checkbox"/>	8
--------------------------	--------------------------	---

Who has more material on the board?

Write: + if the side is ahead in material
 - if the side is behind in material
 = if the side is equal in material

<input type="checkbox"/>	<input type="checkbox"/>	9
--------------------------	--------------------------	---

How active are the minor pieces of each side?

Write: **H** if still on *Home Square*
C if *Captured*
P if *Pinned*
D if *Developed*

King-side

<input type="checkbox"/>	<input type="checkbox"/>	10
--------------------------	--------------------------	----

King-side

<input type="checkbox"/>	<input type="checkbox"/>	11
--------------------------	--------------------------	----

Queen-side

<input type="checkbox"/>	<input type="checkbox"/>	12
--------------------------	--------------------------	----

Queen-side

<input type="checkbox"/>	<input type="checkbox"/>	13
--------------------------	--------------------------	----

Does either side have any pawns which are **isolated**? (Y or N)

<input type="checkbox"/>	<input type="checkbox"/>	14
--------------------------	--------------------------	----

Does either side have any pawns which are **doubled**? (Y or N)

<input type="checkbox"/>	<input type="checkbox"/>	15
--------------------------	--------------------------	----

Does either side have a **rook positioned on an opened file**? (Y or N)

<input type="checkbox"/>	<input type="checkbox"/>	16
--------------------------	--------------------------	----

Does either side have a **rook on file d or file e**? (Y or N)

<input type="checkbox"/>	<input type="checkbox"/>	17
--------------------------	--------------------------	----

What **moves would you recommend for WHITE** from this position?

_____	18
_____	19

(List 1 or 2 possible moves.)
 For Question 20, write the best reply you see for the move you listed on line 18.

_____	20
-------	----

Twenty Questions


Problem 19

NAME: _____

DATE: _____

Copyright © 1998-2003

Photocopying this form for instructional use is permitted.



POSITION 19

(White just played d4)

	White	Black
How many times is each side attacking the four central squares: d4, d5, e4, and e5? **	attacks on d4: <input type="checkbox"/>	<input type="checkbox"/>
	attacks on d5: <input type="checkbox"/>	<input type="checkbox"/>
	attacks on e4: <input type="checkbox"/>	<input type="checkbox"/>
	attacks on e5: <input type="checkbox"/>	<input type="checkbox"/>
Has either side castled ? Write: C if already castled P if prepared to castle on next move T if temporarily unable to castle X if permanently not allowed to castle	<input type="checkbox"/>	<input type="checkbox"/>
In how many ways could each side make a capture on its next move?	<input type="checkbox"/>	<input type="checkbox"/>

** NOTE: See the instructions about pinned men and x-ray attacks.

	White	Black
In how many ways could each side give check on its next move?	<input type="checkbox"/>	<input type="checkbox"/>
How many men from each side have more attackers than they have defenders ? **	<input type="checkbox"/>	<input type="checkbox"/>
Who has more material on the board? Write: + if the side is ahead in material - if the side is behind in material = if the side is equal in material	<input type="checkbox"/>	<input type="checkbox"/>
How active are the minor pieces of each side? Write: H if still on Home Square C if Captured P if Pinned D if Developed	King-side <input type="checkbox"/>	King-side <input type="checkbox"/>
	Queen-side <input type="checkbox"/>	Queen-side <input type="checkbox"/>

Does either side have any pawns which are isolated ? (Y or N)	<input type="checkbox"/>	<input type="checkbox"/>
Does either side have any pawns which are doubled ? (Y or N)	<input type="checkbox"/>	<input type="checkbox"/>
Does either side have a rook positioned on an opened file ? (Y or N)	<input type="checkbox"/>	<input type="checkbox"/>
Does either side have a rook on file d or file e ? (Y or N)	<input type="checkbox"/>	<input type="checkbox"/>
What moves would you recommend for BLACK from this position? (List 1 or 2 possible moves.) For Question 20, write the best reply you see for the move you listed on line 18.	_____	_____

Twenty Questions


Problem 20

NAME: _____

DATE: _____

Copyright © 1998-2003

Photocopying this form for instructional use is permitted.



POSITION 20
 (White just played Bxc6)

	White	Black	
How many times is each side attacking the four central squares : d4, d5, e4, and e5? **	attacks on d4 : <input type="checkbox"/>	<input type="checkbox"/>	1
	attacks on d5 : <input type="checkbox"/>	<input type="checkbox"/>	2
	attacks on e4 : <input type="checkbox"/>	<input type="checkbox"/>	3
	attacks on e5 : <input type="checkbox"/>	<input type="checkbox"/>	4
Has either side castled ? Write: C if already castled P if prepared to castle on next move T if temporarily unable to castle X if permanently not allowed to castle	<input type="checkbox"/>	<input type="checkbox"/>	5
In how many ways could each side make a capture on its next move?	<input type="checkbox"/>	<input type="checkbox"/>	6

	White	Black	
In how many ways could each side give check on its next move?	<input type="checkbox"/>	<input type="checkbox"/>	7
How many men from each side have more attackers than they have defenders ? **	<input type="checkbox"/>	<input type="checkbox"/>	8
Who has more material on the board? Write: + if the side is ahead in material - if the side is behind in material = if the side is equal in material	<input type="checkbox"/>	<input type="checkbox"/>	9
How active are the minor pieces of each side? Write: H if still on <i>Home Square</i> C if <i>Captured</i> P if <i>Pinned</i> D if <i>Developed</i>	King-side <input type="checkbox"/>	<input type="checkbox"/>	10
	Queen-side <input type="checkbox"/>	<input type="checkbox"/>	11
	King-side <input type="checkbox"/>	<input type="checkbox"/>	12
	Queen-side <input type="checkbox"/>	<input type="checkbox"/>	13
Does either side have any pawns which are isolated ? (Y or N)	<input type="checkbox"/>	<input type="checkbox"/>	14
Does either side have any pawns which are doubled ? (Y or N)	<input type="checkbox"/>	<input type="checkbox"/>	15
Does either side have a rook positioned on an opened file ? (Y or N)	<input type="checkbox"/>	<input type="checkbox"/>	16
Does either side have a rook on file d or file e ? (Y or N)	<input type="checkbox"/>	<input type="checkbox"/>	17
What moves would you recommend for BLACK from this position? <i>(List 1 or 2 possible moves.)</i> <i>For Question 20, write the best reply you see for the move you listed on line 18.</i>	_____	_____	18
	_____	_____	19
	_____	_____	20

Twenty Questions


Problem 21

NAME: _____

DATE: _____

Copyright © 1998-2003

Photocopying this form for instructional use is permitted.



POSITION 21
 (White just played g4)

	White	Black
How many times is each side attacking the four central squares: d4, d5, e4, and e5? **	attacks on d4: <input type="checkbox"/>	<input type="checkbox"/>
	attacks on d5: <input type="checkbox"/>	<input type="checkbox"/>
	attacks on e4: <input type="checkbox"/>	<input type="checkbox"/>
	attacks on e5: <input type="checkbox"/>	<input type="checkbox"/>
Has either side castled ? Write: C if already castled P if prepared to castle on next move T if temporarily unable to castle X if permanently not allowed to castle	<input type="checkbox"/>	<input type="checkbox"/>
In how many ways could each side make a capture on its next move?	<input type="checkbox"/>	<input type="checkbox"/>

	White	Black	
In how many ways could each side give check on its next move?	<input type="checkbox"/>	<input type="checkbox"/>	7
How many men from each side have more attackers than they have defenders ? **	<input type="checkbox"/>	<input type="checkbox"/>	8
Who has more material on the board? Write: + if the side is ahead in material - if the side is behind in material = if the side is equal in material	<input type="checkbox"/>	<input type="checkbox"/>	9
How active are the minor pieces of each side? Write: H if still on Home Square C if Captured P if Pinned D if Developed	King-side <input type="checkbox"/>	King-side <input type="checkbox"/>	10
	Queen-side <input type="checkbox"/>	Queen-side <input type="checkbox"/>	11
	King-side <input type="checkbox"/>	King-side <input type="checkbox"/>	12
	Queen-side <input type="checkbox"/>	Queen-side <input type="checkbox"/>	13
Does either side have any pawns which are isolated ? (Y or N)	<input type="checkbox"/>	<input type="checkbox"/>	14
Does either side have any pawns which are doubled ? (Y or N)	<input type="checkbox"/>	<input type="checkbox"/>	15
Does either side have a rook positioned on an opened file ? (Y or N)	<input type="checkbox"/>	<input type="checkbox"/>	16
Does either side have a rook on file d or file e ? (Y or N)	<input type="checkbox"/>	<input type="checkbox"/>	17
What moves would you recommend for BLACK from this position? (List 1 or 2 possible moves.) For Question 20, write the best reply you see for the move you listed on line 18.	_____	_____	18
	_____	_____	19
	_____	_____	20

Twenty Questions


Problem 22

NAME: _____

DATE: _____

Copyright © 1998-2003

Photocopying this form for instructional use is permitted.



POSITION 22
 (White just played c4)

	White	Black	
How many times is each side attacking the four central squares : d4, d5, e4, and e5? **	attacks on d4 : <input type="checkbox"/>	<input type="checkbox"/>	1
	attacks on d5 : <input type="checkbox"/>	<input type="checkbox"/>	2
	attacks on e4 : <input type="checkbox"/>	<input type="checkbox"/>	3
	attacks on e5 : <input type="checkbox"/>	<input type="checkbox"/>	4
Has either side castled ? Write: C if already castled P if prepared to castle on next move T if temporarily unable to castle X if permanently not allowed to castle	<input type="checkbox"/>	<input type="checkbox"/>	5
In how many ways could each side make a capture on its next move?	<input type="checkbox"/>	<input type="checkbox"/>	6

** NOTE: See the instructions about pinned men and x-ray attacks.

	White	Black	
In how many ways could each side give check on its next move?	<input type="checkbox"/>	<input type="checkbox"/>	7
How many men from each side have more attackers than they have defenders ? **	<input type="checkbox"/>	<input type="checkbox"/>	8
Who has more material on the board? Write: + if the side is ahead in material - if the side is behind in material = if the side is equal in material	<input type="checkbox"/>	<input type="checkbox"/>	9
How active are the minor pieces of each side? Write: H if still on Home Square C if Captured P if Pinned D if Developed	King-side <input type="checkbox"/>	King-side <input type="checkbox"/>	10
	Queen-side <input type="checkbox"/>	Queen-side <input type="checkbox"/>	11
	King-side <input type="checkbox"/>	King-side <input type="checkbox"/>	12
	Queen-side <input type="checkbox"/>	Queen-side <input type="checkbox"/>	13

Does either side have any pawns which are isolated ? (Y or N)	<input type="checkbox"/>	<input type="checkbox"/>	14
Does either side have any pawns which are doubled ? (Y or N)	<input type="checkbox"/>	<input type="checkbox"/>	15
Does either side have a rook positioned on an opened file ? (Y or N)	<input type="checkbox"/>	<input type="checkbox"/>	16
Does either side have a rook on file d or file e ? (Y or N)	<input type="checkbox"/>	<input type="checkbox"/>	17
What moves would you recommend for BLACK from this position? <i>(List 1 or 2 possible moves.)</i> <i>For Question 20, write the best reply you see for the move you listed on line 18.</i>	_____	_____	18
	_____	_____	19
	_____	_____	20

Twenty Questions


Problem 23

NAME: _____

DATE: _____

Copyright © 1998-2003

Photocopying this form for instructional use is permitted.



POSITION 23

(White just played Be2)

	White	Black
How many times is each side attacking the four central squares: d4, d5, e4, and e5? **	attacks on d4: <input type="checkbox"/>	<input type="checkbox"/>
	attacks on d5: <input type="checkbox"/>	<input type="checkbox"/>
	attacks on e4: <input type="checkbox"/>	<input type="checkbox"/>
	attacks on e5: <input type="checkbox"/>	<input type="checkbox"/>
Has either side castled ?	<input type="checkbox"/>	<input type="checkbox"/>
Write: C if already castled P if prepared to castle on next move T if temporarily unable to castle X if permanently not allowed to castle		
In how many ways could each side make a capture on its next move?	<input type="checkbox"/>	<input type="checkbox"/>

** NOTE: See the instructions about pinned men and x-ray attacks.

	White	Black	
8 In how many ways could each side give check on its next move?	<input type="checkbox"/>	<input type="checkbox"/>	7
7 How many men from each side have more attackers than they have defenders ? **	<input type="checkbox"/>	<input type="checkbox"/>	8
6 Who has more material on the board?	<input type="checkbox"/>	<input type="checkbox"/>	9
5 Write: + if the side is ahead in material - if the side is behind in material = if the side is equal in material			
4 How active are the minor pieces of each side?	King-side <input type="checkbox"/>	<input type="checkbox"/>	10
3 Write: H if still on Home Square C if Captured P if Pinned D if Developed	King-side <input type="checkbox"/>	<input type="checkbox"/>	11
2	Queen-side <input type="checkbox"/>	<input type="checkbox"/>	12
1	Queen-side <input type="checkbox"/>	<input type="checkbox"/>	13
Does either side have any pawns which are isolated ? (Y or N)	<input type="checkbox"/>	<input type="checkbox"/>	14
Does either side have any pawns which are doubled ? (Y or N)	<input type="checkbox"/>	<input type="checkbox"/>	15
Does either side have a rook positioned on an opened file ? (Y or N)	<input type="checkbox"/>	<input type="checkbox"/>	16
Does either side have a rook on file d or file e ? (Y or N)	<input type="checkbox"/>	<input type="checkbox"/>	17
What moves would you recommend for BLACK from this position?	_____		18
(List 1 or 2 possible moves.)	_____		19
For Question 20, write the best reply you see for the move you listed on line 18.	_____		20

Twenty Questions


Problem 24

NAME: _____

DATE: _____

Copyright © 1998-2003

Photocopying this form for instructional use is permitted.



POSITION 24
 (Black just played cxd5)

	White	Black	
How many times is each side attacking the four central squares : d4, d5, e4, and e5? **	attacks on d4 : <input type="checkbox"/>	<input type="checkbox"/>	1
	attacks on d5 : <input type="checkbox"/>	<input type="checkbox"/>	2
	attacks on e4 : <input type="checkbox"/>	<input type="checkbox"/>	3
	attacks on e5 : <input type="checkbox"/>	<input type="checkbox"/>	4
Has either side castled ? Write: C if already castled P if prepared to castle on next move T if temporarily unable to castle X if permanently not allowed to castle	<input type="checkbox"/>	<input type="checkbox"/>	5
In how many ways could each side make a capture on its next move?	<input type="checkbox"/>	<input type="checkbox"/>	6

	White	Black	
In how many ways could each side give check on its next move?	<input type="checkbox"/>	<input type="checkbox"/>	7
How many men from each side have more attackers than they have defenders ? **	<input type="checkbox"/>	<input type="checkbox"/>	8
Who has more material on the board? Write: + if the side is ahead in material - if the side is behind in material = if the side is equal in material	<input type="checkbox"/>	<input type="checkbox"/>	9
How active are the minor pieces of each side? Write: H if still on Home Square C if Captured P if Pinned D if Developed	King-side <input type="checkbox"/>	King-side <input type="checkbox"/>	10
	Queen-side <input type="checkbox"/>	Queen-side <input type="checkbox"/>	11
	King-side <input type="checkbox"/>	King-side <input type="checkbox"/>	12
	Queen-side <input type="checkbox"/>	Queen-side <input type="checkbox"/>	13
Does either side have any pawns which are isolated ? (Y or N)	<input type="checkbox"/>	<input type="checkbox"/>	14
Does either side have any pawns which are doubled ? (Y or N)	<input type="checkbox"/>	<input type="checkbox"/>	15
Does either side have a rook positioned on an opened file ? (Y or N)	<input type="checkbox"/>	<input type="checkbox"/>	16
Does either side have a rook on file d or file e ? (Y or N)	<input type="checkbox"/>	<input type="checkbox"/>	17
What moves would you recommend for WHITE from this position? <i>(List 1 or 2 possible moves.)</i> <i>For Question 20, write the best reply you see for the move you listed on line 18.</i>	_____	_____	18
	_____	_____	19
	_____	_____	20

Twenty Questions


Problem 25

NAME: _____

DATE: _____

Copyright © 1998-2003

Photocopying this form for instructional use is permitted.



POSITION 25
 (White just played Nbx2)

	White	Black
How many times is each side attacking the four central squares: d4, d5, e4, and e5? **	attacks on d4: <input type="checkbox"/>	<input type="checkbox"/>
	attacks on d5: <input type="checkbox"/>	<input type="checkbox"/>
	attacks on e4: <input type="checkbox"/>	<input type="checkbox"/>
	attacks on e5: <input type="checkbox"/>	<input type="checkbox"/>
Has either side castled ? Write: C if already castled P if prepared to castle on next move T if temporarily unable to castle X if permanently not allowed to castle	<input type="checkbox"/>	<input type="checkbox"/>
In how many ways could each side make a capture on its next move?	<input type="checkbox"/>	<input type="checkbox"/>

** NOTE: See the instructions about pinned men and x-ray attacks.

	White	Black
In how many ways could each side give check on its next move?	<input type="checkbox"/>	<input type="checkbox"/>
How many men from each side have more attackers than they have defenders ? **	<input type="checkbox"/>	<input type="checkbox"/>
Who has more material on the board? Write: + if the side is ahead in material - if the side is behind in material = if the side is equal in material	<input type="checkbox"/>	<input type="checkbox"/>
How active are the minor pieces of each side? Write: H if still on Home Square C if Captured P if Pinned D if Developed	King-side <input type="checkbox"/>	King-side <input type="checkbox"/>
	Queen-side <input type="checkbox"/>	Queen-side <input type="checkbox"/>
Does either side have any pawns which are isolated ? (Y or N)	<input type="checkbox"/>	<input type="checkbox"/>
Does either side have any pawns which are doubled ? (Y or N)	<input type="checkbox"/>	<input type="checkbox"/>
Does either side have a rook positioned on an opened file ? (Y or N)	<input type="checkbox"/>	<input type="checkbox"/>
Does either side have a rook on file d or file e ? (Y or N)	<input type="checkbox"/>	<input type="checkbox"/>
What moves would you recommend for BLACK from this position? (List 1 or 2 possible moves.) For Question 20, write the best reply you see for the move you listed on line 18.	_____	_____
	_____	_____

Twenty Questions


Problem 26

NAME: _____

DATE: _____

Copyright © 1998-2003

Photocopying this form for instructional use is permitted.



POSITION 26
 (Black just played Bc5)

	White	Black	
How many times is each side attacking the four central squares : d4, d5, e4, and e5? **	attacks on d4 : <input type="checkbox"/>	<input type="checkbox"/>	1
	attacks on d5 : <input type="checkbox"/>	<input type="checkbox"/>	2
	attacks on e4 : <input type="checkbox"/>	<input type="checkbox"/>	3
	attacks on e5 : <input type="checkbox"/>	<input type="checkbox"/>	4
Has either side castled ? Write: C if already castled P if prepared to castle on next move T if temporarily unable to castle X if permanently not allowed to castle	<input type="checkbox"/>	<input type="checkbox"/>	5
In how many ways could each side make a capture on its next move?	<input type="checkbox"/>	<input type="checkbox"/>	6

8 In how many ways could each side **give check** on its next move?

7 How many men from each side have **more attackers than they have defenders**? **

5 **Who has more material** on the board?

Write: + if the side is ahead in material
 - if the side is behind in material
 = if the side is equal in material

3 **How active are the minor pieces** of each side?

Write: **H** if still on *Home Square*
C if *Captured*
P if *Pinned*
D if *Developed*

	White	Black	
	<input type="checkbox"/>	<input type="checkbox"/>	7
	<input type="checkbox"/>	<input type="checkbox"/>	8
	<input type="checkbox"/>	<input type="checkbox"/>	9
King-side	<input type="checkbox"/>	<input type="checkbox"/>	10
King-side	<input type="checkbox"/>	<input type="checkbox"/>	11
Queen-side	<input type="checkbox"/>	<input type="checkbox"/>	12
Queen-side	<input type="checkbox"/>	<input type="checkbox"/>	13

14 Does either side have any pawns which are **isolated**? (Y or N)

15 Does either side have any pawns which are **doubled**? (Y or N)

16 Does either side have a **rook positioned on an opened file**? (Y or N)

17 Does either side have a **rook on file d or file e**? (Y or N)

18 What **moves would you recommend for WHITE** from this position?

19 _____
 20 _____

Twenty Questions


Problem 27

NAME: _____

DATE: _____

Copyright © 1998-2003

Photocopying this form for instructional use is permitted.



POSITION 27
 (White just played b4)

	White	Black
How many times is each side attacking the four central squares: d4, d5, e4, and e5? **	attacks on d4: <input type="checkbox"/>	<input type="checkbox"/>
	attacks on d5: <input type="checkbox"/>	<input type="checkbox"/>
	attacks on e4: <input type="checkbox"/>	<input type="checkbox"/>
	attacks on e5: <input type="checkbox"/>	<input type="checkbox"/>
Has either side castled ? Write: C if already castled P if prepared to castle on next move T if temporarily unable to castle X if permanently not allowed to castle	<input type="checkbox"/>	<input type="checkbox"/>
In how many ways could each side make a capture on its next move?	<input type="checkbox"/>	<input type="checkbox"/>

** NOTE: See the instructions about pinned men and x-ray attacks.

	White	Black	
In how many ways could each side give check on its next move?	<input type="checkbox"/>	<input type="checkbox"/>	7
How many men from each side have more attackers than they have defenders ? **	<input type="checkbox"/>	<input type="checkbox"/>	8
Who has more material on the board? Write: + if the side is ahead in material - if the side is behind in material = if the side is equal in material	<input type="checkbox"/>	<input type="checkbox"/>	9
How active are the minor pieces of each side? Write: H if still on Home Square C if Captured P if Pinned D if Developed	King-side <input type="checkbox"/>	King-side <input type="checkbox"/>	10
	Queen-side <input type="checkbox"/>	Queen-side <input type="checkbox"/>	11
	King-side <input type="checkbox"/>	King-side <input type="checkbox"/>	12
	Queen-side <input type="checkbox"/>	Queen-side <input type="checkbox"/>	13
Does either side have any pawns which are isolated ? (Y or N)	<input type="checkbox"/>	<input type="checkbox"/>	14
Does either side have any pawns which are doubled ? (Y or N)	<input type="checkbox"/>	<input type="checkbox"/>	15
Does either side have a rook positioned on an opened file ? (Y or N)	<input type="checkbox"/>	<input type="checkbox"/>	16
Does either side have a rook on file d or file e ? (Y or N)	<input type="checkbox"/>	<input type="checkbox"/>	17
What moves would you recommend for BLACK from this position? (List 1 or 2 possible moves.) For Question 20, write the best reply you see for the move you listed on line 18.	_____	_____	18
	_____	_____	19
	_____	_____	20

Twenty Questions


Problem 28

NAME: _____

DATE: _____

Copyright © 1998-2003

Photocopying this form for instructional use is permitted.



POSITION 28

(Black just played Bxf3)

	White	Black	
How many times is each side attacking the four central squares : d4, d5, e4, and e5? **	attacks on d4 : <input type="checkbox"/>	<input type="checkbox"/>	1
	attacks on d5 : <input type="checkbox"/>	<input type="checkbox"/>	2
	attacks on e4 : <input type="checkbox"/>	<input type="checkbox"/>	3
	attacks on e5 : <input type="checkbox"/>	<input type="checkbox"/>	4
Has either side castled ? Write: C if already castled P if prepared to castle on next move T if temporarily unable to castle X if permanently not allowed to castle	<input type="checkbox"/>	<input type="checkbox"/>	5
In how many ways could each side make a capture on its next move?	<input type="checkbox"/>	<input type="checkbox"/>	6

** NOTE: See the instructions about pinned men and x-ray attacks.

	White	Black	
In how many ways could each side give check on its next move?	<input type="checkbox"/>	<input type="checkbox"/>	7
How many men from each side have more attackers than they have defenders ? **	<input type="checkbox"/>	<input type="checkbox"/>	8
Who has more material on the board? Write: + if the side is ahead in material - if the side is behind in material = if the side is equal in material	<input type="checkbox"/>	<input type="checkbox"/>	9
How active are the minor pieces of each side? Write: H if still on Home Square C if Captured P if Pinned D if Developed	King-side <input type="checkbox"/>	<input type="checkbox"/>	10
	Queen-side <input type="checkbox"/>	<input type="checkbox"/>	11
	King-side <input type="checkbox"/>	<input type="checkbox"/>	12
	Queen-side <input type="checkbox"/>	<input type="checkbox"/>	13

Does either side have any pawns which are isolated ? (Y or N)	<input type="checkbox"/>	<input type="checkbox"/>	14
Does either side have any pawns which are doubled ? (Y or N)	<input type="checkbox"/>	<input type="checkbox"/>	15
Does either side have a rook positioned on an opened file ? (Y or N)	<input type="checkbox"/>	<input type="checkbox"/>	16
Does either side have a rook on file d or file e ? (Y or N)	<input type="checkbox"/>	<input type="checkbox"/>	17
What moves would you recommend for WHITE from this position? (List 1 or 2 possible moves.) For Question 20, write the best reply you see for the move you listed on line 18.	_____		18
	_____		19
	_____		20

Twenty Questions


Problem 29

NAME: _____

DATE: _____

Copyright © 1998-2003

Photocopying this form for instructional use is permitted.



POSITION 29
 (Black just played a6)

	White	Black
How many times is each side attacking the four central squares: d4, d5, e4, and e5? **	attacks on d4: <input type="checkbox"/>	<input type="checkbox"/>
	attacks on d5: <input type="checkbox"/>	<input type="checkbox"/>
	attacks on e4: <input type="checkbox"/>	<input type="checkbox"/>
	attacks on e5: <input type="checkbox"/>	<input type="checkbox"/>
Has either side castled ? Write: C if already castled P if prepared to castle on next move T if temporarily unable to castle X if permanently not allowed to castle	<input type="checkbox"/>	<input type="checkbox"/>
In how many ways could each side make a capture on its next move?	<input type="checkbox"/>	<input type="checkbox"/>

	White	Black	
In how many ways could each side give check on its next move?	<input type="checkbox"/>	<input type="checkbox"/>	7
How many men from each side have more attackers than they have defenders ? **	<input type="checkbox"/>	<input type="checkbox"/>	8
Who has more material on the board? Write: + if the side is ahead in material - if the side is behind in material = if the side is equal in material	<input type="checkbox"/>	<input type="checkbox"/>	9
How active are the minor pieces of each side? Write: H if still on Home Square C if Captured P if Pinned D if Developed	King-side <input type="checkbox"/>	King-side <input type="checkbox"/>	10
	Queen-side <input type="checkbox"/>	Queen-side <input type="checkbox"/>	11
	King-side <input type="checkbox"/>	King-side <input type="checkbox"/>	12
	Queen-side <input type="checkbox"/>	Queen-side <input type="checkbox"/>	13
Does either side have any pawns which are isolated ? (Y or N)	<input type="checkbox"/>	<input type="checkbox"/>	14
Does either side have any pawns which are doubled ? (Y or N)	<input type="checkbox"/>	<input type="checkbox"/>	15
Does either side have a rook positioned on an opened file ? (Y or N)	<input type="checkbox"/>	<input type="checkbox"/>	16
Does either side have a rook on file d or file e ? (Y or N)	<input type="checkbox"/>	<input type="checkbox"/>	17
What moves would you recommend for WHITE from this position? (List 1 or 2 possible moves.) For Question 20, write the best reply you see for the move you listed on line 18.	_____	_____	18
	_____	_____	19
	_____	_____	20

Twenty Questions


Problem 30

NAME: _____

DATE: _____

Copyright © 1998-2003

Photocopying this form for instructional use is permitted.



POSITION 30

(Black just played 0-0-0)

How many times is each side **attacking the four central squares**: d4, d5, e4, and e5? **

** NOTE: See the instructions about pinned men and x-ray attacks.

Has either side **castled**?

Write: **C** if already castled
P if prepared to castle on next move
T if temporarily unable to castle
X if permanently not allowed to castle

In how many ways could each side **make a capture** on its next move?

	White	Black	
attacks on d4 :	<input type="checkbox"/>	<input type="checkbox"/>	1
attacks on d5 :	<input type="checkbox"/>	<input type="checkbox"/>	2
attacks on e4 :	<input type="checkbox"/>	<input type="checkbox"/>	3
attacks on e5 :	<input type="checkbox"/>	<input type="checkbox"/>	4
	<input type="checkbox"/>	<input type="checkbox"/>	5
	<input type="checkbox"/>	<input type="checkbox"/>	6

White Black

In how many ways could each side **give check** on its next move?

<input type="checkbox"/>	<input type="checkbox"/>	7
--------------------------	--------------------------	---

How many men from each side have **more attackers than they have defenders**? **

<input type="checkbox"/>	<input type="checkbox"/>	8
--------------------------	--------------------------	---

Who has more material on the board?

Write: + if the side is ahead in material
 - if the side is behind in material
 = if the side is equal in material

<input type="checkbox"/>	<input type="checkbox"/>	9
--------------------------	--------------------------	---

How active are the minor pieces of each side?

Write: **H** if still on *Home Square*
C if *Captured*
P if *Pinned*
D if *Developed*

King-side



<input type="checkbox"/>	<input type="checkbox"/>	10
--------------------------	--------------------------	----

King-side



<input type="checkbox"/>	<input type="checkbox"/>	11
--------------------------	--------------------------	----

Queen-side



<input type="checkbox"/>	<input type="checkbox"/>	12
--------------------------	--------------------------	----

Queen-side



<input type="checkbox"/>	<input type="checkbox"/>	13
--------------------------	--------------------------	----

Does either side have any pawns which are **isolated**? (Y or N)

<input type="checkbox"/>	<input type="checkbox"/>	14
--------------------------	--------------------------	----

Does either side have any pawns which are **doubled**? (Y or N)

<input type="checkbox"/>	<input type="checkbox"/>	15
--------------------------	--------------------------	----

Does either side have a **rook positioned on an opened file**? (Y or N)

<input type="checkbox"/>	<input type="checkbox"/>	16
--------------------------	--------------------------	----

Does either side have a **rook on file d or file e**? (Y or N)

<input type="checkbox"/>	<input type="checkbox"/>	17
--------------------------	--------------------------	----

What **moves would you recommend for WHITE** from this position?

_____ 18

(List 1 or 2 possible moves.)
 For Question 20, write the best reply you see for the move you listed on line 18.

_____ 19

_____ 20

Twenty Questions


Problem 31

NAME: _____

DATE: _____

Copyright © 1998-2003

Photocopying this form for instructional use is permitted.



POSITION 31
 (Black just played Bg7)

	White	Black
How many times is each side attacking the four central squares: d4, d5, e4, and e5? **	attacks on d4: <input type="checkbox"/>	<input type="checkbox"/>
	attacks on d5: <input type="checkbox"/>	<input type="checkbox"/>
	attacks on e4: <input type="checkbox"/>	<input type="checkbox"/>
	attacks on e5: <input type="checkbox"/>	<input type="checkbox"/>
Has either side castled ? Write: C if already castled P if prepared to castle on next move T if temporarily unable to castle X if permanently not allowed to castle	<input type="checkbox"/>	<input type="checkbox"/>
In how many ways could each side make a capture on its next move?	<input type="checkbox"/>	<input type="checkbox"/>

** NOTE: See the instructions about pinned men and x-ray attacks.

	White	Black	
8 In how many ways could each side give check on its next move?	<input type="checkbox"/>	<input type="checkbox"/>	7
7 How many men from each side have more attackers than they have defenders ? **	<input type="checkbox"/>	<input type="checkbox"/>	8
6 Who has more material on the board? Write: + if the side is ahead in material - if the side is behind in material = if the side is equal in material	<input type="checkbox"/>	<input type="checkbox"/>	9
5 How active are the minor pieces of each side? Write: H if still on Home Square C if Captured P if Pinned D if Developed	King-side <input type="checkbox"/>	King-side <input type="checkbox"/>	10
	Queen-side <input type="checkbox"/>	Queen-side <input type="checkbox"/>	11
	Queen-side <input type="checkbox"/>	Queen-side <input type="checkbox"/>	12
	Queen-side <input type="checkbox"/>	Queen-side <input type="checkbox"/>	13
4 Does either side have any pawns which are isolated ? (Y or N)	<input type="checkbox"/>	<input type="checkbox"/>	14
3 Does either side have any pawns which are doubled ? (Y or N)	<input type="checkbox"/>	<input type="checkbox"/>	15
2 Does either side have a rook positioned on an opened file ? (Y or N)	<input type="checkbox"/>	<input type="checkbox"/>	16
1 Does either side have a rook on file d or file e ? (Y or N)	<input type="checkbox"/>	<input type="checkbox"/>	17
What moves would you recommend for WHITE from this position? (List 1 or 2 possible moves.) For Question 20, write the best reply you see for the move you listed on line 18.	_____	_____	18
	_____	_____	19
	_____	_____	20

Twenty Questions

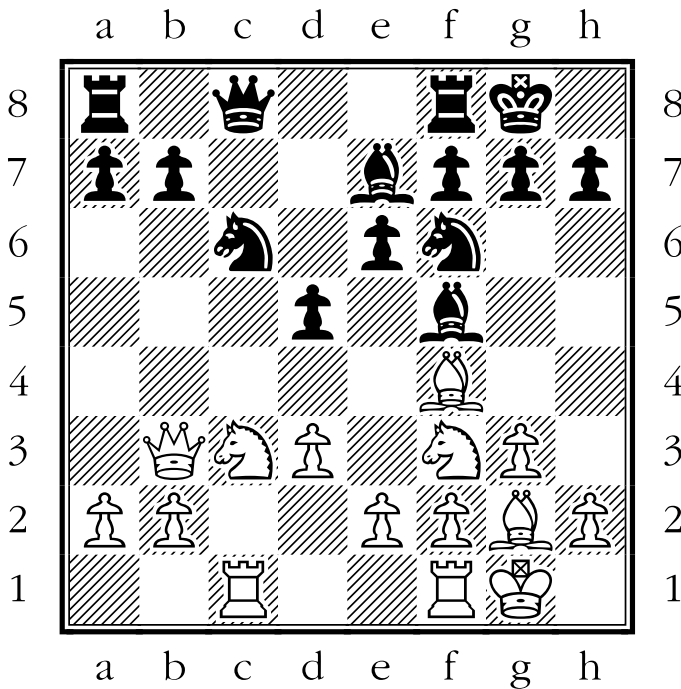
Problem 32

NAME: _____

DATE: _____

Copyright © 1998-2003

Photocopying this form for instructional use is permitted.



POSITION 32

(White just played Ra1)

	White	Black	
How many times is each side attacking the four central squares : d4, d5, e4, and e5? **	attacks on d4 : <input type="checkbox"/>	<input type="checkbox"/>	1
	attacks on d5 : <input type="checkbox"/>	<input type="checkbox"/>	2
	attacks on e4 : <input type="checkbox"/>	<input type="checkbox"/>	3
	attacks on e5 : <input type="checkbox"/>	<input type="checkbox"/>	4
Has either side castled ? Write: C if already castled P if prepared to castle on next move T if temporarily unable to castle X if permanently not allowed to castle	<input type="checkbox"/>	<input type="checkbox"/>	5
In how many ways could each side make a capture on its next move?	<input type="checkbox"/>	<input type="checkbox"/>	6

** NOTE: See the instructions about pinned men and x-ray attacks.

	White	Black	
In how many ways could each side give check on its next move?	<input type="checkbox"/>	<input type="checkbox"/>	7
How many men from each side have more attackers than they have defenders ? **	<input type="checkbox"/>	<input type="checkbox"/>	8
Who has more material on the board? Write: + if the side is ahead in material - if the side is behind in material = if the side is equal in material	<input type="checkbox"/>	<input type="checkbox"/>	9
How active are the minor pieces of each side? Write: H if still on Home Square C if Captured P if Pinned D if Developed	King-side <input type="checkbox"/>	King-side <input type="checkbox"/>	10
	Queen-side <input type="checkbox"/>	Queen-side <input type="checkbox"/>	11
	King-side <input type="checkbox"/>	King-side <input type="checkbox"/>	12
	Queen-side <input type="checkbox"/>	Queen-side <input type="checkbox"/>	13
Does either side have any pawns which are isolated ? (Y or N)	<input type="checkbox"/>	<input type="checkbox"/>	14
Does either side have any pawns which are doubled ? (Y or N)	<input type="checkbox"/>	<input type="checkbox"/>	15
Does either side have a rook positioned on an opened file ? (Y or N)	<input type="checkbox"/>	<input type="checkbox"/>	16
Does either side have a rook on file d or file e ? (Y or N)	<input type="checkbox"/>	<input type="checkbox"/>	17
What moves would you recommend for BLACK from this position? (List 1 or 2 possible moves.) For Question 20, write the best reply you see for the move you listed on line 18.	_____	_____	18
	_____	_____	19
	_____	_____	20

Twenty Questions


Problem 33

NAME: _____

DATE: _____

Copyright © 1998-2003

Photocopying this form for instructional use is permitted.



POSITION 33

(White just played Qb3)

	White	Black
How many times is each side attacking the four central squares: d4, d5, e4, and e5? **	attacks on d4: <input type="checkbox"/>	<input type="checkbox"/>
	attacks on d5: <input type="checkbox"/>	<input type="checkbox"/>
	attacks on e4: <input type="checkbox"/>	<input type="checkbox"/>
	attacks on e5: <input type="checkbox"/>	<input type="checkbox"/>
Has either side castled ? Write: C if already castled P if prepared to castle on next move T if temporarily unable to castle X if permanently not allowed to castle	<input type="checkbox"/>	<input type="checkbox"/>
In how many ways could each side make a capture on its next move?	<input type="checkbox"/>	<input type="checkbox"/>

** NOTE: See the instructions about pinned men and x-ray attacks.

	White	Black	
8 In how many ways could each side give check on its next move?	<input type="checkbox"/>	<input type="checkbox"/>	7
7 How many men from each side have more attackers than they have defenders ? **	<input type="checkbox"/>	<input type="checkbox"/>	8
6 Who has more material on the board? Write: + if the side is ahead in material - if the side is behind in material = if the side is equal in material	<input type="checkbox"/>	<input type="checkbox"/>	9
5 How active are the minor pieces of each side? Write: H if still on Home Square C if Captured P if Pinned D if Developed	King-side <input type="checkbox"/>	King-side <input type="checkbox"/>	10
	Queen-side <input type="checkbox"/>	Queen-side <input type="checkbox"/>	11
	King-side <input type="checkbox"/>	King-side <input type="checkbox"/>	12
	Queen-side <input type="checkbox"/>	Queen-side <input type="checkbox"/>	13
4 Does either side have any pawns which are isolated ? (Y or N)	<input type="checkbox"/>	<input type="checkbox"/>	14
3 Does either side have any pawns which are doubled ? (Y or N)	<input type="checkbox"/>	<input type="checkbox"/>	15
2 Does either side have a rook positioned on an opened file ? (Y or N)	<input type="checkbox"/>	<input type="checkbox"/>	16
1 Does either side have a rook on file d or file e ? (Y or N)	<input type="checkbox"/>	<input type="checkbox"/>	17
What moves would you recommend for BLACK from this position? (List 1 or 2 possible moves.) For Question 20, write the best reply you see for the move you listed on line 18.	_____	_____	18
	_____	_____	19
	_____	_____	20

Twenty Questions


Problem 34

NAME: _____

DATE: _____

Copyright © 1998-2003

Photocopying this form for instructional use is permitted.



POSITION 34

(Black just played 0-0-0)

	White	Black	
How many times is each side attacking the four central squares : d4, d5, e4, and e5? **	attacks on d4 : <input type="checkbox"/>	<input type="checkbox"/>	1
	attacks on d5 : <input type="checkbox"/>	<input type="checkbox"/>	2
	attacks on e4 : <input type="checkbox"/>	<input type="checkbox"/>	3
	attacks on e5 : <input type="checkbox"/>	<input type="checkbox"/>	4
Has either side castled ? Write: C if already castled P if prepared to castle on next move T if temporarily unable to castle X if permanently not allowed to castle	<input type="checkbox"/>	<input type="checkbox"/>	5
In how many ways could each side make a capture on its next move?	<input type="checkbox"/>	<input type="checkbox"/>	6

** NOTE: See the instructions about pinned men and x-ray attacks.

	White	Black	
In how many ways could each side give check on its next move?	<input type="checkbox"/>	<input type="checkbox"/>	7
How many men from each side have more attackers than they have defenders ? **	<input type="checkbox"/>	<input type="checkbox"/>	8
Who has more material on the board? Write: + if the side is ahead in material - if the side is behind in material = if the side is equal in material	<input type="checkbox"/>	<input type="checkbox"/>	9
How active are the minor pieces of each side? Write: H if still on Home Square C if Captured P if Pinned D if Developed	King-side <input type="checkbox"/>	<input type="checkbox"/>	10
	Queen-side <input type="checkbox"/>	<input type="checkbox"/>	11
	King-side <input type="checkbox"/>	<input type="checkbox"/>	12
	Queen-side <input type="checkbox"/>	<input type="checkbox"/>	13
Does either side have any pawns which are isolated ? (Y or N)	<input type="checkbox"/>	<input type="checkbox"/>	14
Does either side have any pawns which are doubled ? (Y or N)	<input type="checkbox"/>	<input type="checkbox"/>	15
Does either side have a rook positioned on an opened file ? (Y or N)	<input type="checkbox"/>	<input type="checkbox"/>	16
Does either side have a rook on file d or file e ? (Y or N)	<input type="checkbox"/>	<input type="checkbox"/>	17
What moves would you recommend for WHITE from this position? (List 1 or 2 possible moves.) For Question 20, write the best reply you see for the move you listed on line 18.	_____		18
	_____		19
	_____		20

Twenty Questions


Problem 35

NAME: _____

DATE: _____

Copyright © 1998-2003

Photocopying this form for instructional use is permitted.



POSITION 35
 (Black just played d6)

	White	Black
How many times is each side attacking the four central squares: d4, d5, e4, and e5? **	attacks on d4: <input type="checkbox"/>	<input type="checkbox"/>
	attacks on d5: <input type="checkbox"/>	<input type="checkbox"/>
	attacks on e4: <input type="checkbox"/>	<input type="checkbox"/>
	attacks on e5: <input type="checkbox"/>	<input type="checkbox"/>
Has either side castled ?	<input type="checkbox"/>	<input type="checkbox"/>
Write: C if already castled P if prepared to castle on next move T if temporarily unable to castle X if permanently not allowed to castle	<input type="checkbox"/>	<input type="checkbox"/>
In how many ways could each side make a capture on its next move?	<input type="checkbox"/>	<input type="checkbox"/>

** NOTE: See the instructions about pinned men and x-ray attacks.

8
7
6
5
4
3
2
1

In how many ways could each side **give check** on its next move?

How many men from each side have **more attackers than they have defenders**? **

Who has more material on the board?

Write: + if the side is ahead in material
 - if the side is behind in material
 = if the side is equal in material

How active are the minor pieces of each side?

Write: **H** if still on Home Square
C if Captured
P if Pinned
D if Developed

White **Black**

 7

 8

 9

King-side 10

King-side 11

Queen-side 12

Queen-side 13

Does either side have any pawns which are **isolated**? (Y or N)

 14

Does either side have any pawns which are **doubled**? (Y or N)

 15

Does either side have a **rook positioned on an opened file**? (Y or N)

 16

Does either side have a **rook on file d or file e**? (Y or N)

 17

What **moves do you suggest for WHITE** from this position?

_____ 18

(List 1 or 2 possible moves.)
 For Question 20, write the best reply you see for the move you listed on line 18.

_____ 19

_____ 20

Twenty Questions


Problem 36

NAME: _____

DATE: _____

Copyright © 1998-2003

Photocopying this form for instructional use is permitted.



POSITION 36

(White just played gxf3)

How many times is each side **attacking the four central squares**: d4, d5, e4, and e5? **

** NOTE: See the instructions about pinned men and x-ray attacks.

Has either side **castled**?

Write: **C** if already castled
P if prepared to castle on next move
T if temporarily unable to castle
X if permanently not allowed to castle

In how many ways could each side **make a capture** on its next move?

	White	Black	
attacks on d4 :	<input type="checkbox"/>	<input type="checkbox"/>	1
attacks on d5 :	<input type="checkbox"/>	<input type="checkbox"/>	2
attacks on e4 :	<input type="checkbox"/>	<input type="checkbox"/>	3
attacks on e5 :	<input type="checkbox"/>	<input type="checkbox"/>	4
	<input type="checkbox"/>	<input type="checkbox"/>	5
	<input type="checkbox"/>	<input type="checkbox"/>	6

White Black

In how many ways could each side **give check** on its next move?

<input type="checkbox"/>	<input type="checkbox"/>	7
--------------------------	--------------------------	---

How many men from each side have **more attackers than they have defenders**? **

<input type="checkbox"/>	<input type="checkbox"/>	8
--------------------------	--------------------------	---

Who has more material on the board?

Write: **+** if the side is ahead in material
- if the side is behind in material
= if the side is equal in material

<input type="checkbox"/>	<input type="checkbox"/>	9
--------------------------	--------------------------	---

How active are the minor pieces of each side?

Write: **H** if still on *Home Square*
C if *Captured*
P if *Pinned*
D if *Developed*

King-side

<input type="checkbox"/>	<input type="checkbox"/>	10
--------------------------	--------------------------	----

King-side

<input type="checkbox"/>	<input type="checkbox"/>	11
--------------------------	--------------------------	----

Queen-side

<input type="checkbox"/>	<input type="checkbox"/>	12
--------------------------	--------------------------	----

Queen-side

<input type="checkbox"/>	<input type="checkbox"/>	13
--------------------------	--------------------------	----

Does either side have any pawns which are **isolated**? (Y or N)

<input type="checkbox"/>	<input type="checkbox"/>	14
--------------------------	--------------------------	----

Does either side have any pawns which are **doubled**? (Y or N)

<input type="checkbox"/>	<input type="checkbox"/>	15
--------------------------	--------------------------	----

Does either side have a **rook positioned on an opened file**? (Y or N)

<input type="checkbox"/>	<input type="checkbox"/>	16
--------------------------	--------------------------	----

Does either side have a **rook on file d or file e**? (Y or N)

<input type="checkbox"/>	<input type="checkbox"/>	17
--------------------------	--------------------------	----

What **moves would you recommend for BLACK** from this position?

_____	18
_____	19

(List 1 or 2 possible moves.)
 For Question 20, write the best reply you see for the move you listed on line 18.

_____	20
-------	----

Twenty Questions


Problem 37

NAME: _____

DATE: _____

Copyright © 1998-2003

Photocopying this form for instructional use is permitted.



POSITION 37
 (Black just played d6)

	White	Black
How many times is each side attacking the four central squares: d4, d5, e4, and e5? **	attacks on d4: <input type="checkbox"/>	<input type="checkbox"/>
	attacks on d5: <input type="checkbox"/>	<input type="checkbox"/>
	attacks on e4: <input type="checkbox"/>	<input type="checkbox"/>
	attacks on e5: <input type="checkbox"/>	<input type="checkbox"/>
Has either side castled ? Write: C if already castled P if prepared to castle on next move T if temporarily unable to castle X if permanently not allowed to castle	<input type="checkbox"/>	<input type="checkbox"/>
In how many ways could each side make a capture on its next move?	<input type="checkbox"/>	<input type="checkbox"/>

** NOTE: See the instructions about pinned men and x-ray attacks.

8
7
6
5
4
3
2
1

In how many ways could each side **give check** on its next move?

How many men from each side have **more attackers than they have defenders**? **

Who has more material on the board?

Write: + if the side is ahead in material
 - if the side is behind in material
 = if the side is equal in material

How active are the minor pieces of each side?

Write: **H** if still on Home Square
C if Captured
P if Pinned
D if Developed

White **Black**

 7

 8

 9

King-side 10

King-side 11

Queen-side 12

Queen-side 13

Does either side have any pawns which are **isolated**? (Y or N)

 14

Does either side have any pawns which are **doubled**? (Y or N)

 15

Does either side have a **rook positioned on an opened file**? (Y or N)

 16

Does either side have a **rook on file d or file e**? (Y or N)

 17

What **moves do you suggest for WHITE** from this position?

_____ 18

(List 1 or 2 possible moves.)
 For Question 20, write the best reply you see for the move you listed on line 18.

_____ 19
 _____ 20

Twenty Questions


Problem 38

NAME: _____

DATE: _____

Copyright © 1998-2003

Photocopying this form for instructional use is permitted.



POSITION 38
 (Black just played g5)

	White	Black	
How many times is each side attacking the four central squares : d4, d5, e4, and e5? **	attacks on d4 : <input type="checkbox"/>	<input type="checkbox"/>	1
	attacks on d5 : <input type="checkbox"/>	<input type="checkbox"/>	2
	attacks on e4 : <input type="checkbox"/>	<input type="checkbox"/>	3
	attacks on e5 : <input type="checkbox"/>	<input type="checkbox"/>	4
Has either side castled ? Write: C if already castled P if prepared to castle on next move T if temporarily unable to castle X if permanently not allowed to castle	<input type="checkbox"/>	<input type="checkbox"/>	5
In how many ways could each side make a capture on its next move?	<input type="checkbox"/>	<input type="checkbox"/>	6

** NOTE: See the instructions about pinned men and x-ray attacks.

	White	Black	
In how many ways could each side give check on its next move?	<input type="checkbox"/>	<input type="checkbox"/>	7
How many men from each side have more attackers than they have defenders ? **	<input type="checkbox"/>	<input type="checkbox"/>	8
Who has more material on the board? Write: + if the side is ahead in material - if the side is behind in material = if the side is equal in material	<input type="checkbox"/>	<input type="checkbox"/>	9
How active are the minor pieces of each side? Write: H if still on Home Square C if Captured P if Pinned D if Developed	King-side <input type="checkbox"/>	King-side <input type="checkbox"/>	10
	Queen-side <input type="checkbox"/>	Queen-side <input type="checkbox"/>	11
	King-side <input type="checkbox"/>	King-side <input type="checkbox"/>	12
	Queen-side <input type="checkbox"/>	Queen-side <input type="checkbox"/>	13
Does either side have any pawns which are isolated ? (Y or N)	<input type="checkbox"/>	<input type="checkbox"/>	14
Does either side have any pawns which are doubled ? (Y or N)	<input type="checkbox"/>	<input type="checkbox"/>	15
Does either side have a rook positioned on an opened file ? (Y or N)	<input type="checkbox"/>	<input type="checkbox"/>	16
Does either side have a rook on file d or file e ? (Y or N)	<input type="checkbox"/>	<input type="checkbox"/>	17
What moves would you recommend for WHITE from this position? <i>(List 1 or 2 possible moves.)</i> <i>For Question 20, write the best reply you see for the move you listed on line 18.</i>	_____	_____	18
	_____	_____	19
	_____	_____	20

Twenty Questions


Problem 39

NAME: _____

DATE: _____

Copyright © 1998-2003

Photocopying this form for instructional use is permitted.



POSITION 39
 (Black just played Nf6)

	White	Black
How many times is each side attacking the four central squares: d4, d5, e4, and e5? **	attacks on d4: <input type="checkbox"/>	<input type="checkbox"/>
	attacks on d5: <input type="checkbox"/>	<input type="checkbox"/>
	attacks on e4: <input type="checkbox"/>	<input type="checkbox"/>
	attacks on e5: <input type="checkbox"/>	<input type="checkbox"/>
Has either side castled ? Write: C if already castled P if prepared to castle on next move T if temporarily unable to castle X if permanently not allowed to castle	<input type="checkbox"/>	<input type="checkbox"/>
In how many ways could each side make a capture on its next move?	<input type="checkbox"/>	<input type="checkbox"/>

** NOTE: See the instructions about pinned men and x-ray attacks.

	White	Black	
8 In how many ways could each side give check on its next move?	<input type="checkbox"/>	<input type="checkbox"/>	7
7 How many men from each side have more attackers than they have defenders ? **	<input type="checkbox"/>	<input type="checkbox"/>	8
6 Who has more material on the board? Write: + if the side is ahead in material - if the side is behind in material = if the side is equal in material	<input type="checkbox"/>	<input type="checkbox"/>	9
5 How active are the minor pieces of each side? Write: H if still on Home Square C if Captured P if Pinned D if Developed	King-side <input type="checkbox"/>	King-side <input type="checkbox"/>	10
	Queen-side <input type="checkbox"/>	Queen-side <input type="checkbox"/>	11
	King-side <input type="checkbox"/>	King-side <input type="checkbox"/>	12
	Queen-side <input type="checkbox"/>	Queen-side <input type="checkbox"/>	13
4 Does either side have any pawns which are isolated ? (Y or N)	<input type="checkbox"/>	<input type="checkbox"/>	14
3 Does either side have any pawns which are doubled ? (Y or N)	<input type="checkbox"/>	<input type="checkbox"/>	15
2 Does either side have a rook positioned on an opened file ? (Y or N)	<input type="checkbox"/>	<input type="checkbox"/>	16
1 Does either side have a rook on file d or file e ? (Y or N)	<input type="checkbox"/>	<input type="checkbox"/>	17
What moves do you suggest for WHITE from this position? (List 1 or 2 possible moves.) For Question 20, write the best reply you see for the move you listed on line 18.	_____	_____	18
	_____	_____	19
	_____	_____	20

Twenty Questions


Problem 40

NAME: _____

DATE: _____

Copyright © 1998-2003

Photocopying this form for instructional use is permitted.



POSITION 40

(Black just played Qc8)

	White	Black	
How many times is each side attacking the four central squares : d4, d5, e4, and e5? **	attacks on d4 : <input type="checkbox"/>	<input type="checkbox"/>	1
	attacks on d5 : <input type="checkbox"/>	<input type="checkbox"/>	2
	attacks on e4 : <input type="checkbox"/>	<input type="checkbox"/>	3
	attacks on e5 : <input type="checkbox"/>	<input type="checkbox"/>	4
Has either side castled ? Write: C if already castled P if prepared to castle on next move T if temporarily unable to castle X if permanently not allowed to castle	<input type="checkbox"/>	<input type="checkbox"/>	5
In how many ways could each side make a capture on its next move?	<input type="checkbox"/>	<input type="checkbox"/>	6

** NOTE: See the instructions about pinned men and x-ray attacks.

	White	Black	
In how many ways could each side give check on its next move?	<input type="checkbox"/>	<input type="checkbox"/>	7
How many men from each side have more attackers than they have defenders ? **	<input type="checkbox"/>	<input type="checkbox"/>	8
Who has more material on the board? Write: + if the side is ahead in material - if the side is behind in material = if the side is equal in material	<input type="checkbox"/>	<input type="checkbox"/>	9
How active are the minor pieces of each side? Write: H if still on Home Square C if Captured P if Pinned D if Developed	King-side <input type="checkbox"/>	<input type="checkbox"/>	10
	Queen-side <input type="checkbox"/>	<input type="checkbox"/>	11
	King-side <input type="checkbox"/>	<input type="checkbox"/>	12
	Queen-side <input type="checkbox"/>	<input type="checkbox"/>	13

Does either side have any pawns which are isolated ? (Y or N)	<input type="checkbox"/>	<input type="checkbox"/>	14
Does either side have any pawns which are doubled ? (Y or N)	<input type="checkbox"/>	<input type="checkbox"/>	15
Does either side have a rook positioned on an opened file ? (Y or N)	<input type="checkbox"/>	<input type="checkbox"/>	16
Does either side have a rook on file d or file e ? (Y or N)	<input type="checkbox"/>	<input type="checkbox"/>	17
What moves would you recommend for WHITE from this position? (List 1 or 2 possible moves.) For Question 20, write the best reply you see for the move you listed on line 18.	_____		18
	_____		19
	_____		20

Twenty Questions


Problem 41

Copyright © 1998-2003

Photocopying this form for instructional use is permitted.

NAME: _____

DATE: _____



Black just played Nc6.

To reach POSITION 41, start from the diagram above and picture the move 1) d4.

Focus on this imagined position while answering the 20 questions:

	White	Black	
How many times is each side attacking the four central squares : d4, d5, e4, and e5? **	attacks on d4 : <input type="checkbox"/>	<input type="checkbox"/>	1
	attacks on d5 : <input type="checkbox"/>	<input type="checkbox"/>	2
	attacks on e4 : <input type="checkbox"/>	<input type="checkbox"/>	3
	attacks on e5 : <input type="checkbox"/>	<input type="checkbox"/>	4
Has either side castled ? Write: C if already castled P if prepared to castle on next move T if temporarily unable to castle X if permanently not allowed to castle	<input type="checkbox"/>	<input type="checkbox"/>	5
In how many ways could each side make a capture on its next move?	<input type="checkbox"/>	<input type="checkbox"/>	6

	White	Black	
In how many ways could each side give check on its next move?	<input type="checkbox"/>	<input type="checkbox"/>	7
How many men from each side have more attackers than they have defenders ? **	<input type="checkbox"/>	<input type="checkbox"/>	8
Who has more material on the board? Write: + if the side is ahead in material - if the side is behind in material = if the side is equal in material	<input type="checkbox"/>	<input type="checkbox"/>	9
How active are the minor pieces of each side? Write: H if still on Home Square C if Captured P if Pinned D if Developed	King-side <input type="checkbox"/>	<input type="checkbox"/>	10
	King-side <input type="checkbox"/>	<input type="checkbox"/>	11
	Queen-side <input type="checkbox"/>	<input type="checkbox"/>	12
	Queen-side <input type="checkbox"/>	<input type="checkbox"/>	13
Does either side have any pawns which are isolated ? (Y or N)	<input type="checkbox"/>	<input type="checkbox"/>	14
Does either side have any pawns which are doubled ? (Y or N)	<input type="checkbox"/>	<input type="checkbox"/>	15
Does either side have a rook positioned on an opened file ? (Y or N)	<input type="checkbox"/>	<input type="checkbox"/>	16
Does either side have a rook on file d or file e ? (Y or N)	<input type="checkbox"/>	<input type="checkbox"/>	17
What moves do you suggest for BLACK from the imagined position? <i>(List 1 or 2 possible moves.)</i> <i>For Question 20, write the best reply you see for the move you listed on line 18.</i>	_____	_____	18
	_____	_____	19
	_____	_____	20

Twenty Questions


Problem 42

NAME: _____

DATE: _____

Copyright © 1998-2003

Photocopying this form for instructional use is permitted.



Black just played Nge7.

To reach POSITION 42, start from the diagram above and picture the move 1) Nd5.

Focus on this imagined position while answering the 20 questions:

	White	Black	
How many times is each side attacking the four central squares : d4, d5, e4, and e5? **	attacks on d4 : <input type="checkbox"/>	<input type="checkbox"/>	1
	attacks on d5 : <input type="checkbox"/>	<input type="checkbox"/>	2
	attacks on e4 : <input type="checkbox"/>	<input type="checkbox"/>	3
	attacks on e5 : <input type="checkbox"/>	<input type="checkbox"/>	4
Has either side castled ? Write: C if already castled P if prepared to castle on next move T if temporarily unable to castle X if permanently not allowed to castle	<input type="checkbox"/>	<input type="checkbox"/>	5
In how many ways could each side make a capture on its next move?	<input type="checkbox"/>	<input type="checkbox"/>	6

	White	Black	
In how many ways could each side give check on its next move?	<input type="checkbox"/>	<input type="checkbox"/>	7
How many men from each side have more attackers than they have defenders ? **	<input type="checkbox"/>	<input type="checkbox"/>	8
Who has more material on the board? Write: + if the side is ahead in material - if the side is behind in material = if the side is equal in material	<input type="checkbox"/>	<input type="checkbox"/>	9
How active are the minor pieces of each side? Write: H if still on Home Square C if Captured P if Pinned D if Developed	King-side <input type="checkbox"/>	<input type="checkbox"/>	10
	King-side <input type="checkbox"/>	<input type="checkbox"/>	11
	Queen-side <input type="checkbox"/>	<input type="checkbox"/>	12
	Queen-side <input type="checkbox"/>	<input type="checkbox"/>	13
Does either side have any pawns which are isolated ? (Y or N)	<input type="checkbox"/>	<input type="checkbox"/>	14
Does either side have any pawns which are doubled ? (Y or N)	<input type="checkbox"/>	<input type="checkbox"/>	15
Does either side have a rook positioned on an opened file ? (Y or N)	<input type="checkbox"/>	<input type="checkbox"/>	16
Does either side have a rook on file d or file e ? (Y or N)	<input type="checkbox"/>	<input type="checkbox"/>	17
What moves do you suggest for BLACK from the imagined position? (List 1 or 2 possible moves.) For Question 20, write the best reply you see for the move you listed on line 18.	_____	_____	18
	_____	_____	19
	_____	_____	20

Twenty Questions


Problem 43

Copyright © 1998-2003

Photocopying this form for instructional use is permitted.

NAME: _____

DATE: _____



White just played **Nxc6**.

To reach **POSITION 43**, start from the diagram above and picture the move 1) ... **Qd5**.

Focus on this imagined position while answering the 20 questions:

	White	Black	
How many times is each side attacking the four central squares : d4, d5, e4, and e5? **	attacks on d4 : <input type="checkbox"/>	<input type="checkbox"/>	1
	attacks on d5 : <input type="checkbox"/>	<input type="checkbox"/>	2
	attacks on e4 : <input type="checkbox"/>	<input type="checkbox"/>	3
	attacks on e5 : <input type="checkbox"/>	<input type="checkbox"/>	4
Has either side castled ? Write: C if already castled P if prepared to castle on next move T if temporarily unable to castle X if permanently not allowed to castle	<input type="checkbox"/>	<input type="checkbox"/>	5
In how many ways could each side make a capture on its next move?	<input type="checkbox"/>	<input type="checkbox"/>	6

In how many ways could each side **give check** on its next move?

White	Black	
<input type="checkbox"/>	<input type="checkbox"/>	7

How many men from each side have **more attackers than they have defenders**? **

<input type="checkbox"/>	<input type="checkbox"/>	8
--------------------------	--------------------------	---

Who has more material on the board?

Write: + if the side is ahead in material
 - if the side is behind in material
 = if the side is equal in material

<input type="checkbox"/>	<input type="checkbox"/>	9
--------------------------	--------------------------	---

How active are the minor pieces of each side?

Write: **H** if still on *Home Square*
C if *Captured*
P if *Pinned*
D if *Developed*

King-side	<input type="checkbox"/>	<input type="checkbox"/>	10
King-side	<input type="checkbox"/>	<input type="checkbox"/>	11
Queen-side	<input type="checkbox"/>	<input type="checkbox"/>	12
Queen-side	<input type="checkbox"/>	<input type="checkbox"/>	13

Does either side have any pawns which are **isolated**? (Y or N)

<input type="checkbox"/>	<input type="checkbox"/>	14
--------------------------	--------------------------	----

Does either side have any pawns which are **doubled**? (Y or N)

<input type="checkbox"/>	<input type="checkbox"/>	15
--------------------------	--------------------------	----

Does either side have a **rook positioned on an opened file**? (Y or N)

<input type="checkbox"/>	<input type="checkbox"/>	16
--------------------------	--------------------------	----

Does either side have a **rook on file d or file e**? (Y or N)

<input type="checkbox"/>	<input type="checkbox"/>	17
--------------------------	--------------------------	----

What **moves do you suggest for WHITE** from the imagined position?

_____	18
_____	19

(List 1 or 2 possible moves.)
 For Question 20, write the best reply you see for the move you listed on line 18.

_____	20
-------	----

Twenty Questions


Problem 44

Copyright © 1998-2003

Photocopying this form for instructional use is permitted.

NAME: _____

DATE: _____



White just played h3.

To reach **POSITION 44**, start from the diagram above and picture the move 1) ... **Na5**.

Focus on this imagined position while answering the 20 questions:

	White	Black	
How many times is each side attacking the four central squares : d4, d5, e4, and e5? **	attacks on d4 : <input type="checkbox"/>	<input type="checkbox"/>	1
	attacks on d5 : <input type="checkbox"/>	<input type="checkbox"/>	2
	attacks on e4 : <input type="checkbox"/>	<input type="checkbox"/>	3
	attacks on e5 : <input type="checkbox"/>	<input type="checkbox"/>	4
Has either side castled ? Write: C if already castled P if prepared to castle on next move T if temporarily unable to castle X if permanently not allowed to castle	<input type="checkbox"/>	<input type="checkbox"/>	5
In how many ways could each side make a capture on its next move?	<input type="checkbox"/>	<input type="checkbox"/>	6

In how many ways could each side **give check** on its next move?

White	Black	
<input type="checkbox"/>	<input type="checkbox"/>	7

How many men from each side have **more attackers than they have defenders**? **

<input type="checkbox"/>	<input type="checkbox"/>	8
--------------------------	--------------------------	---





Who has more material on the board?

Write: + if the side is ahead in material
 - if the side is behind in material
 = if the side is equal in material

<input type="checkbox"/>	<input type="checkbox"/>	9
--------------------------	--------------------------	---

How active are the minor pieces of each side?

Write: **H** if still on *Home Square*
C if *Captured*
P if *Pinned*
D if *Developed*

King-side 	<input type="checkbox"/>	<input type="checkbox"/>	10
King-side 	<input type="checkbox"/>	<input type="checkbox"/>	11
Queen-side 	<input type="checkbox"/>	<input type="checkbox"/>	12
Queen-side 	<input type="checkbox"/>	<input type="checkbox"/>	13

Does either side have any pawns which are **isolated**? (Y or N)

<input type="checkbox"/>	<input type="checkbox"/>	14
--------------------------	--------------------------	----

Does either side have any pawns which are **doubled**? (Y or N)

<input type="checkbox"/>	<input type="checkbox"/>	15
--------------------------	--------------------------	----

Does either side have a **rook positioned on an opened file**? (Y or N)

<input type="checkbox"/>	<input type="checkbox"/>	16
--------------------------	--------------------------	----

Does either side have a **rook on file d or file e**? (Y or N)

<input type="checkbox"/>	<input type="checkbox"/>	17
--------------------------	--------------------------	----

What **moves do you suggest for WHITE** from the imagined position?

_____ 18

_____ 19

(List 1 or 2 possible moves.)
 For Question 20, write the best reply you see for the move you listed on line 18.

_____ 20

Twenty Questions


Problem 45

NAME: _____

DATE: _____

Copyright © 1998-2003

Photocopying this form for instructional use is permitted.



Black just played e6.

To reach POSITION 45, start from the diagram above and picture the move 1) f4.

Focus on this imagined position while answering the 20 questions:

	White	Black	
How many times is each side attacking the four central squares : d4, d5, e4, and e5? **	attacks on d4 : <input type="checkbox"/>	<input type="checkbox"/>	1
	attacks on d5 : <input type="checkbox"/>	<input type="checkbox"/>	2
	attacks on e4 : <input type="checkbox"/>	<input type="checkbox"/>	3
	attacks on e5 : <input type="checkbox"/>	<input type="checkbox"/>	4
Has either side castled ? Write: C if already castled P if prepared to castle on next move T if temporarily unable to castle X if permanently not allowed to castle	<input type="checkbox"/>	<input type="checkbox"/>	5
In how many ways could each side make a capture on its next move?	<input type="checkbox"/>	<input type="checkbox"/>	6

	White	Black	
In how many ways could each side give check on its next move?	<input type="checkbox"/>	<input type="checkbox"/>	7
How many men from each side have more attackers than they have defenders ? **	<input type="checkbox"/>	<input type="checkbox"/>	8
Who has more material on the board? Write: + if the side is ahead in material - if the side is behind in material = if the side is equal in material	<input type="checkbox"/>	<input type="checkbox"/>	9
How active are the minor pieces of each side? Write: H if still on Home Square C if Captured P if Pinned D if Developed	King-side <input type="checkbox"/>	<input type="checkbox"/>	10
	King-side <input type="checkbox"/>	<input type="checkbox"/>	11
	Queen-side <input type="checkbox"/>	<input type="checkbox"/>	12
	Queen-side <input type="checkbox"/>	<input type="checkbox"/>	13
Does either side have any pawns which are isolated ? (Y or N)	<input type="checkbox"/>	<input type="checkbox"/>	14
Does either side have any pawns which are doubled ? (Y or N)	<input type="checkbox"/>	<input type="checkbox"/>	15
Does either side have a rook positioned on an opened file ? (Y or N)	<input type="checkbox"/>	<input type="checkbox"/>	16
Does either side have a rook on file d or file e ? (Y or N)	<input type="checkbox"/>	<input type="checkbox"/>	17
What moves do you suggest for BLACK from the imagined position? (List 1 or 2 possible moves.) For Question 20, write the best reply you see for the move you listed on line 18.	_____	_____	18
	_____	_____	19
	_____	_____	20

Twenty Questions


Problem 46

Copyright © 1998-2003

Photocopying this form for instructional use is permitted.

NAME: _____

DATE: _____



White just played **Be2**.

To reach **POSITION 46**, start from the diagram above and picture the move 1) ... **cxd4**.

Focus on this imagined position while answering the 20 questions:

	White	Black	
How many times is each side attacking the four central squares : d4, d5, e4, and e5? **	attacks on d4 : <input type="checkbox"/>	<input type="checkbox"/>	1
	attacks on d5 : <input type="checkbox"/>	<input type="checkbox"/>	2
	attacks on e4 : <input type="checkbox"/>	<input type="checkbox"/>	3
	attacks on e5 : <input type="checkbox"/>	<input type="checkbox"/>	4
Has either side castled ? Write: C if already castled P if prepared to castle on next move T if temporarily unable to castle X if permanently not allowed to castle	<input type="checkbox"/>	<input type="checkbox"/>	5
In how many ways could each side make a capture on its next move?	<input type="checkbox"/>	<input type="checkbox"/>	6

	White	Black	
In how many ways could each side give check on its next move?	<input type="checkbox"/>	<input type="checkbox"/>	7
How many men from each side have more attackers than they have defenders ? **	<input type="checkbox"/>	<input type="checkbox"/>	8
Who has more material on the board? Write: + if the side is ahead in material - if the side is behind in material = if the side is equal in material	<input type="checkbox"/>	<input type="checkbox"/>	9
How active are the minor pieces of each side? Write: H if still on Home Square C if Captured P if Pinned D if Developed	King-side <input type="checkbox"/>	<input type="checkbox"/>	10
	King-side <input type="checkbox"/>	<input type="checkbox"/>	11
	Queen-side <input type="checkbox"/>	<input type="checkbox"/>	12
	Queen-side <input type="checkbox"/>	<input type="checkbox"/>	13
Does either side have any pawns which are isolated ? (Y or N)	<input type="checkbox"/>	<input type="checkbox"/>	14
Does either side have any pawns which are doubled ? (Y or N)	<input type="checkbox"/>	<input type="checkbox"/>	15
Does either side have a rook positioned on an opened file ? (Y or N)	<input type="checkbox"/>	<input type="checkbox"/>	16
Does either side have a rook on file d or file e ? (Y or N)	<input type="checkbox"/>	<input type="checkbox"/>	17
What moves do you suggest for WHITE from the imagined position? (List 1 or 2 possible moves.) For Question 20, write the best reply you see for the move you listed on line 18.	_____	_____	18
	_____	_____	19
	_____	_____	20

Twenty Questions


Problem 47

NAME: _____

DATE: _____

Copyright © 1998-2003

Photocopying this form for instructional use is permitted.



Black just played **Bxc3+**.

To reach **POSITION 47**, start from the diagram above and picture the move 1) **Qxc3**.

Focus on this imagined position while answering the 20 questions:

	White	Black	
How many times is each side attacking the four central squares : d4, d5, e4, and e5? **	attacks on d4 : <input type="checkbox"/>	<input type="checkbox"/>	1
	attacks on d5 : <input type="checkbox"/>	<input type="checkbox"/>	2
	attacks on e4 : <input type="checkbox"/>	<input type="checkbox"/>	3
	attacks on e5 : <input type="checkbox"/>	<input type="checkbox"/>	4
Has either side castled ? Write: C if already castled P if prepared to castle on next move T if temporarily unable to castle X if permanently not allowed to castle	<input type="checkbox"/>	<input type="checkbox"/>	5
In how many ways could each side make a capture on its next move?	<input type="checkbox"/>	<input type="checkbox"/>	6

	White	Black	
In how many ways could each side give check on its next move?	<input type="checkbox"/>	<input type="checkbox"/>	7
How many men from each side have more attackers than they have defenders ? **	<input type="checkbox"/>	<input type="checkbox"/>	8
Who has more material on the board? Write: + if the side is ahead in material - if the side is behind in material = if the side is equal in material	<input type="checkbox"/>	<input type="checkbox"/>	9
How active are the minor pieces of each side? Write: H if still on Home Square C if Captured P if Pinned D if Developed	King-side <input type="checkbox"/>	<input type="checkbox"/>	10
	King-side <input type="checkbox"/>	<input type="checkbox"/>	11
	Queen-side <input type="checkbox"/>	<input type="checkbox"/>	12
	Queen-side <input type="checkbox"/>	<input type="checkbox"/>	13
Does either side have any pawns which are isolated ? (Y or N)	<input type="checkbox"/>	<input type="checkbox"/>	14
Does either side have any pawns which are doubled ? (Y or N)	<input type="checkbox"/>	<input type="checkbox"/>	15
Does either side have a rook positioned on an opened file ? (Y or N)	<input type="checkbox"/>	<input type="checkbox"/>	16
Does either side have a rook on file d or file e ? (Y or N)	<input type="checkbox"/>	<input type="checkbox"/>	17
What moves do you suggest for BLACK from the imagined position? <i>(List 1 or 2 possible moves.)</i> <i>For Question 20, write the best reply you see for the move you listed on line 18.</i>	_____	_____	18
	_____	_____	19
	_____	_____	20

Twenty Questions


Problem 48

Copyright © 1998-2003

Photocopying this form for instructional use is permitted.

NAME: _____

DATE: _____



Black just played c5.

To reach POSITION 48, start from the diagram above and picture the move 1) 0-0.

Focus on this imagined position while answering the 20 questions:

	White	Black	
How many times is each side attacking the four central squares : d4, d5, e4, and e5? **	attacks on d4 : <input type="checkbox"/>	<input type="checkbox"/>	1
	attacks on d5 : <input type="checkbox"/>	<input type="checkbox"/>	2
	attacks on e4 : <input type="checkbox"/>	<input type="checkbox"/>	3
	attacks on e5 : <input type="checkbox"/>	<input type="checkbox"/>	4
Has either side castled ? Write: C if already castled P if prepared to castle on next move T if temporarily unable to castle X if permanently not allowed to castle	<input type="checkbox"/>	<input type="checkbox"/>	5
In how many ways could each side make a capture on its next move?	<input type="checkbox"/>	<input type="checkbox"/>	6

	White	Black	
In how many ways could each side give check on its next move?	<input type="checkbox"/>	<input type="checkbox"/>	7
How many men from each side have more attackers than they have defenders ? **	<input type="checkbox"/>	<input type="checkbox"/>	8
Who has more material on the board? Write: + if the side is ahead in material - if the side is behind in material = if the side is equal in material	<input type="checkbox"/>	<input type="checkbox"/>	9
How active are the minor pieces of each side? Write: H if still on Home Square C if Captured P if Pinned D if Developed	King-side <input type="checkbox"/>	<input type="checkbox"/>	10
	King-side <input type="checkbox"/>	<input type="checkbox"/>	11
	Queen-side <input type="checkbox"/>	<input type="checkbox"/>	12
	Queen-side <input type="checkbox"/>	<input type="checkbox"/>	13
Does either side have any pawns which are isolated ? (Y or N)	<input type="checkbox"/>	<input type="checkbox"/>	14
Does either side have any pawns which are doubled ? (Y or N)	<input type="checkbox"/>	<input type="checkbox"/>	15
Does either side have a rook positioned on an opened file ? (Y or N)	<input type="checkbox"/>	<input type="checkbox"/>	16
Does either side have a rook on file d or file e ? (Y or N)	<input type="checkbox"/>	<input type="checkbox"/>	17
What moves do you suggest for BLACK from the imagined position? (List 1 or 2 possible moves.) For Question 20, write the best reply you see for the move you listed on line 18.	_____	_____	18
	_____	_____	19
	_____	_____	20

Twenty Questions


Problem 49

NAME: _____

DATE: _____

Copyright © 1998-2003

Photocopying this form for instructional use is permitted.



Black just played Re8.

To reach POSITION 49, start from the diagram above and picture the move 1) **Bb2**.

Focus on this imagined position while answering the 20 questions:

	White	Black	
How many times is each side attacking the four central squares : d4, d5, e4, and e5? **	attacks on d4 : <input type="checkbox"/>	<input type="checkbox"/>	1
	attacks on d5 : <input type="checkbox"/>	<input type="checkbox"/>	2
	attacks on e4 : <input type="checkbox"/>	<input type="checkbox"/>	3
	attacks on e5 : <input type="checkbox"/>	<input type="checkbox"/>	4
Has either side castled ? Write: C if already castled P if prepared to castle on next move T if temporarily unable to castle X if permanently not allowed to castle	<input type="checkbox"/>	<input type="checkbox"/>	5
In how many ways could each side make a capture on its next move?	<input type="checkbox"/>	<input type="checkbox"/>	6

	White	Black	
In how many ways could each side give check on its next move?	<input type="checkbox"/>	<input type="checkbox"/>	7
How many men from each side have more attackers than they have defenders ? **	<input type="checkbox"/>	<input type="checkbox"/>	8
Who has more material on the board? Write: + if the side is ahead in material - if the side is behind in material = if the side is equal in material	<input type="checkbox"/>	<input type="checkbox"/>	9
How active are the minor pieces of each side? Write: H if still on Home Square C if Captured P if Pinned D if Developed	King-side <input type="checkbox"/>	<input type="checkbox"/>	10
	King-side <input type="checkbox"/>	<input type="checkbox"/>	11
	Queen-side <input type="checkbox"/>	<input type="checkbox"/>	12
	Queen-side <input type="checkbox"/>	<input type="checkbox"/>	13
Does either side have any pawns which are isolated ? (Y or N)	<input type="checkbox"/>	<input type="checkbox"/>	14
Does either side have any pawns which are doubled ? (Y or N)	<input type="checkbox"/>	<input type="checkbox"/>	15
Does either side have a rook positioned on an opened file ? (Y or N)	<input type="checkbox"/>	<input type="checkbox"/>	16
Does either side have a rook on file d or file e ? (Y or N)	<input type="checkbox"/>	<input type="checkbox"/>	17
What moves do you suggest for BLACK from the imagined position? (List 1 or 2 possible moves.) For Question 20, write the best reply you see for the move you listed on line 18.	_____	_____	18
	_____	_____	19
	_____	_____	20

Twenty Questions


Problem 50

NAME: _____

DATE: _____

Copyright © 1998-2003

Photocopying this form for instructional use is permitted.



White just played **Bxf6**.

To reach **POSITION 50**, start from the diagram above and picture the move 1) ... **gxf6**.

Focus on this imagined position while answering the 20 questions:

	White	Black	
How many times is each side attacking the four central squares : d4, d5, e4, and e5? **	attacks on d4 : <input type="checkbox"/>	<input type="checkbox"/>	1
	attacks on d5 : <input type="checkbox"/>	<input type="checkbox"/>	2
	attacks on e4 : <input type="checkbox"/>	<input type="checkbox"/>	3
	attacks on e5 : <input type="checkbox"/>	<input type="checkbox"/>	4
Has either side castled ? Write: C if already castled P if prepared to castle on next move T if temporarily unable to castle X if permanently not allowed to castle	<input type="checkbox"/>	<input type="checkbox"/>	5
In how many ways could each side make a capture on its next move?	<input type="checkbox"/>	<input type="checkbox"/>	6

	White	Black	
In how many ways could each side give check on its next move?	<input type="checkbox"/>	<input type="checkbox"/>	7
How many men from each side have more attackers than they have defenders ? **	<input type="checkbox"/>	<input type="checkbox"/>	8
Who has more material on the board? Write: + if the side is ahead in material - if the side is behind in material = if the side is equal in material	<input type="checkbox"/>	<input type="checkbox"/>	9
How active are the minor pieces of each side? Write: H if still on Home Square C if Captured P if Pinned D if Developed	King-side <input type="checkbox"/>	<input type="checkbox"/>	10
	King-side <input type="checkbox"/>	<input type="checkbox"/>	11
	Queen-side <input type="checkbox"/>	<input type="checkbox"/>	12
	Queen-side <input type="checkbox"/>	<input type="checkbox"/>	13
Does either side have any pawns which are isolated ? (Y or N)	<input type="checkbox"/>	<input type="checkbox"/>	14
Does either side have any pawns which are doubled ? (Y or N)	<input type="checkbox"/>	<input type="checkbox"/>	15
Does either side have a rook positioned on an opened file ? (Y or N)	<input type="checkbox"/>	<input type="checkbox"/>	16
Does either side have a rook on file d or file e ? (Y or N)	<input type="checkbox"/>	<input type="checkbox"/>	17
What moves do you suggest for WHITE from the imagined position? (List 1 or 2 possible moves.) For Question 20, write the best reply you see for the move you listed on line 18.	_____	_____	18
	_____	_____	19
	_____	_____	20

Twenty Questions


Problem 51

NAME: _____

DATE: _____

Copyright © 1998-2003

Photocopying this form for instructional use is permitted.



White just played Bb5.

To reach POSITION 51, start from the diagram above and picture the move 1) ... f5.

Focus on this imagined position while answering the 20 questions:

	White	Black	
How many times is each side attacking the four central squares : d4, d5, e4, and e5? **	attacks on d4 : <input type="checkbox"/>	<input type="checkbox"/>	1
	attacks on d5 : <input type="checkbox"/>	<input type="checkbox"/>	2
	attacks on e4 : <input type="checkbox"/>	<input type="checkbox"/>	3
	attacks on e5 : <input type="checkbox"/>	<input type="checkbox"/>	4
Has either side castled ? Write: C if already castled P if prepared to castle on next move T if temporarily unable to castle X if permanently not allowed to castle	<input type="checkbox"/>	<input type="checkbox"/>	5
In how many ways could each side make a capture on its next move?	<input type="checkbox"/>	<input type="checkbox"/>	6

	White	Black	
In how many ways could each side give check on its next move?	<input type="checkbox"/>	<input type="checkbox"/>	7
How many men from each side have more attackers than they have defenders ? **	<input type="checkbox"/>	<input type="checkbox"/>	8
Who has more material on the board? Write: + if the side is ahead in material - if the side is behind in material = if the side is equal in material	<input type="checkbox"/>	<input type="checkbox"/>	9
How active are the minor pieces of each side? Write: H if still on Home Square C if Captured P if Pinned D if Developed	King-side <input type="checkbox"/>	<input type="checkbox"/>	10
	King-side <input type="checkbox"/>	<input type="checkbox"/>	11
	Queen-side <input type="checkbox"/>	<input type="checkbox"/>	12
	Queen-side <input type="checkbox"/>	<input type="checkbox"/>	13
Does either side have any pawns which are isolated ? (Y or N)	<input type="checkbox"/>	<input type="checkbox"/>	14
Does either side have any pawns which are doubled ? (Y or N)	<input type="checkbox"/>	<input type="checkbox"/>	15
Does either side have a rook positioned on an opened file ? (Y or N)	<input type="checkbox"/>	<input type="checkbox"/>	16
Does either side have a rook on file d or file e ? (Y or N)	<input type="checkbox"/>	<input type="checkbox"/>	17
What moves do you suggest for WHITE from the imagined position? <i>(List 1 or 2 possible moves.)</i> <i>For Question 20, write the best reply you see for the move you listed on line 18.</i>	_____		18
	_____		19
	_____		20

Twenty Questions


Problem 52

NAME: _____

DATE: _____

Copyright © 1998-2003

Photocopying this form for instructional use is permitted.



White just played Re1.

To reach POSITION 52, start from the diagram above and picture the move 1) ... b5.

Focus on this imagined position while answering the 20 questions:

	White	Black	
How many times is each side attacking the four central squares : d4, d5, e4, and e5? **	attacks on d4 : <input type="checkbox"/>	<input type="checkbox"/>	1
	attacks on d5 : <input type="checkbox"/>	<input type="checkbox"/>	2
	attacks on e4 : <input type="checkbox"/>	<input type="checkbox"/>	3
	attacks on e5 : <input type="checkbox"/>	<input type="checkbox"/>	4
Has either side castled ? Write: C if already castled P if prepared to castle on next move T if temporarily unable to castle X if permanently not allowed to castle	<input type="checkbox"/>	<input type="checkbox"/>	5
In how many ways could each side make a capture on its next move?	<input type="checkbox"/>	<input type="checkbox"/>	6

	White	Black	
In how many ways could each side give check on its next move?	<input type="checkbox"/>	<input type="checkbox"/>	7
How many men from each side have more attackers than they have defenders ? **	<input type="checkbox"/>	<input type="checkbox"/>	8
Who has more material on the board? Write: + if the side is ahead in material - if the side is behind in material = if the side is equal in material	<input type="checkbox"/>	<input type="checkbox"/>	9
How active are the minor pieces of each side? Write: H if still on Home Square C if Captured P if Pinned D if Developed	King-side <input type="checkbox"/>	<input type="checkbox"/>	10
	King-side <input type="checkbox"/>	<input type="checkbox"/>	11
	Queen-side <input type="checkbox"/>	<input type="checkbox"/>	12
	Queen-side <input type="checkbox"/>	<input type="checkbox"/>	13
Does either side have any pawns which are isolated ? (Y or N)	<input type="checkbox"/>	<input type="checkbox"/>	14
Does either side have any pawns which are doubled ? (Y or N)	<input type="checkbox"/>	<input type="checkbox"/>	15
Does either side have a rook positioned on an opened file ? (Y or N)	<input type="checkbox"/>	<input type="checkbox"/>	16
Does either side have a rook on file d or file e ? (Y or N)	<input type="checkbox"/>	<input type="checkbox"/>	17
What moves do you suggest for WHITE from the imagined position? (List 1 or 2 possible moves.) For Question 20, write the best reply you see for the move you listed on line 18.	_____	_____	18
	_____	_____	19
	_____	_____	20

Twenty Questions


Problem 53

NAME: _____

DATE: _____

Copyright © 1998-2003

Photocopying this form for instructional use is permitted.



Black just played fxe6.

To reach POSITION 53, start from the diagram above and picture the move 1) Nxe6.

Focus on this imagined position while answering the 20 questions:

	White	Black	
How many times is each side attacking the four central squares : d4, d5, e4, and e5? **	attacks on d4 : <input type="checkbox"/>	<input type="checkbox"/>	1
	attacks on d5 : <input type="checkbox"/>	<input type="checkbox"/>	2
	attacks on e4 : <input type="checkbox"/>	<input type="checkbox"/>	3
	attacks on e5 : <input type="checkbox"/>	<input type="checkbox"/>	4
Has either side castled ? Write: C if already castled P if prepared to castle on next move T if temporarily unable to castle X if permanently not allowed to castle	<input type="checkbox"/>	<input type="checkbox"/>	5
In how many ways could each side make a capture on its next move?	<input type="checkbox"/>	<input type="checkbox"/>	6

	White	Black	
In how many ways could each side give check on its next move?	<input type="checkbox"/>	<input type="checkbox"/>	7
How many men from each side have more attackers than they have defenders ? **	<input type="checkbox"/>	<input type="checkbox"/>	8
Who has more material on the board? Write: + if the side is ahead in material - if the side is behind in material = if the side is equal in material	<input type="checkbox"/>	<input type="checkbox"/>	9
How active are the minor pieces of each side? Write: H if still on Home Square C if Captured P if Pinned D if Developed	King-side <input type="checkbox"/>	<input type="checkbox"/>	10
	King-side <input type="checkbox"/>	<input type="checkbox"/>	11
	Queen-side <input type="checkbox"/>	<input type="checkbox"/>	12
	Queen-side <input type="checkbox"/>	<input type="checkbox"/>	13
Does either side have any pawns which are isolated ? (Y or N)	<input type="checkbox"/>	<input type="checkbox"/>	14
Does either side have any pawns which are doubled ? (Y or N)	<input type="checkbox"/>	<input type="checkbox"/>	15
Does either side have a rook positioned on an opened file ? (Y or N)	<input type="checkbox"/>	<input type="checkbox"/>	16
Does either side have a rook on file d or file e ? (Y or N)	<input type="checkbox"/>	<input type="checkbox"/>	17
What moves do you suggest for BLACK from the imagined position? (List 1 or 2 possible moves.) For Question 20, write the best reply you see for the move you listed on line 18.	_____	_____	18
	_____	_____	19
	_____	_____	20

Twenty Questions


Problem 54

Copyright © 1998-2003

Photocopying this form for instructional use is permitted.

NAME: _____

DATE: _____



Black just played c5.

To reach POSITION 54, start from the diagram above and picture the move 1) c3.

Focus on this imagined position while answering the 20 questions:

	White	Black	
How many times is each side attacking the four central squares : d4, d5, e4, and e5? **	attacks on d4 : <input type="checkbox"/>	<input type="checkbox"/>	1
	attacks on d5 : <input type="checkbox"/>	<input type="checkbox"/>	2
	attacks on e4 : <input type="checkbox"/>	<input type="checkbox"/>	3
	attacks on e5 : <input type="checkbox"/>	<input type="checkbox"/>	4
Has either side castled ? Write: C if already castled P if prepared to castle on next move T if temporarily unable to castle X if permanently not allowed to castle	<input type="checkbox"/>	<input type="checkbox"/>	5
In how many ways could each side make a capture on its next move?	<input type="checkbox"/>	<input type="checkbox"/>	6

	White	Black	
In how many ways could each side give check on its next move?	<input type="checkbox"/>	<input type="checkbox"/>	7
How many men from each side have more attackers than they have defenders ? **	<input type="checkbox"/>	<input type="checkbox"/>	8
Who has more material on the board? Write: + if the side is ahead in material - if the side is behind in material = if the side is equal in material	<input type="checkbox"/>	<input type="checkbox"/>	9
How active are the minor pieces of each side? Write: H if still on Home Square C if Captured P if Pinned D if Developed	King-side <input type="checkbox"/>	<input type="checkbox"/>	10
	King-side <input type="checkbox"/>	<input type="checkbox"/>	11
	Queen-side <input type="checkbox"/>	<input type="checkbox"/>	12
	Queen-side <input type="checkbox"/>	<input type="checkbox"/>	13
Does either side have any pawns which are isolated ? (Y or N)	<input type="checkbox"/>	<input type="checkbox"/>	14
Does either side have any pawns which are doubled ? (Y or N)	<input type="checkbox"/>	<input type="checkbox"/>	15
Does either side have a rook positioned on an opened file ? (Y or N)	<input type="checkbox"/>	<input type="checkbox"/>	16
Does either side have a rook on file d or file e ? (Y or N)	<input type="checkbox"/>	<input type="checkbox"/>	17
What moves do you suggest for BLACK from the imagined position? (List 1 or 2 possible moves.) For Question 20, write the best reply you see for the move you listed on line 18.	_____	_____	18
	_____	_____	19
	_____	_____	20

Twenty Questions


Problem 55

NAME: _____

DATE: _____

Copyright © 1998-2003

Photocopying this form for instructional use is permitted.



Black just played Nbd7.

To reach POSITION 55, start from the diagram above and picture the move 1) **Bb2**.

Focus on this imagined position while answering the 20 questions:

	White	Black	
How many times is each side attacking the four central squares : d4, d5, e4, and e5? **	attacks on d4 : <input type="checkbox"/>	<input type="checkbox"/>	1
	attacks on d5 : <input type="checkbox"/>	<input type="checkbox"/>	2
	attacks on e4 : <input type="checkbox"/>	<input type="checkbox"/>	3
	attacks on e5 : <input type="checkbox"/>	<input type="checkbox"/>	4
Has either side castled ? Write: C if already castled P if prepared to castle on next move T if temporarily unable to castle X if permanently not allowed to castle	<input type="checkbox"/>	<input type="checkbox"/>	5
In how many ways could each side make a capture on its next move?	<input type="checkbox"/>	<input type="checkbox"/>	6

	White	Black	
In how many ways could each side give check on its next move?	<input type="checkbox"/>	<input type="checkbox"/>	7
How many men from each side have more attackers than they have defenders ? **	<input type="checkbox"/>	<input type="checkbox"/>	8
Who has more material on the board? Write: + if the side is ahead in material - if the side is behind in material = if the side is equal in material	<input type="checkbox"/>	<input type="checkbox"/>	9
How active are the minor pieces of each side? Write: H if still on Home Square C if Captured P if Pinned D if Developed	King-side <input type="checkbox"/>	<input type="checkbox"/>	10
	King-side <input type="checkbox"/>	<input type="checkbox"/>	11
	Queen-side <input type="checkbox"/>	<input type="checkbox"/>	12
	Queen-side <input type="checkbox"/>	<input type="checkbox"/>	13
Does either side have any pawns which are isolated ? (Y or N)	<input type="checkbox"/>	<input type="checkbox"/>	14
Does either side have any pawns which are doubled ? (Y or N)	<input type="checkbox"/>	<input type="checkbox"/>	15
Does either side have a rook positioned on an opened file ? (Y or N)	<input type="checkbox"/>	<input type="checkbox"/>	16
Does either side have a rook on file d or file e ? (Y or N)	<input type="checkbox"/>	<input type="checkbox"/>	17
What moves do you suggest for BLACK from the imagined position? <i>(List 1 or 2 possible moves.)</i> <i>For Question 20, write the best reply you see for the move you listed on line 18.</i>	_____	_____	18
	_____	_____	19
	_____	_____	20

Twenty Questions


Problem 56

Copyright © 1998-2003

Photocopying this form for instructional use is permitted.

NAME: _____

DATE: _____



Black just played **cxd4**.

To reach POSITION 56, start from the diagram above and picture the move 1) **exd4**.

Focus on this imagined position while answering the 20 questions:

	White	Black	
How many times is each side attacking the four central squares : d4, d5, e4, and e5? **	attacks on d4 : <input type="checkbox"/>	<input type="checkbox"/>	1
	attacks on d5 : <input type="checkbox"/>	<input type="checkbox"/>	2
	attacks on e4 : <input type="checkbox"/>	<input type="checkbox"/>	3
	attacks on e5 : <input type="checkbox"/>	<input type="checkbox"/>	4
Has either side castled ? Write: C if already castled P if prepared to castle on next move T if temporarily unable to castle X if permanently not allowed to castle	<input type="checkbox"/>	<input type="checkbox"/>	5
In how many ways could each side make a capture on its next move?	<input type="checkbox"/>	<input type="checkbox"/>	6

	White	Black	
In how many ways could each side give check on its next move?	<input type="checkbox"/>	<input type="checkbox"/>	7
How many men from each side have more attackers than they have defenders ? **	<input type="checkbox"/>	<input type="checkbox"/>	8
Who has more material on the board? Write: + if the side is ahead in material - if the side is behind in material = if the side is equal in material	<input type="checkbox"/>	<input type="checkbox"/>	9
How active are the minor pieces of each side? Write: H if still on Home Square C if Captured P if Pinned D if Developed	King-side <input type="checkbox"/>	<input type="checkbox"/>	10
	King-side <input type="checkbox"/>	<input type="checkbox"/>	11
	Queen-side <input type="checkbox"/>	<input type="checkbox"/>	12
	Queen-side <input type="checkbox"/>	<input type="checkbox"/>	13
Does either side have any pawns which are isolated ? (Y or N)	<input type="checkbox"/>	<input type="checkbox"/>	14
Does either side have any pawns which are doubled ? (Y or N)	<input type="checkbox"/>	<input type="checkbox"/>	15
Does either side have a rook positioned on an opened file ? (Y or N)	<input type="checkbox"/>	<input type="checkbox"/>	16
Does either side have a rook on file d or file e ? (Y or N)	<input type="checkbox"/>	<input type="checkbox"/>	17
What moves do you suggest for BLACK from the imagined position? (List 1 or 2 possible moves.) For Question 20, write the best reply you see for the move you listed on line 18.	_____	_____	18
	_____	_____	19
	_____	_____	20

Twenty Questions


Problem 57

Copyright © 1998-2003

Photocopying this form for instructional use is permitted.

NAME: _____

DATE: _____



Black just played Nf6.

To reach POSITION 57, start from the diagram above and picture the move 1) Nxc6.

Focus on this imagined position while answering the 20 questions:

	White	Black	
How many times is each side attacking the four central squares : d4, d5, e4, and e5? **	attacks on d4 : <input type="checkbox"/>	<input type="checkbox"/>	1
	attacks on d5 : <input type="checkbox"/>	<input type="checkbox"/>	2
	attacks on e4 : <input type="checkbox"/>	<input type="checkbox"/>	3
	attacks on e5 : <input type="checkbox"/>	<input type="checkbox"/>	4
Has either side castled ? Write: C if already castled P if prepared to castle on next move T if temporarily unable to castle X if permanently not allowed to castle	<input type="checkbox"/>	<input type="checkbox"/>	5
In how many ways could each side make a capture on its next move?	<input type="checkbox"/>	<input type="checkbox"/>	6

	White	Black	
In how many ways could each side give check on its next move?	<input type="checkbox"/>	<input type="checkbox"/>	7
How many men from each side have more attackers than they have defenders ? **	<input type="checkbox"/>	<input type="checkbox"/>	8
Who has more material on the board? Write: + if the side is ahead in material - if the side is behind in material = if the side is equal in material	<input type="checkbox"/>	<input type="checkbox"/>	9
How active are the minor pieces of each side? Write: H if still on Home Square C if Captured P if Pinned D if Developed	King-side <input type="checkbox"/>	<input type="checkbox"/>	10
	King-side <input type="checkbox"/>	<input type="checkbox"/>	11
	Queen-side <input type="checkbox"/>	<input type="checkbox"/>	12
	Queen-side <input type="checkbox"/>	<input type="checkbox"/>	13
Does either side have any pawns which are isolated ? (Y or N)	<input type="checkbox"/>	<input type="checkbox"/>	14
Does either side have any pawns which are doubled ? (Y or N)	<input type="checkbox"/>	<input type="checkbox"/>	15
Does either side have a rook positioned on an opened file ? (Y or N)	<input type="checkbox"/>	<input type="checkbox"/>	16
Does either side have a rook on file d or file e ? (Y or N)	<input type="checkbox"/>	<input type="checkbox"/>	17
What moves do you suggest for BLACK from the imagined position? (List 1 or 2 possible moves.) For Question 20, write the best reply you see for the move you listed on line 18.	_____	_____	18
	_____	_____	19
	_____	_____	20

Twenty Questions


Problem 58

Copyright © 1998-2003

Photocopying this form for instructional use is permitted.

NAME: _____

DATE: _____



White just played Qc1.

To reach POSITION 58, start from the diagram above and picture the move 1) ... Ng8.

Focus on this imagined position while answering the 20 questions:

	White	Black	
How many times is each side attacking the four central squares : d4, d5, e4, and e5? **	attacks on d4 : <input type="checkbox"/>	<input type="checkbox"/>	1
	attacks on d5 : <input type="checkbox"/>	<input type="checkbox"/>	2
	attacks on e4 : <input type="checkbox"/>	<input type="checkbox"/>	3
	attacks on e5 : <input type="checkbox"/>	<input type="checkbox"/>	4
Has either side castled ? Write: C if already castled P if prepared to castle on next move T if temporarily unable to castle X if permanently not allowed to castle	<input type="checkbox"/>	<input type="checkbox"/>	5
In how many ways could each side make a capture on its next move?	<input type="checkbox"/>	<input type="checkbox"/>	6

	White	Black	
In how many ways could each side give check on its next move?	<input type="checkbox"/>	<input type="checkbox"/>	7
How many men from each side have more attackers than they have defenders ? **	<input type="checkbox"/>	<input type="checkbox"/>	8
Who has more material on the board? Write: + if the side is ahead in material - if the side is behind in material = if the side is equal in material	<input type="checkbox"/>	<input type="checkbox"/>	9
How active are the minor pieces of each side? Write: H if still on Home Square C if Captured P if Pinned D if Developed	King-side <input type="checkbox"/>	<input type="checkbox"/>	10
	King-side <input type="checkbox"/>	<input type="checkbox"/>	11
	Queen-side <input type="checkbox"/>	<input type="checkbox"/>	12
	Queen-side <input type="checkbox"/>	<input type="checkbox"/>	13
Does either side have any pawns which are isolated ? (Y or N)	<input type="checkbox"/>	<input type="checkbox"/>	14
Does either side have any pawns which are doubled ? (Y or N)	<input type="checkbox"/>	<input type="checkbox"/>	15
Does either side have a rook positioned on an opened file ? (Y or N)	<input type="checkbox"/>	<input type="checkbox"/>	16
Does either side have a rook on file d or file e ? (Y or N)	<input type="checkbox"/>	<input type="checkbox"/>	17
What moves do you suggest for WHITE from the imagined position? (List 1 or 2 possible moves.) For Question 20, write the best reply you see for the move you listed on line 18.	_____	_____	18
	_____	_____	19
	_____	_____	20

Twenty Questions


Problem 59

NAME: _____

DATE: _____

Copyright © 1998-2003

Photocopying this form for instructional use is permitted.



Black just played c6.

To reach POSITION 59, start from the diagram above and picture the move 1) d4.

Focus on this imagined position while answering the 20 questions:

	White	Black	
How many times is each side attacking the four central squares : d4, d5, e4, and e5? **	attacks on d4 : <input type="checkbox"/>	<input type="checkbox"/>	1
	attacks on d5 : <input type="checkbox"/>	<input type="checkbox"/>	2
	attacks on e4 : <input type="checkbox"/>	<input type="checkbox"/>	3
	attacks on e5 : <input type="checkbox"/>	<input type="checkbox"/>	4
Has either side castled ? Write: C if already castled P if prepared to castle on next move T if temporarily unable to castle X if permanently not allowed to castle	<input type="checkbox"/>	<input type="checkbox"/>	5
In how many ways could each side make a capture on its next move?	<input type="checkbox"/>	<input type="checkbox"/>	6

	White	Black	
In how many ways could each side give check on its next move?	<input type="checkbox"/>	<input type="checkbox"/>	7
How many men from each side have more attackers than they have defenders ? **	<input type="checkbox"/>	<input type="checkbox"/>	8
Who has more material on the board? Write: + if the side is ahead in material - if the side is behind in material = if the side is equal in material	<input type="checkbox"/>	<input type="checkbox"/>	9
How active are the minor pieces of each side? Write: H if still on Home Square C if Captured P if Pinned D if Developed	King-side <input type="checkbox"/>	<input type="checkbox"/>	10
	King-side <input type="checkbox"/>	<input type="checkbox"/>	11
	Queen-side <input type="checkbox"/>	<input type="checkbox"/>	12
	Queen-side <input type="checkbox"/>	<input type="checkbox"/>	13
Does either side have any pawns which are isolated ? (Y or N)	<input type="checkbox"/>	<input type="checkbox"/>	14
Does either side have any pawns which are doubled ? (Y or N)	<input type="checkbox"/>	<input type="checkbox"/>	15
Does either side have a rook positioned on an opened file ? (Y or N)	<input type="checkbox"/>	<input type="checkbox"/>	16
Does either side have a rook on file d or file e ? (Y or N)	<input type="checkbox"/>	<input type="checkbox"/>	17
What moves do you suggest for BLACK from the imagined position? (List 1 or 2 possible moves.) For Question 20, write the best reply you see for the move you listed on line 18.	_____	_____	18
	_____	_____	19
	_____	_____	20

Twenty Questions


Problem 60

NAME: _____

DATE: _____

Copyright © 1998-2003

Photocopying this form for instructional use is permitted.



Black just played c5.

To reach POSITION 60, start from the diagram above and picture the move 1) d4.

Focus on this imagined position while answering the 20 questions:

	White	Black	
How many times is each side attacking the four central squares : d4, d5, e4, and e5? **	attacks on d4 : <input type="checkbox"/>	<input type="checkbox"/>	1
	attacks on d5 : <input type="checkbox"/>	<input type="checkbox"/>	2
	attacks on e4 : <input type="checkbox"/>	<input type="checkbox"/>	3
	attacks on e5 : <input type="checkbox"/>	<input type="checkbox"/>	4
Has either side castled ? Write: C if already castled P if prepared to castle on next move T if temporarily unable to castle X if permanently not allowed to castle	<input type="checkbox"/>	<input type="checkbox"/>	5
In how many ways could each side make a capture on its next move?	<input type="checkbox"/>	<input type="checkbox"/>	6

	White	Black	
In how many ways could each side give check on its next move?	<input type="checkbox"/>	<input type="checkbox"/>	7
How many men from each side have more attackers than they have defenders ? **	<input type="checkbox"/>	<input type="checkbox"/>	8
Who has more material on the board? Write: + if the side is ahead in material - if the side is behind in material = if the side is equal in material	<input type="checkbox"/>	<input type="checkbox"/>	9
How active are the minor pieces of each side? Write: H if still on Home Square C if Captured P if Pinned D if Developed	King-side <input type="checkbox"/>	<input type="checkbox"/>	10
	King-side <input type="checkbox"/>	<input type="checkbox"/>	11
	Queen-side <input type="checkbox"/>	<input type="checkbox"/>	12
	Queen-side <input type="checkbox"/>	<input type="checkbox"/>	13
Does either side have any pawns which are isolated ? (Y or N)	<input type="checkbox"/>	<input type="checkbox"/>	14
Does either side have any pawns which are doubled ? (Y or N)	<input type="checkbox"/>	<input type="checkbox"/>	15
Does either side have a rook positioned on an opened file ? (Y or N)	<input type="checkbox"/>	<input type="checkbox"/>	16
Does either side have a rook on file d or file e ? (Y or N)	<input type="checkbox"/>	<input type="checkbox"/>	17
What moves do you suggest for BLACK from the imagined position? <i>(List 1 or 2 possible moves.)</i> <i>For Question 20, write the best reply you see for the move you listed on line 18.</i>	_____	_____	18
	_____	_____	19
	_____	_____	20

Twenty Questions


Problem 61

NAME: _____

DATE: _____

Copyright © 1998-2003

Photocopying this form for instructional use is permitted.



Black just played b5.

To reach POSITION 61, start from the diagram above and picture the move 1) **Bxe6**.

Focus on this imagined position while answering the 20 questions:

	White	Black	
How many times is each side attacking the four central squares : d4, d5, e4, and e5? **	attacks on d4 : <input type="checkbox"/>	<input type="checkbox"/>	1
	attacks on d5 : <input type="checkbox"/>	<input type="checkbox"/>	2
	attacks on e4 : <input type="checkbox"/>	<input type="checkbox"/>	3
	attacks on e5 : <input type="checkbox"/>	<input type="checkbox"/>	4
Has either side castled ? Write: C if already castled P if prepared to castle on next move T if temporarily unable to castle X if permanently not allowed to castle	<input type="checkbox"/>	<input type="checkbox"/>	5
In how many ways could each side make a capture on its next move?	<input type="checkbox"/>	<input type="checkbox"/>	6

	White	Black	
In how many ways could each side give check on its next move?	<input type="checkbox"/>	<input type="checkbox"/>	7
How many men from each side have more attackers than they have defenders ? **	<input type="checkbox"/>	<input type="checkbox"/>	8
Who has more material on the board? Write: + if the side is ahead in material - if the side is behind in material = if the side is equal in material	<input type="checkbox"/>	<input type="checkbox"/>	9
How active are the minor pieces of each side? Write: H if still on Home Square C if Captured P if Pinned D if Developed	King-side <input type="checkbox"/>	<input type="checkbox"/>	10
	King-side <input type="checkbox"/>	<input type="checkbox"/>	11
	Queen-side <input type="checkbox"/>	<input type="checkbox"/>	12
	Queen-side <input type="checkbox"/>	<input type="checkbox"/>	13
Does either side have any pawns which are isolated ? (Y or N)	<input type="checkbox"/>	<input type="checkbox"/>	14
Does either side have any pawns which are doubled ? (Y or N)	<input type="checkbox"/>	<input type="checkbox"/>	15
Does either side have a rook positioned on an opened file ? (Y or N)	<input type="checkbox"/>	<input type="checkbox"/>	16
Does either side have a rook on file d or file e ? (Y or N)	<input type="checkbox"/>	<input type="checkbox"/>	17
What moves do you suggest for BLACK from the imagined position? (List 1 or 2 possible moves.) For Question 20, write the best reply you see for the move you listed on line 18.	_____	_____	18
	_____	_____	19
	_____	_____	20

Twenty Questions


Problem 62

NAME: _____

DATE: _____

Copyright © 1998-2003

Photocopying this form for instructional use is permitted.



Black just played Nf5.

To reach POSITION 62, start from the diagram above and picture the move 1) Nc2.

Focus on this imagined position while answering the 20 questions:

	White	Black	
How many times is each side attacking the four central squares : d4, d5, e4, and e5? **	attacks on d4 : <input type="checkbox"/>	<input type="checkbox"/>	1
	attacks on d5 : <input type="checkbox"/>	<input type="checkbox"/>	2
	attacks on e4 : <input type="checkbox"/>	<input type="checkbox"/>	3
	attacks on e5 : <input type="checkbox"/>	<input type="checkbox"/>	4
Has either side castled ? Write: C if already castled P if prepared to castle on next move T if temporarily unable to castle X if permanently not allowed to castle	<input type="checkbox"/>	<input type="checkbox"/>	5
In how many ways could each side make a capture on its next move?	<input type="checkbox"/>	<input type="checkbox"/>	6

In how many ways could each side **give check** on its next move?

White	Black	
<input type="checkbox"/>	<input type="checkbox"/>	7

How many men from each side have **more attackers than they have defenders**? **

<input type="checkbox"/>	<input type="checkbox"/>	8
--------------------------	--------------------------	---

Who has more material on the board?

Write: + if the side is ahead in material
 - if the side is behind in material
 = if the side is equal in material

<input type="checkbox"/>	<input type="checkbox"/>	9
--------------------------	--------------------------	---

How active are the minor pieces of each side?

Write: **H** if still on Home Square
C if Captured
P if Pinned
D if Developed

King-side	<input type="checkbox"/>	<input type="checkbox"/>	10
King-side	<input type="checkbox"/>	<input type="checkbox"/>	11
Queen-side	<input type="checkbox"/>	<input type="checkbox"/>	12
Queen-side	<input type="checkbox"/>	<input type="checkbox"/>	13

Does either side have any pawns which are **isolated**? (Y or N)

<input type="checkbox"/>	<input type="checkbox"/>	14
--------------------------	--------------------------	----

Does either side have any pawns which are **doubled**? (Y or N)

<input type="checkbox"/>	<input type="checkbox"/>	15
--------------------------	--------------------------	----

Does either side have a **rook positioned on an opened file**? (Y or N)

<input type="checkbox"/>	<input type="checkbox"/>	16
--------------------------	--------------------------	----

Does either side have a **rook on file d or file e**? (Y or N)

<input type="checkbox"/>	<input type="checkbox"/>	17
--------------------------	--------------------------	----

What **moves do you suggest for BLACK** from the imagined position?

_____	18
_____	19

(List 1 or 2 possible moves.)
 For Question 20, write the best reply you see for the move you listed on line 18.

_____	20
-------	----

Twenty Questions


Problem 63

Copyright © 1998-2003

Photocopying this form for instructional use is permitted.

NAME: _____

DATE: _____



White just played **Be2**.

To reach **POSITION 63**, start from the diagram above and picture the move 1) ... **Ne4**.

Focus on this imagined position while answering the 20 questions:

	White	Black	
How many times is each side attacking the four central squares : d4, d5, e4, and e5? **	attacks on d4 : <input type="checkbox"/>	<input type="checkbox"/>	1
	attacks on d5 : <input type="checkbox"/>	<input type="checkbox"/>	2
	attacks on e4 : <input type="checkbox"/>	<input type="checkbox"/>	3
	attacks on e5 : <input type="checkbox"/>	<input type="checkbox"/>	4
Has either side castled ? Write: C if already castled P if prepared to castle on next move T if temporarily unable to castle X if permanently not allowed to castle	<input type="checkbox"/>	<input type="checkbox"/>	5
In how many ways could each side make a capture on its next move?	<input type="checkbox"/>	<input type="checkbox"/>	6

In how many ways could each side **give check** on its next move?

White	Black	
<input type="checkbox"/>	<input type="checkbox"/>	7

How many men from each side have **more attackers than they have defenders**? **

<input type="checkbox"/>	<input type="checkbox"/>	8
--------------------------	--------------------------	---





Who has more material on the board?

Write: + if the side is ahead in material
 - if the side is behind in material
 = if the side is equal in material

<input type="checkbox"/>	<input type="checkbox"/>	9
--------------------------	--------------------------	---

How active are the minor pieces of each side?

Write: **H** if still on *Home Square*
C if *Captured*
P if *Pinned*
D if *Developed*

King-side 	<input type="checkbox"/>	<input type="checkbox"/>	10
King-side 	<input type="checkbox"/>	<input type="checkbox"/>	11
Queen-side 	<input type="checkbox"/>	<input type="checkbox"/>	12
Queen-side 	<input type="checkbox"/>	<input type="checkbox"/>	13

Does either side have any pawns which are **isolated**? (Y or N)

<input type="checkbox"/>	<input type="checkbox"/>	14
--------------------------	--------------------------	----

Does either side have any pawns which are **doubled**? (Y or N)

<input type="checkbox"/>	<input type="checkbox"/>	15
--------------------------	--------------------------	----

Does either side have a **rook positioned on an opened file**? (Y or N)

<input type="checkbox"/>	<input type="checkbox"/>	16
--------------------------	--------------------------	----

Does either side have a **rook on file d or file e**? (Y or N)

<input type="checkbox"/>	<input type="checkbox"/>	17
--------------------------	--------------------------	----

What **moves do you suggest for WHITE** from the imagined position?

_____	18
_____	19
_____	20

(List 1 or 2 possible moves.)
 For Question 20, write the best reply you see for the move you listed on line 18.

Twenty Questions


Problem 64

Copyright © 1998-2003

Photocopying this form for instructional use is permitted.

NAME: _____

DATE: _____



White just played Rxa4.

To reach POSITION 64, start from the diagram above and picture the move 1) ... 0-0.

Focus on this imagined position while answering the 20 questions:

	White	Black	
How many times is each side attacking the four central squares : d4, d5, e4, and e5? **	attacks on d4 : <input type="checkbox"/>	<input type="checkbox"/>	1
	attacks on d5 : <input type="checkbox"/>	<input type="checkbox"/>	2
	attacks on e4 : <input type="checkbox"/>	<input type="checkbox"/>	3
	attacks on e5 : <input type="checkbox"/>	<input type="checkbox"/>	4
Has either side castled ? Write: C if already castled P if prepared to castle on next move T if temporarily unable to castle X if permanently not allowed to castle	<input type="checkbox"/>	<input type="checkbox"/>	5
In how many ways could each side make a capture on its next move?	<input type="checkbox"/>	<input type="checkbox"/>	6

In how many ways could each side **give check** on its next move?

White	Black	
<input type="checkbox"/>	<input type="checkbox"/>	7

How many men from each side have **more attackers than they have defenders**? **

<input type="checkbox"/>	<input type="checkbox"/>	8
--------------------------	--------------------------	---

Who has **more material** on the board?

Write: + if the side is ahead in material
 - if the side is behind in material
 = if the side is equal in material

<input type="checkbox"/>	<input type="checkbox"/>	9
--------------------------	--------------------------	---

How active are the **minor pieces** of each side?

Write: **H** if still on Home Square
C if Captured
P if Pinned
D if Developed

King-side	White	Black	
	<input type="checkbox"/>	<input type="checkbox"/>	10
King-side	<input type="checkbox"/>	<input type="checkbox"/>	11
	<input type="checkbox"/>	<input type="checkbox"/>	12
Queen-side	<input type="checkbox"/>	<input type="checkbox"/>	13
	<input type="checkbox"/>	<input type="checkbox"/>	13
Queen-side	<input type="checkbox"/>	<input type="checkbox"/>	13
	<input type="checkbox"/>	<input type="checkbox"/>	13

Does either side have any pawns which are **isolated**? (Y or N)

<input type="checkbox"/>	<input type="checkbox"/>	14
--------------------------	--------------------------	----

Does either side have any pawns which are **doubled**? (Y or N)

<input type="checkbox"/>	<input type="checkbox"/>	15
--------------------------	--------------------------	----

Does either side have a **rook positioned on an opened file**? (Y or N)

<input type="checkbox"/>	<input type="checkbox"/>	16
--------------------------	--------------------------	----

Does either side have a **rook on file d or file e**? (Y or N)

<input type="checkbox"/>	<input type="checkbox"/>	17
--------------------------	--------------------------	----

What **moves do you suggest for WHITE** from the imagined position?

_____ 18

_____ 19

(List 1 or 2 possible moves.)
 For Question 20, write the best reply you see for the move you listed on line 18.

_____ 20

Twenty Questions


Problem 65

NAME: _____

DATE: _____

Copyright © 1998-2003

Photocopying this form for instructional use is permitted.



White just played c4.

To reach POSITION 65, start from the diagram above and picture the move 1) ... **Ba6**.

Focus on this imagined position while answering the 20 questions:

	White	Black	
How many times is each side attacking the four central squares : d4, d5, e4, and e5? **	attacks on d4 : <input type="checkbox"/>	<input type="checkbox"/>	1
	attacks on d5 : <input type="checkbox"/>	<input type="checkbox"/>	2
	attacks on e4 : <input type="checkbox"/>	<input type="checkbox"/>	3
	attacks on e5 : <input type="checkbox"/>	<input type="checkbox"/>	4
Has either side castled ? Write: C if already castled P if prepared to castle on next move T if temporarily unable to castle X if permanently not allowed to castle	<input type="checkbox"/>	<input type="checkbox"/>	5
In how many ways could each side make a capture on its next move?	<input type="checkbox"/>	<input type="checkbox"/>	6

	White	Black	
In how many ways could each side give check on its next move?	<input type="checkbox"/>	<input type="checkbox"/>	7
How many men from each side have more attackers than they have defenders ? **	<input type="checkbox"/>	<input type="checkbox"/>	8
Who has more material on the board? Write: + if the side is ahead in material - if the side is behind in material = if the side is equal in material	<input type="checkbox"/>	<input type="checkbox"/>	9
How active are the minor pieces of each side? Write: H if still on Home Square C if Captured P if Pinned D if Developed	King-side <input type="checkbox"/>	<input type="checkbox"/>	10
	King-side <input type="checkbox"/>	<input type="checkbox"/>	11
	Queen-side <input type="checkbox"/>	<input type="checkbox"/>	12
	Queen-side <input type="checkbox"/>	<input type="checkbox"/>	13
Does either side have any pawns which are isolated ? (Y or N)	<input type="checkbox"/>	<input type="checkbox"/>	14
Does either side have any pawns which are doubled ? (Y or N)	<input type="checkbox"/>	<input type="checkbox"/>	15
Does either side have a rook positioned on an opened file ? (Y or N)	<input type="checkbox"/>	<input type="checkbox"/>	16
Does either side have a rook on file d or file e ? (Y or N)	<input type="checkbox"/>	<input type="checkbox"/>	17
What moves do you suggest for WHITE from the imagined position? <i>(List 1 or 2 possible moves.)</i> <i>For Question 20, write the best reply you see for the move you listed on line 18.</i>	_____	_____	18
	_____	_____	19
	_____	_____	20

Twenty Questions


Problem 66

Copyright © 1998-2003

Photocopying this form for instructional use is permitted.

NAME: _____

DATE: _____



Black just played **dxc3**.

To reach **POSITION 66**, start from the diagram above and picture the move 1) **Nxc3**.

Focus on this imagined position while answering the 20 questions:

	White	Black	
How many times is each side attacking the four central squares : d4, d5, e4, and e5? **	attacks on d4 : <input type="checkbox"/>	<input type="checkbox"/>	1
	attacks on d5 : <input type="checkbox"/>	<input type="checkbox"/>	2
	attacks on e4 : <input type="checkbox"/>	<input type="checkbox"/>	3
	attacks on e5 : <input type="checkbox"/>	<input type="checkbox"/>	4
Has either side castled ? Write: C if already castled P if prepared to castle on next move T if temporarily unable to castle X if permanently not allowed to castle	<input type="checkbox"/>	<input type="checkbox"/>	5
In how many ways could each side make a capture on its next move?	<input type="checkbox"/>	<input type="checkbox"/>	6

	White	Black	
In how many ways could each side give check on its next move?	<input type="checkbox"/>	<input type="checkbox"/>	7
How many men from each side have more attackers than they have defenders ? **	<input type="checkbox"/>	<input type="checkbox"/>	8
Who has more material on the board? Write: + if the side is ahead in material - if the side is behind in material = if the side is equal in material	<input type="checkbox"/>	<input type="checkbox"/>	9
How active are the minor pieces of each side? Write: H if still on Home Square C if Captured P if Pinned D if Developed	King-side <input type="checkbox"/>	<input type="checkbox"/>	10
	King-side <input type="checkbox"/>	<input type="checkbox"/>	11
	Queen-side <input type="checkbox"/>	<input type="checkbox"/>	12
	Queen-side <input type="checkbox"/>	<input type="checkbox"/>	13
Does either side have any pawns which are isolated ? (Y or N)	<input type="checkbox"/>	<input type="checkbox"/>	14
Does either side have any pawns which are doubled ? (Y or N)	<input type="checkbox"/>	<input type="checkbox"/>	15
Does either side have a rook positioned on an opened file ? (Y or N)	<input type="checkbox"/>	<input type="checkbox"/>	16
Does either side have a rook on file d or file e ? (Y or N)	<input type="checkbox"/>	<input type="checkbox"/>	17
What moves do you suggest for BLACK from the imagined position? (List 1 or 2 possible moves.) For Question 20, write the best reply you see for the move you listed on line 18.	_____	_____	18
	_____	_____	19
	_____	_____	20

Twenty Questions


Problem 67

NAME: _____

DATE: _____

Copyright © 1998-2003

Photocopying this form for instructional use is permitted.



White just played **Nxe4**.

To reach **POSITION 67**, start from the diagram above and picture the move 1) ... **d5**.

Focus on this imagined position while answering the 20 questions:

	White	Black	
How many times is each side attacking the four central squares : d4, d5, e4, and e5? **	attacks on d4 : <input type="checkbox"/>	<input type="checkbox"/>	1
	attacks on d5 : <input type="checkbox"/>	<input type="checkbox"/>	2
	attacks on e4 : <input type="checkbox"/>	<input type="checkbox"/>	3
	attacks on e5 : <input type="checkbox"/>	<input type="checkbox"/>	4
Has either side castled ? Write: C if already castled P if prepared to castle on next move T if temporarily unable to castle X if permanently not allowed to castle	<input type="checkbox"/>	<input type="checkbox"/>	5
In how many ways could each side make a capture on its next move?	<input type="checkbox"/>	<input type="checkbox"/>	6

	White	Black	
In how many ways could each side give check on its next move?	<input type="checkbox"/>	<input type="checkbox"/>	7
How many men from each side have more attackers than they have defenders ? **	<input type="checkbox"/>	<input type="checkbox"/>	8
Who has more material on the board? Write: + if the side is ahead in material - if the side is behind in material = if the side is equal in material	<input type="checkbox"/>	<input type="checkbox"/>	9
How active are the minor pieces of each side? Write: H if still on Home Square C if Captured P if Pinned D if Developed	King-side <input type="checkbox"/>	<input type="checkbox"/>	10
	King-side <input type="checkbox"/>	<input type="checkbox"/>	11
	Queen-side <input type="checkbox"/>	<input type="checkbox"/>	12
	Queen-side <input type="checkbox"/>	<input type="checkbox"/>	13
Does either side have any pawns which are isolated ? (Y or N)	<input type="checkbox"/>	<input type="checkbox"/>	14
Does either side have any pawns which are doubled ? (Y or N)	<input type="checkbox"/>	<input type="checkbox"/>	15
Does either side have a rook positioned on an opened file ? (Y or N)	<input type="checkbox"/>	<input type="checkbox"/>	16
Does either side have a rook on file d or file e ? (Y or N)	<input type="checkbox"/>	<input type="checkbox"/>	17
What moves do you suggest for WHITE from the imagined position? (List 1 or 2 possible moves.) For Question 20, write the best reply you see for the move you listed on line 18.	_____	_____	18
	_____	_____	19
	_____	_____	20

Twenty Questions


Problem 68

NAME: _____

DATE: _____

Copyright © 1998-2003

Photocopying this form for instructional use is permitted.



White just played d4.

To reach **POSITION 68**, start from the diagram above and picture the move 1) ... **Qc7**.

Focus on this imagined position while answering the 20 questions:

	White	Black	
How many times is each side attacking the four central squares : d4, d5, e4, and e5? **	attacks on d4 : <input type="checkbox"/>	<input type="checkbox"/>	1
	attacks on d5 : <input type="checkbox"/>	<input type="checkbox"/>	2
	attacks on e4 : <input type="checkbox"/>	<input type="checkbox"/>	3
	attacks on e5 : <input type="checkbox"/>	<input type="checkbox"/>	4
Has either side castled ? Write: C if already castled P if prepared to castle on next move T if temporarily unable to castle X if permanently not allowed to castle	<input type="checkbox"/>	<input type="checkbox"/>	5
In how many ways could each side make a capture on its next move?	<input type="checkbox"/>	<input type="checkbox"/>	6

In how many ways could each side **give check** on its next move?

How many men from each side have **more attackers than they have defenders**? **

Who has more material on the board?

Write: + if the side is ahead in material
 - if the side is behind in material
 = if the side is equal in material

How active are the minor pieces of each side?

Write: **H** if still on *Home Square*
C if *Captured*
P if *Pinned*
D if *Developed*

	White	Black	
	<input type="checkbox"/>	<input type="checkbox"/>	7
	<input type="checkbox"/>	<input type="checkbox"/>	8
	<input type="checkbox"/>	<input type="checkbox"/>	9
	<input type="checkbox"/>	<input type="checkbox"/>	10
	<input type="checkbox"/>	<input type="checkbox"/>	11
	<input type="checkbox"/>	<input type="checkbox"/>	12
	<input type="checkbox"/>	<input type="checkbox"/>	13
	<input type="checkbox"/>	<input type="checkbox"/>	14
	<input type="checkbox"/>	<input type="checkbox"/>	15
	<input type="checkbox"/>	<input type="checkbox"/>	16
	<input type="checkbox"/>	<input type="checkbox"/>	17
	_____	_____	18
	_____	_____	19
	_____	_____	20

Does either side have any pawns which are **isolated**? (Y or N)

Does either side have any pawns which are **doubled**? (Y or N)

Does either side have a **rook positioned on an opened file**? (Y or N)

Does either side have a **rook on file d or file e**? (Y or N)

What **moves do you suggest for WHITE** from the imagined position?

(List 1 or 2 possible moves.)
 For Question 20, write the best reply you see for the move you listed on line 18.

Twenty Questions


Problem 69

Copyright © 1998-2003

Photocopying this form for instructional use is permitted.

NAME: _____

DATE: _____



White just played **Bc4**.

To reach **POSITION 69**, start from the diagram above and picture the move 1) ... **b5**.

Focus on this imagined position while answering the 20 questions:

	White	Black	
How many times is each side attacking the four central squares : d4, d5, e4, and e5? **	attacks on d4 : <input type="checkbox"/>	<input type="checkbox"/>	1
	attacks on d5 : <input type="checkbox"/>	<input type="checkbox"/>	2
	attacks on e4 : <input type="checkbox"/>	<input type="checkbox"/>	3
	attacks on e5 : <input type="checkbox"/>	<input type="checkbox"/>	4
Has either side castled ? Write: C if already castled P if prepared to castle on next move T if temporarily unable to castle X if permanently not allowed to castle	<input type="checkbox"/>	<input type="checkbox"/>	5
In how many ways could each side make a capture on its next move?	<input type="checkbox"/>	<input type="checkbox"/>	6

	White	Black	
In how many ways could each side give check on its next move?	<input type="checkbox"/>	<input type="checkbox"/>	7
How many men from each side have more attackers than they have defenders ? **	<input type="checkbox"/>	<input type="checkbox"/>	8
Who has more material on the board? Write: + if the side is ahead in material - if the side is behind in material = if the side is equal in material	<input type="checkbox"/>	<input type="checkbox"/>	9
How active are the minor pieces of each side? Write: H if still on Home Square C if Captured P if Pinned D if Developed	King-side <input type="checkbox"/>	<input type="checkbox"/>	10
	King-side <input type="checkbox"/>	<input type="checkbox"/>	11
	Queen-side <input type="checkbox"/>	<input type="checkbox"/>	12
	Queen-side <input type="checkbox"/>	<input type="checkbox"/>	13
Does either side have any pawns which are isolated ? (Y or N)	<input type="checkbox"/>	<input type="checkbox"/>	14
Does either side have any pawns which are doubled ? (Y or N)	<input type="checkbox"/>	<input type="checkbox"/>	15
Does either side have a rook positioned on an opened file ? (Y or N)	<input type="checkbox"/>	<input type="checkbox"/>	16
Does either side have a rook on file d or file e ? (Y or N)	<input type="checkbox"/>	<input type="checkbox"/>	17
What moves do you suggest for WHITE from the imagined position? (List 1 or 2 possible moves.) For Question 20, write the best reply you see for the move you listed on line 18.	_____		18
	_____		19
	_____		20

Twenty Questions


Problem 70

NAME: _____

DATE: _____

Copyright © 1998-2003

Photocopying this form for instructional use is permitted.



Black just played **bxc5**.

To reach **POSITION 70**, start from the diagram above and picture the move 1) **b5**.

Focus on this imagined position while answering the 20 questions:

	White	Black	
How many times is each side attacking the four central squares : d4, d5, e4, and e5? **	attacks on d4 : <input type="checkbox"/>	<input type="checkbox"/>	1
	attacks on d5 : <input type="checkbox"/>	<input type="checkbox"/>	2
	attacks on e4 : <input type="checkbox"/>	<input type="checkbox"/>	3
	attacks on e5 : <input type="checkbox"/>	<input type="checkbox"/>	4
Has either side castled ? Write: C if already castled P if prepared to castle on next move T if temporarily unable to castle X if permanently not allowed to castle	<input type="checkbox"/>	<input type="checkbox"/>	5
In how many ways could each side make a capture on its next move?	<input type="checkbox"/>	<input type="checkbox"/>	6

In how many ways could each side **give check** on its next move?

White	Black	
<input type="checkbox"/>	<input type="checkbox"/>	7

How many men from each side have **more attackers than they have defenders**? **

<input type="checkbox"/>	<input type="checkbox"/>	8
--------------------------	--------------------------	---

Who has **more material** on the board?

Write: + if the side is ahead in material
 - if the side is behind in material
 = if the side is equal in material

<input type="checkbox"/>	<input type="checkbox"/>	9
--------------------------	--------------------------	---

How active are the **minor pieces** of each side?

Write: **H** if still on *Home Square*
C if *Captured*
P if *Pinned*
D if *Developed*

King-side	<input type="checkbox"/>	<input type="checkbox"/>	10
King-side	<input type="checkbox"/>	<input type="checkbox"/>	11
Queen-side	<input type="checkbox"/>	<input type="checkbox"/>	12
Queen-side	<input type="checkbox"/>	<input type="checkbox"/>	13

Does either side have any pawns which are **isolated**? (Y or N)

<input type="checkbox"/>	<input type="checkbox"/>	14
--------------------------	--------------------------	----

Does either side have any pawns which are **doubled**? (Y or N)

<input type="checkbox"/>	<input type="checkbox"/>	15
--------------------------	--------------------------	----

Does either side have a **rook positioned on an opened file**? (Y or N)

<input type="checkbox"/>	<input type="checkbox"/>	16
--------------------------	--------------------------	----

Does either side have a **rook on file d or file e**? (Y or N)

<input type="checkbox"/>	<input type="checkbox"/>	17
--------------------------	--------------------------	----

What **moves do you suggest for BLACK** from the imagined position?

_____	18
_____	19

(List 1 or 2 possible moves.)
 For Question 20, write the best reply you see for the move you listed on line 18.

_____	20
-------	----

Twenty Questions


Problem 71

NAME: _____

DATE: _____

Copyright © 1998-2003

Photocopying this form for instructional use is permitted.



White just played a3.

To reach POSITION 71, start from the diagram above and picture the moves 1) ... Na6, 2) d4.

Focus on this imagined position while answering the 20 questions:

	White	Black	
How many times is each side attacking the four central squares: d4, d5, e4, and e5? **	attacks on d4: <input type="checkbox"/>	<input type="checkbox"/>	1
	attacks on d5: <input type="checkbox"/>	<input type="checkbox"/>	2
	attacks on e4: <input type="checkbox"/>	<input type="checkbox"/>	3
	attacks on e5: <input type="checkbox"/>	<input type="checkbox"/>	4
Has either side castled ? Write: C if already castled P if prepared to castle on next move T if temporarily unable to castle X if permanently not allowed to castle	<input type="checkbox"/>	<input type="checkbox"/>	5
In how many ways could each side make a capture on its next move?	<input type="checkbox"/>	<input type="checkbox"/>	6

In how many ways could each side **give check** on its next move?

White	Black	
<input type="checkbox"/>	<input type="checkbox"/>	7

How many men from each side have **more attackers than they have defenders?** **

<input type="checkbox"/>	<input type="checkbox"/>	8
--------------------------	--------------------------	---

Who has more material on the board?

Write: + if the side is ahead in material
 - if the side is behind in material
 = if the side is equal in material

<input type="checkbox"/>	<input type="checkbox"/>	9
--------------------------	--------------------------	---

How active are the **minor pieces** of each side?

Write: **H** if still on Home Square
C if Captured
P if Pinned
D if Developed

King-side	King-side	
<input type="checkbox"/>	<input type="checkbox"/>	10
<input type="checkbox"/>	<input type="checkbox"/>	11
Queen-side	Queen-side	
<input type="checkbox"/>	<input type="checkbox"/>	12
<input type="checkbox"/>	<input type="checkbox"/>	13

Does either side have any pawns which are **isolated**? (Y or N)

<input type="checkbox"/>	<input type="checkbox"/>	14
--------------------------	--------------------------	----

Does either side have any pawns which are **doubled**? (Y or N)

<input type="checkbox"/>	<input type="checkbox"/>	15
--------------------------	--------------------------	----

Does either side have a **rook positioned on an opened file**? (Y or N)

<input type="checkbox"/>	<input type="checkbox"/>	16
--------------------------	--------------------------	----

Does either side have a **rook on file d or file e**? (Y or N)

<input type="checkbox"/>	<input type="checkbox"/>	17
--------------------------	--------------------------	----

What moves do you **suggest for BLACK** from the imagined position?

(List 1 or 2 possible moves.)
 For Question 20, write the best reply you see for the move you listed on line 18.

_____	18
_____	19
_____	20

Twenty Questions


Problem 72

NAME: _____

DATE: _____

Copyright © 1998-2003

Photocopying this form for instructional use is permitted.



White just played **Nxe5**.

To reach **POSITION 72**, start from the diagram above and picture the moves **1) ... d6**, **2) Nf3**.

Focus on this imagined position while answering the 20 questions:

	White	Black	
How many times is each side attacking the four central squares : d4, d5, e4, and e5? **	attacks on d4 : <input type="checkbox"/>	<input type="checkbox"/>	1
	attacks on d5 : <input type="checkbox"/>	<input type="checkbox"/>	2
	attacks on e4 : <input type="checkbox"/>	<input type="checkbox"/>	3
	attacks on e5 : <input type="checkbox"/>	<input type="checkbox"/>	4
Has either side castled ? Write: C if already castled P if prepared to castle on next move T if temporarily unable to castle X if permanently not allowed to castle	<input type="checkbox"/>	<input type="checkbox"/>	5
In how many ways could each side make a capture on its next move?	<input type="checkbox"/>	<input type="checkbox"/>	6

In how many ways could each side **give check** on its next move?

White	Black	
<input type="checkbox"/>	<input type="checkbox"/>	7

How many men from each side have **more attackers than they have defenders**? **

<input type="checkbox"/>	<input type="checkbox"/>	8
--------------------------	--------------------------	---

Who has **more material** on the board?

Write: + if the side is ahead in material
 - if the side is behind in material
 = if the side is equal in material

<input type="checkbox"/>	<input type="checkbox"/>	9
--------------------------	--------------------------	---

How active are the **minor pieces** of each side?

Write: **H** if still on Home Square
C if Captured
P if Pinned
D if Developed

King-side	White	Black	
	<input type="checkbox"/>	<input type="checkbox"/>	10
King-side	<input type="checkbox"/>	<input type="checkbox"/>	11
	<input type="checkbox"/>	<input type="checkbox"/>	12
Queen-side	<input type="checkbox"/>	<input type="checkbox"/>	13
	<input type="checkbox"/>	<input type="checkbox"/>	14
Queen-side	<input type="checkbox"/>	<input type="checkbox"/>	15
	<input type="checkbox"/>	<input type="checkbox"/>	16

Does either side have any pawns which are **isolated**? (Y or N)

<input type="checkbox"/>	<input type="checkbox"/>	17
--------------------------	--------------------------	----

Does either side have any pawns which are **doubled**? (Y or N)

<input type="checkbox"/>	<input type="checkbox"/>	18
--------------------------	--------------------------	----

Does either side have a **rook positioned on an opened file**? (Y or N)

<input type="checkbox"/>	<input type="checkbox"/>	19
--------------------------	--------------------------	----

Does either side have a **rook on file d or file e**? (Y or N)

<input type="checkbox"/>	<input type="checkbox"/>	20
--------------------------	--------------------------	----

What **moves do you suggest for BLACK** from the imagined position?

(List 1 or 2 possible moves.)
 For Question 20, write the best reply you see for the move you listed on line 18.

_____	18
_____	19
_____	20

Twenty Questions


Problem 73

Copyright © 1998-2003

Photocopying this form for instructional use is permitted.

NAME: _____

DATE: _____



White just played Qe2.

To reach POSITION 73, start from the diagram above and picture the moves 1) ... Nc5, 2) Ne4.

Focus on this imagined position while answering the 20 questions:

	White	Black	
How many times is each side attacking the four central squares: d4, d5, e4, and e5? **	attacks on d4: <input type="checkbox"/>	<input type="checkbox"/>	1
	attacks on d5: <input type="checkbox"/>	<input type="checkbox"/>	2
	attacks on e4: <input type="checkbox"/>	<input type="checkbox"/>	3
	attacks on e5: <input type="checkbox"/>	<input type="checkbox"/>	4
Has either side castled ? Write: C if already castled P if prepared to castle on next move T if temporarily unable to castle X if permanently not allowed to castle	<input type="checkbox"/>	<input type="checkbox"/>	5
In how many ways could each side make a capture on its next move?	<input type="checkbox"/>	<input type="checkbox"/>	6

In how many ways could each side **give check** on its next move?

White	Black	
<input type="checkbox"/>	<input type="checkbox"/>	7

How many men from each side have **more attackers than they have defenders?** **

<input type="checkbox"/>	<input type="checkbox"/>	8
--------------------------	--------------------------	---

Who has more material on the board?

Write: + if the side is ahead in material
 - if the side is behind in material
 = if the side is equal in material

<input type="checkbox"/>	<input type="checkbox"/>	9
--------------------------	--------------------------	---

How active are the **minor pieces** of each side?

Write: **H** if still on Home Square
C if Captured
P if Pinned
D if Developed

King-side	King-side	
<input type="checkbox"/>	<input type="checkbox"/>	10
<input type="checkbox"/>	<input type="checkbox"/>	11
<input type="checkbox"/>	<input type="checkbox"/>	12
<input type="checkbox"/>	<input type="checkbox"/>	13

Does either side have any pawns which are **isolated**? (Y or N)

<input type="checkbox"/>	<input type="checkbox"/>	14
--------------------------	--------------------------	----

Does either side have any pawns which are **doubled**? (Y or N)

<input type="checkbox"/>	<input type="checkbox"/>	15
--------------------------	--------------------------	----

Does either side have a **rook positioned on an opened file**? (Y or N)

<input type="checkbox"/>	<input type="checkbox"/>	16
--------------------------	--------------------------	----

Does either side have a **rook on file d or file e**? (Y or N)

<input type="checkbox"/>	<input type="checkbox"/>	17
--------------------------	--------------------------	----

What moves do you **suggest for BLACK** from the imagined position?

(List 1 or 2 possible moves.)
 For Question 20, write the best reply you see for the move you listed on line 18.

_____	18
_____	19
_____	20

Twenty Questions


Problem 74

NAME: _____

DATE: _____

Copyright © 1998-2003

Photocopying this form for instructional use is permitted.



Black just played h6.

To reach POSITION 74, start from the diagram above and picture the moves 1) Be3 Qb6.

Focus on this imagined position while answering the 20 questions:

	White	Black	
How many times is each side attacking the four central squares: d4, d5, e4, and e5? **	attacks on d4: <input type="checkbox"/>	<input type="checkbox"/>	1
	attacks on d5: <input type="checkbox"/>	<input type="checkbox"/>	2
	attacks on e4: <input type="checkbox"/>	<input type="checkbox"/>	3
	attacks on e5: <input type="checkbox"/>	<input type="checkbox"/>	4
Has either side castled ? Write: C if already castled P if prepared to castle on next move T if temporarily unable to castle X if permanently not allowed to castle	<input type="checkbox"/>	<input type="checkbox"/>	5
In how many ways could each side make a capture on its next move?	<input type="checkbox"/>	<input type="checkbox"/>	6

In how many ways could each side **give check** on its next move?

White	Black	
<input type="checkbox"/>	<input type="checkbox"/>	7

How many men from each side have **more attackers than they have defenders**? **

<input type="checkbox"/>	<input type="checkbox"/>	8
--------------------------	--------------------------	---

Who has more material on the board?

<input type="checkbox"/>	<input type="checkbox"/>	9
--------------------------	--------------------------	---

Write: + if the side is ahead in material
 - if the side is behind in material
 = if the side is equal in material

How active are the **minor pieces** of each side?

King-side	White	Black	
	<input type="checkbox"/>	<input type="checkbox"/>	10

Write: **H** if still on Home Square
C if Captured
P if Pinned
D if Developed

King-side	White	Black	
	<input type="checkbox"/>	<input type="checkbox"/>	11

Queen-side	White	Black	
	<input type="checkbox"/>	<input type="checkbox"/>	12

Queen-side	White	Black	
	<input type="checkbox"/>	<input type="checkbox"/>	13

Does either side have any pawns which are **isolated**? (Y or N)

<input type="checkbox"/>	<input type="checkbox"/>	14
--------------------------	--------------------------	----

Does either side have any pawns which are **doubled**? (Y or N)

<input type="checkbox"/>	<input type="checkbox"/>	15
--------------------------	--------------------------	----

Does either side have a **rook positioned on an opened file**? (Y or N)

<input type="checkbox"/>	<input type="checkbox"/>	16
--------------------------	--------------------------	----

Does either side have a **rook on file d or file e**? (Y or N)

<input type="checkbox"/>	<input type="checkbox"/>	17
--------------------------	--------------------------	----

What moves do you **suggest for WHITE** from the imagined position?

_____	18
-------	----

(List 1 or 2 possible moves.)
 For Question 20, write the best reply you see for the move you listed on line 18.

_____	19
_____	20

Twenty Questions


Problem 75

NAME: _____

DATE: _____

Copyright © 1998-2003

Photocopying this form for instructional use is permitted.



White just played Nb5.

To reach POSITION 75, start from the diagram above and picture the moves 1) ... Na6, 2) e5.

Focus on this imagined position while answering the 20 questions:

	White	Black	
How many times is each side attacking the four central squares: d4, d5, e4, and e5? **	attacks on d4: <input type="checkbox"/>	<input type="checkbox"/>	1
	attacks on d5: <input type="checkbox"/>	<input type="checkbox"/>	2
	attacks on e4: <input type="checkbox"/>	<input type="checkbox"/>	3
	attacks on e5: <input type="checkbox"/>	<input type="checkbox"/>	4
Has either side castled ? Write: C if already castled P if prepared to castle on next move T if temporarily unable to castle X if permanently not allowed to castle	<input type="checkbox"/>	<input type="checkbox"/>	5
In how many ways could each side make a capture on its next move?	<input type="checkbox"/>	<input type="checkbox"/>	6

In how many ways could each side **give check** on its next move?

White	Black	
<input type="checkbox"/>	<input type="checkbox"/>	7

How many men from each side have **more attackers than they have defenders?** **

<input type="checkbox"/>	<input type="checkbox"/>	8
--------------------------	--------------------------	---

Who has **more material** on the board?

Write: + if the side is ahead in material
 - if the side is behind in material
 = if the side is equal in material

<input type="checkbox"/>	<input type="checkbox"/>	9
--------------------------	--------------------------	---

How active are the **minor pieces** of each side?

Write: **H** if still on Home Square
C if Captured
P if Pinned
D if Developed

King-side	White	Black	
	<input type="checkbox"/>	<input type="checkbox"/>	10
King-side	<input type="checkbox"/>	<input type="checkbox"/>	11
	<input type="checkbox"/>	<input type="checkbox"/>	12
Queen-side	<input type="checkbox"/>	<input type="checkbox"/>	13
	<input type="checkbox"/>	<input type="checkbox"/>	14
Queen-side	<input type="checkbox"/>	<input type="checkbox"/>	15
	<input type="checkbox"/>	<input type="checkbox"/>	16

Does either side have any pawns which are **isolated**? (Y or N)

<input type="checkbox"/>	<input type="checkbox"/>	17
--------------------------	--------------------------	----

Does either side have any pawns which are **doubled**? (Y or N)

<input type="checkbox"/>	<input type="checkbox"/>	18
--------------------------	--------------------------	----

Does either side have a **rook positioned on an opened file**? (Y or N)

<input type="checkbox"/>	<input type="checkbox"/>	19
--------------------------	--------------------------	----

Does either side have a **rook on file d or file e**? (Y or N)

<input type="checkbox"/>	<input type="checkbox"/>	20
--------------------------	--------------------------	----

What **moves do you suggest for BLACK** from the imagined position?

(List 1 or 2 possible moves.)
 For Question 20, write the best reply you see for the move you listed on line 18.

_____	18
_____	19
_____	20

Twenty Questions


Problem 76

NAME: _____

DATE: _____

Copyright © 1998-2003

Photocopying this form for instructional use is permitted.



White just played **Bd3**.

To reach **POSITION 76**, start from the diagram above and picture the moves **1) ... Nc6**, **2) Ne5**.

Focus on this imagined position while answering the 20 questions:

	White	Black	
How many times is each side attacking the four central squares : d4, d5, e4, and e5? **	attacks on d4 : <input type="checkbox"/>	<input type="checkbox"/>	1
	attacks on d5 : <input type="checkbox"/>	<input type="checkbox"/>	2
	attacks on e4 : <input type="checkbox"/>	<input type="checkbox"/>	3
	attacks on e5 : <input type="checkbox"/>	<input type="checkbox"/>	4
Has either side castled ? Write: C if already castled P if prepared to castle on next move T if temporarily unable to castle X if permanently not allowed to castle	<input type="checkbox"/>	<input type="checkbox"/>	5
In how many ways could each side make a capture on its next move?	<input type="checkbox"/>	<input type="checkbox"/>	6

In how many ways could each side **give check** on its next move?

White	Black	
<input type="checkbox"/>	<input type="checkbox"/>	7

How many men from each side have **more attackers than they have defenders**? **

<input type="checkbox"/>	<input type="checkbox"/>	8
--------------------------	--------------------------	---

Who has more material on the board?

<input type="checkbox"/>	<input type="checkbox"/>	9
--------------------------	--------------------------	---

Write: + if the side is ahead in material
 - if the side is behind in material
 = if the side is equal in material

How active are the **minor pieces** of each side?

King-side	White	Black	
	<input type="checkbox"/>	<input type="checkbox"/>	10

Write: **H** if still on Home Square
C if Captured
P if Pinned
D if Developed

King-side	White	Black	
	<input type="checkbox"/>	<input type="checkbox"/>	11

Queen-side	White	Black	
	<input type="checkbox"/>	<input type="checkbox"/>	12

Queen-side	White	Black	
	<input type="checkbox"/>	<input type="checkbox"/>	13

Does either side have any pawns which are **isolated**? (Y or N)

<input type="checkbox"/>	<input type="checkbox"/>	14
--------------------------	--------------------------	----

Does either side have any pawns which are **doubled**? (Y or N)

<input type="checkbox"/>	<input type="checkbox"/>	15
--------------------------	--------------------------	----

Does either side have a **rook positioned on an opened file**? (Y or N)

<input type="checkbox"/>	<input type="checkbox"/>	16
--------------------------	--------------------------	----

Does either side have a **rook on file d or file e**? (Y or N)

<input type="checkbox"/>	<input type="checkbox"/>	17
--------------------------	--------------------------	----

What moves do you **suggest for BLACK** from the imagined position?

_____	18
-------	----

(List 1 or 2 possible moves.)
 For Question 20, write the best reply you see for the move you listed on line 18.

_____	19
_____	20

Twenty Questions


Problem 77

NAME: _____

DATE: _____

Copyright © 1998-2003

Photocopying this form for instructional use is permitted.



White just played **exd5**.

To reach **POSITION 77**, start from the diagram above and picture the moves **1) ... Nxd5**, **2) Nxf7**.

Focus on this imagined position while answering the 20 questions:

	White	Black	
How many times is each side attacking the four central squares : d4, d5, e4, and e5? **	attacks on d4 : <input type="checkbox"/>	<input type="checkbox"/>	1
	attacks on d5 : <input type="checkbox"/>	<input type="checkbox"/>	2
	attacks on e4 : <input type="checkbox"/>	<input type="checkbox"/>	3
	attacks on e5 : <input type="checkbox"/>	<input type="checkbox"/>	4
Has either side castled ? Write: C if already castled P if prepared to castle on next move T if temporarily unable to castle X if permanently not allowed to castle	<input type="checkbox"/>	<input type="checkbox"/>	5
In how many ways could each side make a capture on its next move?	<input type="checkbox"/>	<input type="checkbox"/>	6

In how many ways could each side **give check** on its next move?

White	Black	
<input type="checkbox"/>	<input type="checkbox"/>	7

How many men from each side have **more attackers than they have defenders**? **

<input type="checkbox"/>	<input type="checkbox"/>	8
--------------------------	--------------------------	---

Who has **more material** on the board?

<input type="checkbox"/>	<input type="checkbox"/>	9
--------------------------	--------------------------	---

Write: + if the side is ahead in material
 - if the side is behind in material
 = if the side is equal in material

How active are the **minor pieces** of each side?

King-side	White	Black	
	<input type="checkbox"/>	<input type="checkbox"/>	10

Write: **H** if still on Home Square
C if Captured
P if Pinned
D if Developed

King-side	White	Black	
	<input type="checkbox"/>	<input type="checkbox"/>	11

Queen-side	White	Black	
	<input type="checkbox"/>	<input type="checkbox"/>	12

Queen-side	White	Black	
	<input type="checkbox"/>	<input type="checkbox"/>	13

Does either side have any pawns which are **isolated**? (Y or N)

<input type="checkbox"/>	<input type="checkbox"/>	14
--------------------------	--------------------------	----

Does either side have any pawns which are **doubled**? (Y or N)

<input type="checkbox"/>	<input type="checkbox"/>	15
--------------------------	--------------------------	----

Does either side have a **rook positioned on an opened file**? (Y or N)

<input type="checkbox"/>	<input type="checkbox"/>	16
--------------------------	--------------------------	----

Does either side have a **rook on file d or file e**? (Y or N)

<input type="checkbox"/>	<input type="checkbox"/>	17
--------------------------	--------------------------	----

What **moves do you suggest for BLACK** from the imagined position?

_____	18
-------	----

(List 1 or 2 possible moves.)
 For Question 20, write the best reply you see for the move you listed on line 18.

_____	19
_____	20

Twenty Questions


Problem 78

NAME: _____

DATE: _____

Copyright © 1998-2003

Photocopying this form for instructional use is permitted.



Black just played f5.

To reach POSITION 78, start from the diagram above and picture the moves 1) h3 Nxc3.

Focus on this imagined position while answering the 20 questions:

	White	Black	
How many times is each side attacking the four central squares: d4, d5, e4, and e5? **	attacks on d4: <input type="checkbox"/>	<input type="checkbox"/>	1
	attacks on d5: <input type="checkbox"/>	<input type="checkbox"/>	2
	attacks on e4: <input type="checkbox"/>	<input type="checkbox"/>	3
	attacks on e5: <input type="checkbox"/>	<input type="checkbox"/>	4
Has either side castled ? Write: C if already castled P if prepared to castle on next move T if temporarily unable to castle X if permanently not allowed to castle	<input type="checkbox"/>	<input type="checkbox"/>	5
In how many ways could each side make a capture on its next move?	<input type="checkbox"/>	<input type="checkbox"/>	6

In how many ways could each side **give check** on its next move?

White	Black	
<input type="checkbox"/>	<input type="checkbox"/>	7

How many men from each side have **more attackers than they have defenders**? **

<input type="checkbox"/>	<input type="checkbox"/>	8
--------------------------	--------------------------	---

Who has **more material** on the board?

Write: + if the side is ahead in material
 - if the side is behind in material
 = if the side is equal in material

<input type="checkbox"/>	<input type="checkbox"/>	9
--------------------------	--------------------------	---

How active are the **minor pieces** of each side?

Write: **H** if still on Home Square
C if Captured
P if Pinned
D if Developed

King-side	White	Black	
	<input type="checkbox"/>	<input type="checkbox"/>	10
King-side	White	Black	
	<input type="checkbox"/>	<input type="checkbox"/>	11
Queen-side	White	Black	
	<input type="checkbox"/>	<input type="checkbox"/>	12
Queen-side	White	Black	
	<input type="checkbox"/>	<input type="checkbox"/>	13

Does either side have any pawns which are **isolated**? (Y or N)

<input type="checkbox"/>	<input type="checkbox"/>	14
--------------------------	--------------------------	----

Does either side have any pawns which are **doubled**? (Y or N)

<input type="checkbox"/>	<input type="checkbox"/>	15
--------------------------	--------------------------	----

Does either side have a **rook positioned on an opened file**? (Y or N)

<input type="checkbox"/>	<input type="checkbox"/>	16
--------------------------	--------------------------	----

Does either side have a **rook on file d or file e**? (Y or N)

<input type="checkbox"/>	<input type="checkbox"/>	17
--------------------------	--------------------------	----

What **moves do you suggest for WHITE** from the imagined position?

_____	18
_____	19

(List 1 or 2 possible moves.)
 For Question 20, write the best reply you see for the move you listed on line 18.

_____	20
-------	----

Twenty Questions


Problem 79

NAME: _____

DATE: _____

Copyright © 1998-2003

Photocopying this form for instructional use is permitted.



White just played **Bxc6**.

To reach **POSITION 79**, start from the diagram above and picture the moves **1) ... bxc6**, **2) dxe5**.

Focus on this imagined position while answering the 20 questions:

	White	Black	
How many times is each side attacking the four central squares : d4, d5, e4, and e5? **	attacks on d4 : <input type="checkbox"/>	<input type="checkbox"/>	1
	attacks on d5 : <input type="checkbox"/>	<input type="checkbox"/>	2
	attacks on e4 : <input type="checkbox"/>	<input type="checkbox"/>	3
	attacks on e5 : <input type="checkbox"/>	<input type="checkbox"/>	4
Has either side castled ? Write: C if already castled P if prepared to castle on next move T if temporarily unable to castle X if permanently not allowed to castle	<input type="checkbox"/>	<input type="checkbox"/>	5
In how many ways could each side make a capture on its next move?	<input type="checkbox"/>	<input type="checkbox"/>	6

In how many ways could each side **give check** on its next move?

White	Black	
<input type="checkbox"/>	<input type="checkbox"/>	7

How many men from each side have **more attackers than they have defenders**? **

<input type="checkbox"/>	<input type="checkbox"/>	8
--------------------------	--------------------------	---

Who has **more material** on the board?

Write: + if the side is ahead in material
 - if the side is behind in material
 = if the side is equal in material

<input type="checkbox"/>	<input type="checkbox"/>	9
--------------------------	--------------------------	---

How active are the **minor pieces** of each side?

Write: **H** if still on *Home Square*
C if *Captured*
P if *Pinned*
D if *Developed*

King-side	King-side	
<input type="checkbox"/>	<input type="checkbox"/>	10
King-side	<input type="checkbox"/>	11
Queen-side	<input type="checkbox"/>	12
Queen-side	<input type="checkbox"/>	13

Does either side have any pawns which are **isolated**? (Y or N)

<input type="checkbox"/>	<input type="checkbox"/>	14
--------------------------	--------------------------	----

Does either side have any pawns which are **doubled**? (Y or N)

<input type="checkbox"/>	<input type="checkbox"/>	15
--------------------------	--------------------------	----

Does either side have a **rook positioned on an opened file**? (Y or N)

<input type="checkbox"/>	<input type="checkbox"/>	16
--------------------------	--------------------------	----

Does either side have a **rook on file d or file e**? (Y or N)

<input type="checkbox"/>	<input type="checkbox"/>	17
--------------------------	--------------------------	----

What **moves do you suggest for BLACK** from the imagined position?

(List 1 or 2 possible moves.)
 For Question 20, write the best reply you see for the move you listed on line 18.

_____	18
_____	19
_____	20

Twenty Questions


Problem 80

NAME: _____

DATE: _____

Copyright © 1998-2003

Photocopying this form for instructional use is permitted.



White just played Nc3.

To reach POSITION 80, start from the diagram above and picture the moves 1) ... e6, 2) g4.

Focus on this imagined position while answering the 20 questions:

	White	Black	
How many times is each side attacking the four central squares : d4, d5, e4, and e5? **	attacks on d4 : <input type="checkbox"/>	<input type="checkbox"/>	1
	attacks on d5 : <input type="checkbox"/>	<input type="checkbox"/>	2
	attacks on e4 : <input type="checkbox"/>	<input type="checkbox"/>	3
	attacks on e5 : <input type="checkbox"/>	<input type="checkbox"/>	4
Has either side castled ? Write: C if already castled P if prepared to castle on next move T if temporarily unable to castle X if permanently not allowed to castle	<input type="checkbox"/>	<input type="checkbox"/>	5
In how many ways could each side make a capture on its next move?	<input type="checkbox"/>	<input type="checkbox"/>	6

	White	Black	
In how many ways could each side give check on its next move?	<input type="checkbox"/>	<input type="checkbox"/>	7
How many men from each side have more attackers than they have defenders ? **	<input type="checkbox"/>	<input type="checkbox"/>	8
Who has more material on the board? Write: + if the side is ahead in material - if the side is behind in material = if the side is equal in material	<input type="checkbox"/>	<input type="checkbox"/>	9
How active are the minor pieces of each side? Write: H if still on Home Square C if Captured P if Pinned D if Developed	King-side <input type="checkbox"/>	<input type="checkbox"/>	10
	King-side <input type="checkbox"/>	<input type="checkbox"/>	11
	Queen-side <input type="checkbox"/>	<input type="checkbox"/>	12
	Queen-side <input type="checkbox"/>	<input type="checkbox"/>	13
Does either side have any pawns which are isolated ? (Y or N)	<input type="checkbox"/>	<input type="checkbox"/>	14
Does either side have any pawns which are doubled ? (Y or N)	<input type="checkbox"/>	<input type="checkbox"/>	15
Does either side have a rook positioned on an opened file ? (Y or N)	<input type="checkbox"/>	<input type="checkbox"/>	16
Does either side have a rook on file d or file e ? (Y or N)	<input type="checkbox"/>	<input type="checkbox"/>	17
What moves do you suggest for BLACK from the imagined position? (List 1 or 2 possible moves.) For Question 20, write the best reply you see for the move you listed on line 18.	_____	_____	18
	_____	_____	19
	_____	_____	20

Twenty Questions


Problem 81

NAME: _____

DATE: _____

Copyright © 1998-2003

Photocopying this form for instructional use is permitted.



White just played dxc5.

To reach POSITION 81, start from the diagram above and picture the moves 1) ... Naxc5, 2) b4.

Focus on this imagined position while answering the 20 questions:

	White	Black	
How many times is each side attacking the four central squares : d4, d5, e4, and e5? **	attacks on d4 : <input type="checkbox"/>	<input type="checkbox"/>	1
	attacks on d5 : <input type="checkbox"/>	<input type="checkbox"/>	2
	attacks on e4 : <input type="checkbox"/>	<input type="checkbox"/>	3
	attacks on e5 : <input type="checkbox"/>	<input type="checkbox"/>	4
Has either side castled ? Write: C if already castled P if prepared to castle on next move T if temporarily unable to castle X if permanently not allowed to castle	<input type="checkbox"/>	<input type="checkbox"/>	5
In how many ways could each side make a capture on its next move?	<input type="checkbox"/>	<input type="checkbox"/>	6

	White	Black	
In how many ways could each side give check on its next move?	<input type="checkbox"/>	<input type="checkbox"/>	7
How many men from each side have more attackers than they have defenders ? **	<input type="checkbox"/>	<input type="checkbox"/>	8
Who has more material on the board? Write: + if the side is ahead in material - if the side is behind in material = if the side is equal in material	<input type="checkbox"/>	<input type="checkbox"/>	9
How active are the minor pieces of each side? Write: H if still on Home Square C if Captured P if Pinned D if Developed	King-side <input type="checkbox"/>	<input type="checkbox"/>	10
	King-side <input type="checkbox"/>	<input type="checkbox"/>	11
	Queen-side <input type="checkbox"/>	<input type="checkbox"/>	12
	Queen-side <input type="checkbox"/>	<input type="checkbox"/>	13
Does either side have any pawns which are isolated ? (Y or N)	<input type="checkbox"/>	<input type="checkbox"/>	14
Does either side have any pawns which are doubled ? (Y or N)	<input type="checkbox"/>	<input type="checkbox"/>	15
Does either side have a rook positioned on an opened file ? (Y or N)	<input type="checkbox"/>	<input type="checkbox"/>	16
Does either side have a rook on file d or file e ? (Y or N)	<input type="checkbox"/>	<input type="checkbox"/>	17
What moves do you suggest for BLACK from the imagined position? (List 1 or 2 possible moves.) For Question 20, write the best reply you see for the move you listed on line 18.	_____	_____	18
	_____	_____	19
	_____	_____	20

Twenty Questions


Problem 82

NAME: _____

DATE: _____

Copyright © 1998-2003

Photocopying this form for instructional use is permitted.



Black just played Nxe5.

To reach POSITION 82, start from the diagram above and picture the moves 1) dxex5 Nd7.

Focus on this imagined position while answering the 20 questions:

	White	Black	
How many times is each side attacking the four central squares: d4, d5, e4, and e5? **	attacks on d4:	<input type="checkbox"/>	<input type="checkbox"/>
	attacks on d5:	<input type="checkbox"/>	<input type="checkbox"/>
	attacks on e4:	<input type="checkbox"/>	<input type="checkbox"/>
	attacks on e5:	<input type="checkbox"/>	<input type="checkbox"/>
Has either side castled ?	<input type="checkbox"/>	<input type="checkbox"/>	
Write: C if already castled P if prepared to castle on next move T if temporarily unable to castle X if permanently not allowed to castle			
In how many ways could each side make a capture on its next move?	<input type="checkbox"/>	<input type="checkbox"/>	

	White	Black	
In how many ways could each side give check on its next move?	<input type="checkbox"/>	<input type="checkbox"/>	7
How many men from each side have more attackers than they have defenders ? **	<input type="checkbox"/>	<input type="checkbox"/>	8
Who has more material on the board? Write: + if the side is ahead in material - if the side is behind in material = if the side is equal in material	<input type="checkbox"/>	<input type="checkbox"/>	9
How active are the minor pieces of each side? Write: H if still on Home Square C if Captured P if Pinned D if Developed	King-side 	<input type="checkbox"/>	<input type="checkbox"/>
	King-side 	<input type="checkbox"/>	<input type="checkbox"/>
	Queen-side 	<input type="checkbox"/>	<input type="checkbox"/>
	Queen-side 	<input type="checkbox"/>	<input type="checkbox"/>
Does either side have any pawns which are isolated ? (Y or N)	<input type="checkbox"/>	<input type="checkbox"/>	14
Does either side have any pawns which are doubled ? (Y or N)	<input type="checkbox"/>	<input type="checkbox"/>	15
Does either side have a rook positioned on an opened file ? (Y or N)	<input type="checkbox"/>	<input type="checkbox"/>	16
Does either side have a rook on file d or file e ? (Y or N)	<input type="checkbox"/>	<input type="checkbox"/>	17
What moves do you suggest for WHITE from the imagined position? (List 1 or 2 possible moves.) For Question 20, write the best reply you see for the move you listed on line 18.			18
			19
			20

Twenty Questions


Problem 83

NAME: _____

DATE: _____

Copyright © 1998-2003

Photocopying this form for instructional use is permitted.



White just played Qf3+.

To reach POSITION 83, start from the diagram above and picture the moves 1) ... Ke6, 2) Nc3.

Focus on this imagined position while answering the 20 questions:

	White	Black	
How many times is each side attacking the four central squares: d4, d5, e4, and e5? **	attacks on d4: <input type="checkbox"/>	<input type="checkbox"/>	1
	attacks on d5: <input type="checkbox"/>	<input type="checkbox"/>	2
	attacks on e4: <input type="checkbox"/>	<input type="checkbox"/>	3
	attacks on e5: <input type="checkbox"/>	<input type="checkbox"/>	4
Has either side castled ? Write: C if already castled P if prepared to castle on next move T if temporarily unable to castle X if permanently not allowed to castle	<input type="checkbox"/>	<input type="checkbox"/>	5
In how many ways could each side make a capture on its next move?	<input type="checkbox"/>	<input type="checkbox"/>	6

	White	Black	
In how many ways could each side give check on its next move?	<input type="checkbox"/>	<input type="checkbox"/>	7
How many men from each side have more attackers than they have defenders ? **	<input type="checkbox"/>	<input type="checkbox"/>	8
Who has more material on the board? Write: + if the side is ahead in material - if the side is behind in material = if the side is equal in material	<input type="checkbox"/>	<input type="checkbox"/>	9
How active are the minor pieces of each side? Write: H if still on Home Square C if Captured P if Pinned D if Developed	King-side <input type="checkbox"/>	<input type="checkbox"/>	10
	King-side <input type="checkbox"/>	<input type="checkbox"/>	11
	Queen-side <input type="checkbox"/>	<input type="checkbox"/>	12
	Queen-side <input type="checkbox"/>	<input type="checkbox"/>	13
Does either side have any pawns which are isolated ? (Y or N)	<input type="checkbox"/>	<input type="checkbox"/>	14
Does either side have any pawns which are doubled ? (Y or N)	<input type="checkbox"/>	<input type="checkbox"/>	15
Does either side have a rook positioned on an opened file ? (Y or N)	<input type="checkbox"/>	<input type="checkbox"/>	16
Does either side have a rook on file d or file e ? (Y or N)	<input type="checkbox"/>	<input type="checkbox"/>	17
What moves do you suggest for BLACK from the imagined position? (List 1 or 2 possible moves.) For Question 20, write the best reply you see for the move you listed on line 18.	_____	_____	18
	_____	_____	19
	_____	_____	20

Twenty Questions


Problem 84

NAME: _____

DATE: _____

Copyright © 1998-2003

Photocopying this form for instructional use is permitted.



Black just played Nc6.

To reach POSITION 84, start from the diagram above and picture the moves 1) Qa4 f4.

Focus on this imagined position while answering the 20 questions:

	White	Black	
How many times is each side attacking the four central squares : d4, d5, e4, and e5? **	attacks on d4 : <input type="checkbox"/>	<input type="checkbox"/>	1
	attacks on d5 : <input type="checkbox"/>	<input type="checkbox"/>	2
	attacks on e4 : <input type="checkbox"/>	<input type="checkbox"/>	3
	attacks on e5 : <input type="checkbox"/>	<input type="checkbox"/>	4
Has either side castled ? Write: C if already castled P if prepared to castle on next move T if temporarily unable to castle X if permanently not allowed to castle	<input type="checkbox"/>	<input type="checkbox"/>	5
In how many ways could each side make a capture on its next move?	<input type="checkbox"/>	<input type="checkbox"/>	6

	White	Black	
In how many ways could each side give check on its next move?	<input type="checkbox"/>	<input type="checkbox"/>	7
How many men from each side have more attackers than they have defenders ? **	<input type="checkbox"/>	<input type="checkbox"/>	8
Who has more material on the board? Write: + if the side is ahead in material - if the side is behind in material = if the side is equal in material	<input type="checkbox"/>	<input type="checkbox"/>	9
How active are the minor pieces of each side? Write: H if still on Home Square C if Captured P if Pinned D if Developed	King-side <input type="checkbox"/>	<input type="checkbox"/>	10
	King-side <input type="checkbox"/>	<input type="checkbox"/>	11
	Queen-side <input type="checkbox"/>	<input type="checkbox"/>	12
	Queen-side <input type="checkbox"/>	<input type="checkbox"/>	13
Does either side have any pawns which are isolated ? (Y or N)	<input type="checkbox"/>	<input type="checkbox"/>	14
Does either side have any pawns which are doubled ? (Y or N)	<input type="checkbox"/>	<input type="checkbox"/>	15
Does either side have a rook positioned on an opened file ? (Y or N)	<input type="checkbox"/>	<input type="checkbox"/>	16
Does either side have a rook on file d or file e ? (Y or N)	<input type="checkbox"/>	<input type="checkbox"/>	17
What moves do you suggest for WHITE from the imagined position? <i>(List 1 or 2 possible moves.)</i> <i>For Question 20, write the best reply you see for the move you listed on line 18.</i>	_____	_____	18
	_____	_____	19
	_____	_____	20

Twenty Questions


Problem 85

NAME: _____

DATE: _____

Copyright © 1998-2003

Photocopying this form for instructional use is permitted.



Black just played Nf6.

To reach POSITION 85, start from the diagram above and picture the moves 1) 0-0 Nxe4.

Focus on this imagined position while answering the 20 questions:

	White	Black	
How many times is each side attacking the four central squares : d4, d5, e4, and e5? **	attacks on d4 : <input type="checkbox"/>	<input type="checkbox"/>	1
	attacks on d5 : <input type="checkbox"/>	<input type="checkbox"/>	2
	attacks on e4 : <input type="checkbox"/>	<input type="checkbox"/>	3
	attacks on e5 : <input type="checkbox"/>	<input type="checkbox"/>	4
Has either side castled ? Write: C if already castled P if prepared to castle on next move T if temporarily unable to castle X if permanently not allowed to castle	<input type="checkbox"/>	<input type="checkbox"/>	5
In how many ways could each side make a capture on its next move?	<input type="checkbox"/>	<input type="checkbox"/>	6

	White	Black	
In how many ways could each side give check on its next move?	<input type="checkbox"/>	<input type="checkbox"/>	7
How many men from each side have more attackers than they have defenders ? **	<input type="checkbox"/>	<input type="checkbox"/>	8
Who has more material on the board? Write: + if the side is ahead in material - if the side is behind in material = if the side is equal in material	<input type="checkbox"/>	<input type="checkbox"/>	9
How active are the minor pieces of each side? Write: H if still on Home Square C if Captured P if Pinned D if Developed	King-side <input type="checkbox"/>	<input type="checkbox"/>	10
	King-side <input type="checkbox"/>	<input type="checkbox"/>	11
	Queen-side <input type="checkbox"/>	<input type="checkbox"/>	12
	Queen-side <input type="checkbox"/>	<input type="checkbox"/>	13
Does either side have any pawns which are isolated ? (Y or N)	<input type="checkbox"/>	<input type="checkbox"/>	14
Does either side have any pawns which are doubled ? (Y or N)	<input type="checkbox"/>	<input type="checkbox"/>	15
Does either side have a rook positioned on an opened file ? (Y or N)	<input type="checkbox"/>	<input type="checkbox"/>	16
Does either side have a rook on file d or file e ? (Y or N)	<input type="checkbox"/>	<input type="checkbox"/>	17
What moves do you suggest for WHITE from the imagined position? (List 1 or 2 possible moves.) For Question 20, write the best reply you see for the move you listed on line 18.	_____	_____	18
	_____	_____	19
	_____	_____	20

Twenty Questions


Problem 86

NAME: _____

DATE: _____

Copyright © 1998-2003

Photocopying this form for instructional use is permitted.



White just played 0-0-0.

To reach **POSITION 86**, start from the diagram above and picture the moves 1) ... h5, 2) dxc5.

Focus on this imagined position while answering the 20 questions:

	White	Black	
How many times is each side attacking the four central squares : d4, d5, e4, and e5? **	attacks on d4 : <input type="checkbox"/>	<input type="checkbox"/>	1
	attacks on d5 : <input type="checkbox"/>	<input type="checkbox"/>	2
	attacks on e4 : <input type="checkbox"/>	<input type="checkbox"/>	3
	attacks on e5 : <input type="checkbox"/>	<input type="checkbox"/>	4
Has either side castled ? Write: C if already castled P if prepared to castle on next move T if temporarily unable to castle X if permanently not allowed to castle	<input type="checkbox"/>	<input type="checkbox"/>	5
In how many ways could each side make a capture on its next move?	<input type="checkbox"/>	<input type="checkbox"/>	6

	White	Black	
In how many ways could each side give check on its next move?	<input type="checkbox"/>	<input type="checkbox"/>	7
How many men from each side have more attackers than they have defenders ? **	<input type="checkbox"/>	<input type="checkbox"/>	8
Who has more material on the board? Write: + if the side is ahead in material - if the side is behind in material = if the side is equal in material	<input type="checkbox"/>	<input type="checkbox"/>	9
How active are the minor pieces of each side? Write: H if still on Home Square C if Captured P if Pinned D if Developed	King-side <input type="checkbox"/>	<input type="checkbox"/>	10
	King-side <input type="checkbox"/>	<input type="checkbox"/>	11
	Queen-side <input type="checkbox"/>	<input type="checkbox"/>	12
	Queen-side <input type="checkbox"/>	<input type="checkbox"/>	13
Does either side have any pawns which are isolated ? (Y or N)	<input type="checkbox"/>	<input type="checkbox"/>	14
Does either side have any pawns which are doubled ? (Y or N)	<input type="checkbox"/>	<input type="checkbox"/>	15
Does either side have a rook positioned on an opened file ? (Y or N)	<input type="checkbox"/>	<input type="checkbox"/>	16
Does either side have a rook on file d or file e ? (Y or N)	<input type="checkbox"/>	<input type="checkbox"/>	17
What moves do you suggest for BLACK from the imagined position? <i>(List 1 or 2 possible moves.)</i> <i>For Question 20, write the best reply you see for the move you listed on line 18.</i>	_____	_____	18
	_____	_____	19
	_____	_____	20

Twenty Questions


Problem 87

NAME: _____

DATE: _____

Copyright © 1998-2003

Photocopying this form for instructional use is permitted.



White just played **Bf4**.

To reach **POSITION 87**, start from the diagram above and picture the moves **1) ... d5**,
2) f3.

Focus on this imagined position while answering the 20 questions:

	White	Black	
How many times is each side attacking the four central squares : d4, d5, e4, and e5? **	attacks on d4 : <input type="checkbox"/>	<input type="checkbox"/>	1
	attacks on d5 : <input type="checkbox"/>	<input type="checkbox"/>	2
	attacks on e4 : <input type="checkbox"/>	<input type="checkbox"/>	3
	attacks on e5 : <input type="checkbox"/>	<input type="checkbox"/>	4
Has either side castled ?	<input type="checkbox"/>	<input type="checkbox"/>	5
Write: C if already castled P if prepared to castle on next move T if temporarily unable to castle X if permanently not allowed to castle			
In how many ways could each side make a capture on its next move?	<input type="checkbox"/>	<input type="checkbox"/>	6

	White	Black	
In how many ways could each side give check on its next move?	<input type="checkbox"/>	<input type="checkbox"/>	7
How many men from each side have more attackers than they have defenders ? **	<input type="checkbox"/>	<input type="checkbox"/>	8
Who has more material on the board?	<input type="checkbox"/>	<input type="checkbox"/>	9
Write: + if the side is ahead in material - if the side is behind in material = if the side is equal in material			
How active are the minor pieces of each side?	King-side <input type="checkbox"/>	<input type="checkbox"/>	10
	King-side <input type="checkbox"/>	<input type="checkbox"/>	11
	Queen-side <input type="checkbox"/>	<input type="checkbox"/>	12
	Queen-side <input type="checkbox"/>	<input type="checkbox"/>	13
Does either side have any pawns which are isolated ? (Y or N)	<input type="checkbox"/>	<input type="checkbox"/>	14
Does either side have any pawns which are doubled ? (Y or N)	<input type="checkbox"/>	<input type="checkbox"/>	15
Does either side have a rook positioned on an opened file ? (Y or N)	<input type="checkbox"/>	<input type="checkbox"/>	16
Does either side have a rook on file d or file e ? (Y or N)	<input type="checkbox"/>	<input type="checkbox"/>	17
What moves do you suggest for BLACK from the imagined position?			18
(List 1 or 2 possible moves.)			19
For Question 20, write the best reply you see for the move you listed on line 18.			20

Twenty Questions


Problem 88

NAME: _____

DATE: _____

Copyright © 1998-2003

Photocopying this form for instructional use is permitted.



Black just played f5.

To reach POSITION 88, start from the diagram above and picture the moves 1) h4 c4.

Focus on this imagined position while answering the 20 questions:

	White	Black	
How many times is each side attacking the four central squares: d4, d5, e4, and e5? **	attacks on d4: <input type="checkbox"/>	<input type="checkbox"/>	1
	attacks on d5: <input type="checkbox"/>	<input type="checkbox"/>	2
	attacks on e4: <input type="checkbox"/>	<input type="checkbox"/>	3
	attacks on e5: <input type="checkbox"/>	<input type="checkbox"/>	4
Has either side castled ? Write: C if already castled P if prepared to castle on next move T if temporarily unable to castle X if permanently not allowed to castle	<input type="checkbox"/>	<input type="checkbox"/>	5
In how many ways could each side make a capture on its next move?	<input type="checkbox"/>	<input type="checkbox"/>	6

	White	Black	
In how many ways could each side give check on its next move?	<input type="checkbox"/>	<input type="checkbox"/>	7
How many men from each side have more attackers than they have defenders ? **	<input type="checkbox"/>	<input type="checkbox"/>	8
Who has more material on the board? Write: + if the side is ahead in material - if the side is behind in material = if the side is equal in material	<input type="checkbox"/>	<input type="checkbox"/>	9
How active are the minor pieces of each side? Write: H if still on Home Square C if Captured P if Pinned D if Developed	King-side <input type="checkbox"/>	<input type="checkbox"/>	10
	King-side <input type="checkbox"/>	<input type="checkbox"/>	11
	Queen-side <input type="checkbox"/>	<input type="checkbox"/>	12
	Queen-side <input type="checkbox"/>	<input type="checkbox"/>	13
Does either side have any pawns which are isolated ? (Y or N)	<input type="checkbox"/>	<input type="checkbox"/>	14
Does either side have any pawns which are doubled ? (Y or N)	<input type="checkbox"/>	<input type="checkbox"/>	15
Does either side have a rook positioned on an opened file ? (Y or N)	<input type="checkbox"/>	<input type="checkbox"/>	16
Does either side have a rook on file d or file e ? (Y or N)	<input type="checkbox"/>	<input type="checkbox"/>	17
What moves do you suggest for WHITE from the imagined position? (List 1 or 2 possible moves.) For Question 20, write the best reply you see for the move you listed on line 18.	_____		18
	_____		19
	_____		20

Twenty Questions


Problem 89

NAME: _____

DATE: _____

Copyright © 1998-2003

Photocopying this form for instructional use is permitted.



White just played b4.

To reach **POSITION 89**, start from the diagram above and picture the moves 1) ... Na6, 2) Bd3.

Focus on this imagined position while answering the 20 questions:

	White	Black	
How many times is each side attacking the four central squares : d4, d5, e4, and e5? **	attacks on d4 : <input type="checkbox"/>	<input type="checkbox"/>	1
	attacks on d5 : <input type="checkbox"/>	<input type="checkbox"/>	2
	attacks on e4 : <input type="checkbox"/>	<input type="checkbox"/>	3
	attacks on e5 : <input type="checkbox"/>	<input type="checkbox"/>	4
Has either side castled ? Write: C if already castled P if prepared to castle on next move T if temporarily unable to castle X if permanently not allowed to castle	<input type="checkbox"/>	<input type="checkbox"/>	5
In how many ways could each side make a capture on its next move?	<input type="checkbox"/>	<input type="checkbox"/>	6

	White	Black	
In how many ways could each side give check on its next move?	<input type="checkbox"/>	<input type="checkbox"/>	7
How many men from each side have more attackers than they have defenders ? **	<input type="checkbox"/>	<input type="checkbox"/>	8
Who has more material on the board? Write: + if the side is ahead in material - if the side is behind in material = if the side is equal in material	<input type="checkbox"/>	<input type="checkbox"/>	9
How active are the minor pieces of each side? Write: H if still on Home Square C if Captured P if Pinned D if Developed	King-side <input type="checkbox"/>	<input type="checkbox"/>	10
	King-side <input type="checkbox"/>	<input type="checkbox"/>	11
	Queen-side <input type="checkbox"/>	<input type="checkbox"/>	12
	Queen-side <input type="checkbox"/>	<input type="checkbox"/>	13
Does either side have any pawns which are isolated ? (Y or N)	<input type="checkbox"/>	<input type="checkbox"/>	14
Does either side have any pawns which are doubled ? (Y or N)	<input type="checkbox"/>	<input type="checkbox"/>	15
Does either side have a rook positioned on an opened file ? (Y or N)	<input type="checkbox"/>	<input type="checkbox"/>	16
Does either side have a rook on file d or file e ? (Y or N)	<input type="checkbox"/>	<input type="checkbox"/>	17
What moves do you suggest for BLACK from the imagined position? (List 1 or 2 possible moves.) For Question 20, write the best reply you see for the move you listed on line 18.	_____	_____	18
	_____	_____	19
	_____	_____	20

Twenty Questions


Problem 90

NAME: _____

DATE: _____

Copyright © 1998-2003

Photocopying this form for instructional use is permitted.



White just played h3.

To reach **POSITION 90**, start from the diagram above and picture the moves 1) ... Nxc3, 2) bxc3.

Focus on this imagined position while answering the 20 questions:

	White	Black	
How many times is each side attacking the four central squares : d4, d5, e4, and e5? **	attacks on d4 : <input type="checkbox"/>	<input type="checkbox"/>	1
	attacks on d5 : <input type="checkbox"/>	<input type="checkbox"/>	2
	attacks on e4 : <input type="checkbox"/>	<input type="checkbox"/>	3
	attacks on e5 : <input type="checkbox"/>	<input type="checkbox"/>	4
Has either side castled ? Write: C if already castled P if prepared to castle on next move T if temporarily unable to castle X if permanently not allowed to castle	<input type="checkbox"/>	<input type="checkbox"/>	5
In how many ways could each side make a capture on its next move?	<input type="checkbox"/>	<input type="checkbox"/>	6

	White	Black	
In how many ways could each side give check on its next move?	<input type="checkbox"/>	<input type="checkbox"/>	7
How many men from each side have more attackers than they have defenders ? **	<input type="checkbox"/>	<input type="checkbox"/>	8
Who has more material on the board? Write: + if the side is ahead in material - if the side is behind in material = if the side is equal in material	<input type="checkbox"/>	<input type="checkbox"/>	9
How active are the minor pieces of each side? Write: H if still on Home Square C if Captured P if Pinned D if Developed	King-side <input type="checkbox"/>	<input type="checkbox"/>	10
	King-side <input type="checkbox"/>	<input type="checkbox"/>	11
	Queen-side <input type="checkbox"/>	<input type="checkbox"/>	12
	Queen-side <input type="checkbox"/>	<input type="checkbox"/>	13
Does either side have any pawns which are isolated ? (Y or N)	<input type="checkbox"/>	<input type="checkbox"/>	14
Does either side have any pawns which are doubled ? (Y or N)	<input type="checkbox"/>	<input type="checkbox"/>	15
Does either side have a rook positioned on an opened file ? (Y or N)	<input type="checkbox"/>	<input type="checkbox"/>	16
Does either side have a rook on file d or file e ? (Y or N)	<input type="checkbox"/>	<input type="checkbox"/>	17
What moves do you suggest for BLACK from the imagined position? (List 1 or 2 possible moves.) For Question 20, write the best reply you see for the move you listed on line 18.	_____	_____	18
	_____	_____	19
	_____	_____	20

Twenty Questions


Problem 91

NAME: _____

DATE: _____

Copyright © 1998-2003

Photocopying this form for instructional use is permitted.



White is about to try the English Opening!

To reach POSITION 91, start from the diagram above and picture the moves 1) c4 e5, 2) Nf3.

Focus on this imagined position while answering the 20 questions:

	White	Black	
How many times is each side attacking the four central squares : d4, d5, e4, and e5? **	attacks on d4 : <input type="checkbox"/>	<input type="checkbox"/>	1
	attacks on d5 : <input type="checkbox"/>	<input type="checkbox"/>	2
	attacks on e4 : <input type="checkbox"/>	<input type="checkbox"/>	3
	attacks on e5 : <input type="checkbox"/>	<input type="checkbox"/>	4
Has either side castled ? Write: C if already castled P if prepared to castle on next move T if temporarily unable to castle X if permanently not allowed to castle	<input type="checkbox"/>	<input type="checkbox"/>	5
In how many ways could each side make a capture on its next move?	<input type="checkbox"/>	<input type="checkbox"/>	6

	White	Black	
In how many ways could each side give check on its next move?	<input type="checkbox"/>	<input type="checkbox"/>	7
How many men from each side have more attackers than they have defenders ? **	<input type="checkbox"/>	<input type="checkbox"/>	8
Who has more material on the board? Write: + if the side is ahead in material - if the side is behind in material = if the side is equal in material	<input type="checkbox"/>	<input type="checkbox"/>	9
How active are the minor pieces of each side? Write: H if still on Home Square C if Captured P if Pinned D if Developed	King-side <input type="checkbox"/>	<input type="checkbox"/>	10
	King-side <input type="checkbox"/>	<input type="checkbox"/>	11
	Queen-side <input type="checkbox"/>	<input type="checkbox"/>	12
	Queen-side <input type="checkbox"/>	<input type="checkbox"/>	13
Does either side have any pawns which are isolated ? (Y or N)	<input type="checkbox"/>	<input type="checkbox"/>	14
Does either side have any pawns which are doubled ? (Y or N)	<input type="checkbox"/>	<input type="checkbox"/>	15
Does either side have a rook positioned on an opened file ? (Y or N)	<input type="checkbox"/>	<input type="checkbox"/>	16
Does either side have a rook on file d or file e ? (Y or N)	<input type="checkbox"/>	<input type="checkbox"/>	17
What moves do you suggest for BLACK from the imagined position? (List 1 or 2 possible moves.) For Question 20, write the best reply you see for the move you listed on line 18.	_____		18
	_____		19
	_____		20

Twenty Questions


Problem 92

NAME: _____

DATE: _____

Copyright © 1998-2003

Photocopying this form for instructional use is permitted.



White just played Bf4.

To reach **POSITION 92**, start from the diagram above and picture the moves 1) ... Nbd7, 2) Nc3 Nb6.

Focus on this imagined position while answering the 20 questions:

	White	Black	
How many times is each side attacking the four central squares : d4, d5, e4, and e5? **	attacks on d4 : <input type="checkbox"/>	<input type="checkbox"/>	1
	attacks on d5 : <input type="checkbox"/>	<input type="checkbox"/>	2
	attacks on e4 : <input type="checkbox"/>	<input type="checkbox"/>	3
	attacks on e5 : <input type="checkbox"/>	<input type="checkbox"/>	4
Has either side castled ?	<input type="checkbox"/>	<input type="checkbox"/>	5
Write: C if already castled P if prepared to castle on next move T if temporarily unable to castle X if permanently not allowed to castle			
In how many ways could each side make a capture on its next move?	<input type="checkbox"/>	<input type="checkbox"/>	6

In how many ways could each side **give check** on its next move?

White	Black	
<input type="checkbox"/>	<input type="checkbox"/>	7

How many men from each side have **more attackers than they have defenders**? **

<input type="checkbox"/>	<input type="checkbox"/>	8
--------------------------	--------------------------	---

Who has **more material** on the board?

Write: + if the side is ahead in material
- if the side is behind in material
= if the side is equal in material

<input type="checkbox"/>	<input type="checkbox"/>	9
--------------------------	--------------------------	---

How active are the **minor pieces** of each side?

Write: **H** if still on *Home Square*
C if *Captured*
P if *Pinned*
D if *Developed*

King-side	<input type="checkbox"/>	<input type="checkbox"/>	10
King-side	<input type="checkbox"/>	<input type="checkbox"/>	11
Queen-side	<input type="checkbox"/>	<input type="checkbox"/>	12
Queen-side	<input type="checkbox"/>	<input type="checkbox"/>	13

Does either side have any pawns which are **isolated**? (Y or N)

<input type="checkbox"/>	<input type="checkbox"/>	14
--------------------------	--------------------------	----

Does either side have any pawns which are **doubled**? (Y or N)

<input type="checkbox"/>	<input type="checkbox"/>	15
--------------------------	--------------------------	----

Does either side have a **rook positioned on an opened file**? (Y or N)

<input type="checkbox"/>	<input type="checkbox"/>	16
--------------------------	--------------------------	----

Does either side have a **rook on file d or file e**? (Y or N)

<input type="checkbox"/>	<input type="checkbox"/>	17
--------------------------	--------------------------	----

What **moves do you suggest for WHITE** from the imagined position?

_____	18
_____	19

(List 1 or 2 possible moves.)
For Question 20, write the best reply you see for the move you listed on line 18.

_____	20
-------	----

Twenty Questions


Problem 93

NAME: _____

DATE: _____

Copyright © 1998-2003

Photocopying this form for instructional use is permitted.



Black just played d5.

To reach **POSITION 93**, start from the diagram above and picture the moves 1) 0-0-0 Bf6, 2) Bd4.

Focus on this imagined position while answering the 20 questions:

	White	Black	
How many times is each side attacking the four central squares : d4, d5, e4, and e5? **	attacks on d4 : <input type="checkbox"/>	<input type="checkbox"/>	1
	attacks on d5 : <input type="checkbox"/>	<input type="checkbox"/>	2
	attacks on e4 : <input type="checkbox"/>	<input type="checkbox"/>	3
	attacks on e5 : <input type="checkbox"/>	<input type="checkbox"/>	4
Has either side castled ? Write: C if already castled P if prepared to castle on next move T if temporarily unable to castle X if permanently not allowed to castle	<input type="checkbox"/>	<input type="checkbox"/>	5
In how many ways could each side make a capture on its next move?	<input type="checkbox"/>	<input type="checkbox"/>	6

	White	Black	
In how many ways could each side give check on its next move?	<input type="checkbox"/>	<input type="checkbox"/>	7
How many men from each side have more attackers than they have defenders ? **	<input type="checkbox"/>	<input type="checkbox"/>	8
Who has more material on the board? Write: + if the side is ahead in material - if the side is behind in material = if the side is equal in material	<input type="checkbox"/>	<input type="checkbox"/>	9
How active are the minor pieces of each side? Write: H if still on Home Square C if Captured P if Pinned D if Developed	King-side <input type="checkbox"/>	<input type="checkbox"/>	10
	King-side <input type="checkbox"/>	<input type="checkbox"/>	11
	Queen-side <input type="checkbox"/>	<input type="checkbox"/>	12
	Queen-side <input type="checkbox"/>	<input type="checkbox"/>	13
Does either side have any pawns which are isolated ? (Y or N)	<input type="checkbox"/>	<input type="checkbox"/>	14
Does either side have any pawns which are doubled ? (Y or N)	<input type="checkbox"/>	<input type="checkbox"/>	15
Does either side have a rook positioned on an opened file ? (Y or N)	<input type="checkbox"/>	<input type="checkbox"/>	16
Does either side have a rook on file d or file e ? (Y or N)	<input type="checkbox"/>	<input type="checkbox"/>	17
What moves do you suggest for BLACK from the imagined position? (List 1 or 2 possible moves.) For Question 20, write the best reply you see for the move you listed on line 18.	_____		18
	_____		19
	_____		20

Twenty Questions


Problem 94

NAME: _____

DATE: _____

Copyright © 1998-2003

Photocopying this form for instructional use is permitted.



Black just played a5.

To reach POSITION 94, start from the diagram above and picture the moves 1) Bd2 Rb8, 2) d4.

Focus on this imagined position while answering the 20 questions:

	White	Black	
How many times is each side attacking the four central squares : d4, d5, e4, and e5? **	attacks on d4 : <input type="checkbox"/>	<input type="checkbox"/>	1
	attacks on d5 : <input type="checkbox"/>	<input type="checkbox"/>	2
	attacks on e4 : <input type="checkbox"/>	<input type="checkbox"/>	3
	attacks on e5 : <input type="checkbox"/>	<input type="checkbox"/>	4
Has either side castled ? Write: C if already castled P if prepared to castle on next move T if temporarily unable to castle X if permanently not allowed to castle	<input type="checkbox"/>	<input type="checkbox"/>	5
In how many ways could each side make a capture on its next move?	<input type="checkbox"/>	<input type="checkbox"/>	6

	White	Black	
In how many ways could each side give check on its next move?	<input type="checkbox"/>	<input type="checkbox"/>	7
How many men from each side have more attackers than they have defenders ? **	<input type="checkbox"/>	<input type="checkbox"/>	8
Who has more material on the board? Write: + if the side is ahead in material - if the side is behind in material = if the side is equal in material	<input type="checkbox"/>	<input type="checkbox"/>	9
How active are the minor pieces of each side? Write: H if still on Home Square C if Captured P if Pinned D if Developed	King-side <input type="checkbox"/>	<input type="checkbox"/>	10
	King-side <input type="checkbox"/>	<input type="checkbox"/>	11
	Queen-side <input type="checkbox"/>	<input type="checkbox"/>	12
	Queen-side <input type="checkbox"/>	<input type="checkbox"/>	13
Does either side have any pawns which are isolated ? (Y or N)	<input type="checkbox"/>	<input type="checkbox"/>	14
Does either side have any pawns which are doubled ? (Y or N)	<input type="checkbox"/>	<input type="checkbox"/>	15
Does either side have a rook positioned on an opened file ? (Y or N)	<input type="checkbox"/>	<input type="checkbox"/>	16
Does either side have a rook on file d or file e ? (Y or N)	<input type="checkbox"/>	<input type="checkbox"/>	17
What moves do you suggest for BLACK from the imagined position? (List 1 or 2 possible moves.) For Question 20, write the best reply you see for the move you listed on line 18.	_____		18
	_____		19
	_____		20

Twenty Questions


Problem 95

NAME: _____

DATE: _____

Copyright © 1998-2003

Photocopying this form for instructional use is permitted.



Black just played d5.

To reach **POSITION 95**, start from the diagram above and picture the moves 1) Bg2 dxc4, 2) Nf3.

Focus on this imagined position while answering the 20 questions:

	White	Black	
How many times is each side attacking the four central squares : d4, d5, e4, and e5? **	attacks on d4 : <input type="checkbox"/>	<input type="checkbox"/>	1
	attacks on d5 : <input type="checkbox"/>	<input type="checkbox"/>	2
	attacks on e4 : <input type="checkbox"/>	<input type="checkbox"/>	3
	attacks on e5 : <input type="checkbox"/>	<input type="checkbox"/>	4
Has either side castled ? Write: C if already castled P if prepared to castle on next move T if temporarily unable to castle X if permanently not allowed to castle	<input type="checkbox"/>	<input type="checkbox"/>	5
In how many ways could each side make a capture on its next move?	<input type="checkbox"/>	<input type="checkbox"/>	6

	White	Black	
In how many ways could each side give check on its next move?	<input type="checkbox"/>	<input type="checkbox"/>	7
How many men from each side have more attackers than they have defenders ? **	<input type="checkbox"/>	<input type="checkbox"/>	8
Who has more material on the board? Write: + if the side is ahead in material - if the side is behind in material = if the side is equal in material	<input type="checkbox"/>	<input type="checkbox"/>	9
How active are the minor pieces of each side? Write: H if still on Home Square C if Captured P if Pinned D if Developed	King-side <input type="checkbox"/>	<input type="checkbox"/>	10
	King-side <input type="checkbox"/>	<input type="checkbox"/>	11
	Queen-side <input type="checkbox"/>	<input type="checkbox"/>	12
	Queen-side <input type="checkbox"/>	<input type="checkbox"/>	13
Does either side have any pawns which are isolated ? (Y or N)	<input type="checkbox"/>	<input type="checkbox"/>	14
Does either side have any pawns which are doubled ? (Y or N)	<input type="checkbox"/>	<input type="checkbox"/>	15
Does either side have a rook positioned on an opened file ? (Y or N)	<input type="checkbox"/>	<input type="checkbox"/>	16
Does either side have a rook on file d or file e ? (Y or N)	<input type="checkbox"/>	<input type="checkbox"/>	17
What moves do you suggest for BLACK from the imagined position? (List 1 or 2 possible moves.) For Question 20, write the best reply you see for the move you listed on line 18.	_____	_____	18
	_____	_____	19
	_____	_____	20

Twenty Questions


Problem 96

Copyright © 1998-2003

Photocopying this form for instructional use is permitted.

NAME: _____

DATE: _____



White just played d4.

To reach **POSITION 96**, start from the diagram above and picture the moves 1) ... cxd4, 2) Nxd4 Nf6.

Focus on this imagined position while answering the 20 questions:

	White	Black	
How many times is each side attacking the four central squares : d4, d5, e4, and e5? **	attacks on d4 : <input type="checkbox"/>	<input type="checkbox"/>	1
	attacks on d5 : <input type="checkbox"/>	<input type="checkbox"/>	2
	attacks on e4 : <input type="checkbox"/>	<input type="checkbox"/>	3
	attacks on e5 : <input type="checkbox"/>	<input type="checkbox"/>	4
Has either side castled ? Write: C if already castled P if prepared to castle on next move T if temporarily unable to castle X if permanently not allowed to castle	<input type="checkbox"/>	<input type="checkbox"/>	5
In how many ways could each side make a capture on its next move?	<input type="checkbox"/>	<input type="checkbox"/>	6

	White	Black	
In how many ways could each side give check on its next move?	<input type="checkbox"/>	<input type="checkbox"/>	7
How many men from each side have more attackers than they have defenders ? **	<input type="checkbox"/>	<input type="checkbox"/>	8
Who has more material on the board? Write: + if the side is ahead in material - if the side is behind in material = if the side is equal in material	<input type="checkbox"/>	<input type="checkbox"/>	9
How active are the minor pieces of each side? Write: H if still on Home Square C if Captured P if Pinned D if Developed	King-side <input type="checkbox"/>	<input type="checkbox"/>	10
	King-side <input type="checkbox"/>	<input type="checkbox"/>	11
	Queen-side <input type="checkbox"/>	<input type="checkbox"/>	12
	Queen-side <input type="checkbox"/>	<input type="checkbox"/>	13
Does either side have any pawns which are isolated ? (Y or N)	<input type="checkbox"/>	<input type="checkbox"/>	14
Does either side have any pawns which are doubled ? (Y or N)	<input type="checkbox"/>	<input type="checkbox"/>	15
Does either side have a rook positioned on an opened file ? (Y or N)	<input type="checkbox"/>	<input type="checkbox"/>	16
Does either side have a rook on file d or file e ? (Y or N)	<input type="checkbox"/>	<input type="checkbox"/>	17
What moves do you suggest for WHITE from the imagined position? (List 1 or 2 possible moves.) For Question 20, write the best reply you see for the move you listed on line 18.	_____		18
	_____		19
	_____		20

Twenty Questions


Problem 97

NAME: _____

DATE: _____

Copyright © 1998-2003

Photocopying this form for instructional use is permitted.



White just played g3.

To reach POSITION 97, start from the diagram above and picture the moves 1) ... b6, 2) e4 Bb7.

Focus on this imagined position while answering the 20 questions:

	White	Black	
How many times is each side attacking the four central squares : d4, d5, e4, and e5? **	attacks on d4 : <input type="checkbox"/>	<input type="checkbox"/>	1
	attacks on d5 : <input type="checkbox"/>	<input type="checkbox"/>	2
	attacks on e4 : <input type="checkbox"/>	<input type="checkbox"/>	3
	attacks on e5 : <input type="checkbox"/>	<input type="checkbox"/>	4
Has either side castled ? Write: C if already castled P if prepared to castle on next move T if temporarily unable to castle X if permanently not allowed to castle	<input type="checkbox"/>	<input type="checkbox"/>	5
In how many ways could each side make a capture on its next move?	<input type="checkbox"/>	<input type="checkbox"/>	6

	White	Black	
In how many ways could each side give check on its next move?	<input type="checkbox"/>	<input type="checkbox"/>	7
How many men from each side have more attackers than they have defenders ? **	<input type="checkbox"/>	<input type="checkbox"/>	8
Who has more material on the board? Write: + if the side is ahead in material - if the side is behind in material = if the side is equal in material	<input type="checkbox"/>	<input type="checkbox"/>	9
How active are the minor pieces of each side? Write: H if still on Home Square C if Captured P if Pinned D if Developed	King-side <input type="checkbox"/>	<input type="checkbox"/>	10
	King-side <input type="checkbox"/>	<input type="checkbox"/>	11
	Queen-side <input type="checkbox"/>	<input type="checkbox"/>	12
	Queen-side <input type="checkbox"/>	<input type="checkbox"/>	13
Does either side have any pawns which are isolated ? (Y or N)	<input type="checkbox"/>	<input type="checkbox"/>	14
Does either side have any pawns which are doubled ? (Y or N)	<input type="checkbox"/>	<input type="checkbox"/>	15
Does either side have a rook positioned on an opened file ? (Y or N)	<input type="checkbox"/>	<input type="checkbox"/>	16
Does either side have a rook on file d or file e ? (Y or N)	<input type="checkbox"/>	<input type="checkbox"/>	17
What moves do you suggest for WHITE from the imagined position? (List 1 or 2 possible moves.) For Question 20, write the best reply you see for the move you listed on line 18.	_____	_____	18
	_____	_____	19
	_____	_____	20

Twenty Questions


Problem 98

NAME: _____

DATE: _____

Copyright © 1998-2003

Photocopying this form for instructional use is permitted.



Black just played a6.

To reach POSITION 98, start from the diagram above and picture the moves 1) a4 Bd7, 2) Qxc4.

Focus on this imagined position while answering the 20 questions:

	White	Black	
How many times is each side attacking the four central squares : d4, d5, e4, and e5? **	attacks on d4 : <input type="checkbox"/>	<input type="checkbox"/>	1
	attacks on d5 : <input type="checkbox"/>	<input type="checkbox"/>	2
	attacks on e4 : <input type="checkbox"/>	<input type="checkbox"/>	3
	attacks on e5 : <input type="checkbox"/>	<input type="checkbox"/>	4
Has either side castled ? Write: C if already castled P if prepared to castle on next move T if temporarily unable to castle X if permanently not allowed to castle	<input type="checkbox"/>	<input type="checkbox"/>	5
In how many ways could each side make a capture on its next move?	<input type="checkbox"/>	<input type="checkbox"/>	6

	White	Black	
In how many ways could each side give check on its next move?	<input type="checkbox"/>	<input type="checkbox"/>	7
How many men from each side have more attackers than they have defenders ? **	<input type="checkbox"/>	<input type="checkbox"/>	8
Who has more material on the board? Write: + if the side is ahead in material - if the side is behind in material = if the side is equal in material	<input type="checkbox"/>	<input type="checkbox"/>	9
How active are the minor pieces of each side? Write: H if still on Home Square C if Captured P if Pinned D if Developed	King-side <input type="checkbox"/>	<input type="checkbox"/>	10
	King-side <input type="checkbox"/>	<input type="checkbox"/>	11
	Queen-side <input type="checkbox"/>	<input type="checkbox"/>	12
	Queen-side <input type="checkbox"/>	<input type="checkbox"/>	13
Does either side have any pawns which are isolated ? (Y or N)	<input type="checkbox"/>	<input type="checkbox"/>	14
Does either side have any pawns which are doubled ? (Y or N)	<input type="checkbox"/>	<input type="checkbox"/>	15
Does either side have a rook positioned on an opened file ? (Y or N)	<input type="checkbox"/>	<input type="checkbox"/>	16
Does either side have a rook on file d or file e ? (Y or N)	<input type="checkbox"/>	<input type="checkbox"/>	17
What moves do you suggest for BLACK from the imagined position? (List 1 or 2 possible moves.) For Question 20, write the best reply you see for the move you listed on line 18.	_____	_____	18
	_____	_____	19
	_____	_____	20

Twenty Questions


Problem 99

NAME: _____

DATE: _____

Copyright © 1998-2003

Photocopying this form for instructional use is permitted.



White just played Nc3.

To reach **POSITION 99**, start from the diagram above and picture the moves
 1) ... g6,
 2) f4 Nc6.

Focus on this imagined position while answering the 20 questions:

	White	Black	
How many times is each side attacking the four central squares : d4, d5, e4, and e5? **	attacks on d4 : <input type="checkbox"/>	<input type="checkbox"/>	1
	attacks on d5 : <input type="checkbox"/>	<input type="checkbox"/>	2
	attacks on e4 : <input type="checkbox"/>	<input type="checkbox"/>	3
	attacks on e5 : <input type="checkbox"/>	<input type="checkbox"/>	4
Has either side castled ? Write: C if already castled P if prepared to castle on next move T if temporarily unable to castle X if permanently not allowed to castle	<input type="checkbox"/>	<input type="checkbox"/>	5
In how many ways could each side make a capture on its next move?	<input type="checkbox"/>	<input type="checkbox"/>	6

	White	Black	
In how many ways could each side give check on its next move?	<input type="checkbox"/>	<input type="checkbox"/>	7
How many men from each side have more attackers than they have defenders ? **	<input type="checkbox"/>	<input type="checkbox"/>	8
Who has more material on the board? Write: + if the side is ahead in material - if the side is behind in material = if the side is equal in material	<input type="checkbox"/>	<input type="checkbox"/>	9
How active are the minor pieces of each side? Write: H if still on Home Square C if Captured P if Pinned D if Developed	King-side <input type="checkbox"/>	<input type="checkbox"/>	10
	King-side <input type="checkbox"/>	<input type="checkbox"/>	11
	Queen-side <input type="checkbox"/>	<input type="checkbox"/>	12
	Queen-side <input type="checkbox"/>	<input type="checkbox"/>	13
Does either side have any pawns which are isolated ? (Y or N)	<input type="checkbox"/>	<input type="checkbox"/>	14
Does either side have any pawns which are doubled ? (Y or N)	<input type="checkbox"/>	<input type="checkbox"/>	15
Does either side have a rook positioned on an opened file ? (Y or N)	<input type="checkbox"/>	<input type="checkbox"/>	16
Does either side have a rook on file d or file e ? (Y or N)	<input type="checkbox"/>	<input type="checkbox"/>	17
What moves do you suggest for WHITE from the imagined position? (List 1 or 2 possible moves.) For Question 20, write the best reply you see for the move you listed on line 18.	_____	_____	18
	_____	_____	19
	_____	_____	20

Twenty Questions


Problem 100

NAME: _____

DATE: _____

Copyright © 1998-2003

Photocopying this form for instructional use is permitted.



Black just played Ra6.

To reach POSITION 100, start from the diagram above and picture the moves

- 1) Qc2 Nbd5,
- 2) Bd2.

Focus on this imagined position while answering the 20 questions:

	White	Black	
How many times is each side attacking the four central squares: d4, d5, e4, and e5? **	attacks on d4: <input type="checkbox"/>	<input type="checkbox"/>	1
	attacks on d5: <input type="checkbox"/>	<input type="checkbox"/>	2
	attacks on e4: <input type="checkbox"/>	<input type="checkbox"/>	3
	attacks on e5: <input type="checkbox"/>	<input type="checkbox"/>	4
Has either side castled ? Write: C if already castled P if prepared to castle on next move T if temporarily unable to castle X if permanently not allowed to castle	<input type="checkbox"/>	<input type="checkbox"/>	5
In how many ways could each side make a capture on its next move?	<input type="checkbox"/>	<input type="checkbox"/>	6

	White	Black	
In how many ways could each side give check on its next move?	<input type="checkbox"/>	<input type="checkbox"/>	7
How many men from each side have more attackers than they have defenders ? **	<input type="checkbox"/>	<input type="checkbox"/>	8
Who has more material on the board? Write: + if the side is ahead in material - if the side is behind in material = if the side is equal in material	<input type="checkbox"/>	<input type="checkbox"/>	9
How active are the minor pieces of each side? Write: H if still on Home Square C if Captured P if Pinned D if Developed	King-side <input type="checkbox"/>	<input type="checkbox"/>	10
	King-side <input type="checkbox"/>	<input type="checkbox"/>	11
	Queen-side <input type="checkbox"/>	<input type="checkbox"/>	12
	Queen-side <input type="checkbox"/>	<input type="checkbox"/>	13
Does either side have any pawns which are isolated ? (Y or N)	<input type="checkbox"/>	<input type="checkbox"/>	14
Does either side have any pawns which are doubled ? (Y or N)	<input type="checkbox"/>	<input type="checkbox"/>	15
Does either side have a rook positioned on an opened file ? (Y or N)	<input type="checkbox"/>	<input type="checkbox"/>	16
Does either side have a rook on file d or file e ? (Y or N)	<input type="checkbox"/>	<input type="checkbox"/>	17
What moves do you suggest for BLACK from the imagined position? (List 1 or 2 possible moves.) For Question 20, write the best reply you see for the move you listed on line 18.	_____	_____	18
	_____	_____	19
	_____	_____	20